

## Multi Tasking Non Technical Staff and Havaladar CBIC and CBN Examination 2023

Roll Number	
Candidate Name	
Venue Name	iON Digital Zone iDZ 2 Mathura Road
Exam Date	06/09/2023
Exam Time	4:00 PM - 6:00 PM
Subject	MTS Non Tech Havaladar CBIC and CBN Examination 2023

### Section : Numerical and Mathematical Ability

**Q.1** In what ratio should wheat of ₹34 per kg be mixed with wheat of ₹26 per kg so that on selling the mixture at ₹36 per kg, a profit of 20% is gained?

- Ans**
- ✓ 1. 1 : 1
  - ✗ 2. 2 : 3
  - ✗ 3. 1 : 2
  - ✗ 4. 3 : 4

Question ID : 264330156511

Option 1 ID : 264330613434

Option 2 ID : 264330613432

Option 3 ID : 264330613431

Option 4 ID : 264330613433

Status : Answered

Chosen Option : 1

**Q.2** A thief is noticed by a policeman from a distance of 98 m. The thief starts running and the policeman chases him. The thief and policeman run at the speed of 90 km/h and 118.8 km/h, respectively. What is the time taken to catch the thief by a policeman?

- Ans**
- ✗ 1.  $14\frac{1}{4}$  sec
  - ✗ 2.  $10\frac{1}{2}$  sec
  - ✗ 3.  $13\frac{1}{4}$  sec
  - ✓ 4.  $12\frac{1}{4}$  sec

Question ID : 264330154091

Option 1 ID : 264330603830

Option 2 ID : 264330603827

Option 3 ID : 264330603828

Option 4 ID : 264330603829

Status : Answered

Chosen Option : 4

**Q.3** A cube of side 3 cm is melted and smaller cubes of sides 1 cm each are formed. How many such cubes can be formed?

- Ans**
- ☐ 1. 72
  - ☐ 2. 64
  - ☒ 3. 27
  - ☐ 4. 8

Question ID : 264330156085

Option 1 ID : 264330611742

Option 2 ID : 264330611741

Option 3 ID : 264330611739

Option 4 ID : 264330611740

Status : Answered

Chosen Option : 3

**Q.4** What is the average of the prime numbers between 46 and 99, correct to two decimal places?

- Ans**
- ☐ 1. 80.27
  - ☐ 2. 82.70
  - ☒ 3. 70.82
  - ☐ 4. 72.80

Question ID : 264330156545

Option 1 ID : 264330613567

Option 2 ID : 264330613570

Option 3 ID : 264330613568

Option 4 ID : 264330613569

Status : Answered

Chosen Option : 4

**Q.5** If  $a : b = 3 : 2$  and  $b : c = 5 : 4$ , then  $a : b : c$  is:

- Ans**
- ☐ 1. 11 : 8 : 10
  - ☐ 2. 8 : 10 : 15
  - ☒ 3. 15 : 10 : 8
  - ☐ 4. 7 : 10 : 15

Question ID : 264330154082

Option 1 ID : 264330603791

Option 2 ID : 264330603792

Option 3 ID : 264330603794

Option 4 ID : 264330603793

Status : Answered

Chosen Option : 3

**Q.6** Find the least number which when divided by 19, 36 and 54 leaves a remainder of 4 in each case.

**Ans** ✓ 1. 2056

✗ 2. 1854

✗ 3. 2172

✗ 4. 1925

Question ID : 264330155723

Option 1 ID : 264330610297

Option 2 ID : 264330610295

Option 3 ID : 264330610298

Option 4 ID : 264330610296

Status : Answered

Chosen Option : 1

**Q.7** In April, Mr. Khan observed that his balance in his bank account is ₹5,600 for the first 24 days, ₹12,000 for the next two days and ₹37,500 in the last 4 days of the month. What is his daily average balance for April?

**Ans** ✓ 1. ₹10,280

✗ 2. ₹15,280

✗ 3. ₹10,480

✗ 4. ₹14,280

Question ID : 264330154117

Option 1 ID : 264330603933

Option 2 ID : 264330603931

Option 3 ID : 264330603934

Option 4 ID : 264330603932

Status : Answered

Chosen Option : 1

**Q.8** The areas of three adjacent faces of a cuboid are  $p$ ,  $q$  and  $r$  unit<sup>2</sup>, respectively. What is its volume?

**Ans** ✗ 1.  $p^3 q^3 r^3$  unit<sup>3</sup>

✓ 2.  $\sqrt{pqr}$  unit<sup>3</sup>

✗ 3.  $pqr$  unit<sup>3</sup>

✗ 4.  $\sqrt[3]{pqr}$  unit<sup>3</sup>

Question ID : 264330154139

Option 1 ID : 264330604022

Option 2 ID : 264330604021

Option 3 ID : 264330604020

Option 4 ID : 264330604019

Status : Answered

Chosen Option : 2

**Q.9** What will be the amount due on ₹24,000 in 2 years when the rate of simple interest on successive years is 4% per annum and 5% per annum, respectively?

- Ans
- ☒ 1. ₹24,960
  - ☒ 2. ₹25,200
  - ☒ 3. ₹26,208
  - ☒ 4. ₹26,160

Question ID : 264330159035

Option 1 ID : 264330623500

Option 2 ID : 264330623502

Option 3 ID : 264330623499

Option 4 ID : 264330623501

Status : Answered

Chosen Option : 4

**Q.10** Aslam can do a work in 20 days and Bansi in 30 days. If they work on it together for 5 days, then, what is the fraction of the remaining work?

- Ans
- ☒ 1.  $\frac{7}{13}$
  - ☒ 2.  $\frac{7}{12}$
  - ☒ 3.  $\frac{11}{12}$
  - ☒ 4.  $\frac{5}{12}$

Question ID : 264330156115

Option 1 ID : 264330611862

Option 2 ID : 264330611861

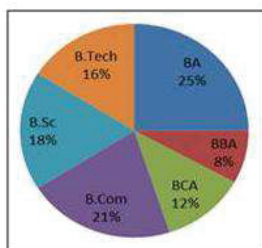
Option 3 ID : 264330611860

Option 4 ID : 264330611859

Status : Answered

Chosen Option : 2

**Q.11** The pie chart shows the percentage of students studying in different courses in a college.  
The degree measure of angle for students studying in BBA is:



- Ans
- ☒ 1.  $32^\circ$
  - ☒ 2.  $36^\circ$
  - ☒ 3.  $48.8^\circ$
  - ☒ 4.  $28.8^\circ$

Question ID : 264330154068

Option 1 ID : 264330603735

Option 2 ID : 264330603736

Option 3 ID : 264330603738

Option 4 ID : 264330603737

Status : Answered

Chosen Option : 4

**Q.12** Sonam covers 230 km in 5 hours. What distance (in km) will she cover in 9 hours?

- Ans**
- ☐ 1. 484
  - ☐ 2. 454
  - ☐ 3. 424
  - ☒ 4. 414

Question ID : 264330155750

Option 1 ID : 264330610403

Option 2 ID : 264330610404

Option 3 ID : 264330610405

Option 4 ID : 264330610406

Status : Answered

Chosen Option : 4

**Q.13** The income of a person first increases by 25% and then decreases by 25%. What % is the new income of the original income?

- Ans**
- ☐ 1.  $91\frac{1}{4}\%$
  - ☒ 2.  $93\frac{3}{4}\%$
  - ☐ 3.  $95\frac{3}{4}\%$
  - ☐ 4.  $92\frac{1}{4}\%$

Question ID : 264330156819

Option 1 ID : 264330614654

Option 2 ID : 264330614653

Option 3 ID : 264330614652

Option 4 ID : 264330614651

Status : Answered

Chosen Option : 2

**Q.14** P, Q and R can complete a piece of work in 6 days, 12 days and 15 days, respectively. P starts working alone on 1<sup>st</sup>, 4<sup>th</sup>, 7<sup>th</sup> ..., Q works alone on 2<sup>nd</sup>, 5<sup>th</sup>, 8<sup>th</sup> ... and R works alone on 3<sup>rd</sup>, 6<sup>th</sup>, 9<sup>th</sup> ... This pattern is continued till the work is completed. In how much time (in days) is the entire work done?

- Ans**
- ☐ 1.  $10\frac{3}{5}$
  - ☒ 2.  $9\frac{3}{10}$
  - ☐ 3.  $9\frac{1}{2}$
  - ☐ 4.  $10\frac{1}{2}$

Question ID : 264330153778

Option 1 ID : 264330602577

Option 2 ID : 264330602576

Option 3 ID : 264330602575

Option 4 ID : 264330602578

Status : Answered

Chosen Option : 2

**Q.15** The ratio of cost price to selling price of an article is 186 : 206. The profit per cent on it is:

- Ans**
- ☒ 1.  $12\frac{50}{93}$
  - ☒ 2.  $12\frac{70}{93}$
  - ☒ 3.  $10\frac{70}{93}$
  - ☒ 4.  $10\frac{50}{93}$

Question ID : 264330155960

Option 1 ID : 264330611239

Option 2 ID : 264330611240

Option 3 ID : 264330611242

Option 4 ID : 264330611241

Status : Answered

Chosen Option : 3

**Q.16** If  $A : B = \frac{1}{3} : \frac{1}{5}$ ,  $B : C = \frac{1}{7} : \frac{1}{8}$  and  $C : D = \frac{1}{10} : \frac{1}{21}$ , then  $A : B : C : D$  is:

- Ans**
- ☒ 1. 40 : 24 : 21 : 10
  - ☒ 2. 48 : 23 : 25 : 8
  - ☒ 3. 8 : 3 : 7 : 5
  - ☒ 4. 14 : 24 : 28 : 10

Question ID : 264330154083

Option 1 ID : 264330603798

Option 2 ID : 264330603795

Option 3 ID : 264330603797

Option 4 ID : 264330603796

Status : Answered

Chosen Option : 1

**Q.17** The table below shows the production of transformers by five different companies in the year 2022 from January to June. Study the table carefully and answer the question that follows.

Month/Company	P	Q	R	S	T
January	145	140	177	163	140
February	178	122	179	188	187
March	185	135	160	130	145
April	150	130	169	148	172
May	146	128	180	137	153
June	128	145	195	148	170

What is the difference between the total production of companies Q and R from the month January to June?

- Ans**
- ☒ 1. 260
  - ☒ 2. 263
  - ☒ 3. 280
  - ☒ 4. 283

Question ID : 264330156572

Option 1 ID : 264330613675

Option 2 ID : 264330613676

Option 3 ID : 264330613677

Option 4 ID : 264330613678

Status : Answered

Chosen Option : 1

**Q.18** Kavita bought a table at 30% discount on its original price. She sold it with 48% increase on the price she bought it. What is the percentage difference between the new sale price and original price? If the original price is ₹8,000, then how much extra money did Kavita get as profit?

- Ans**
- ☒ 1. 5.6%; ₹280
  - ☒ 2. 3.6%; ₹288
  - ☒ 3. 6%; ₹360
  - ☒ 4. 4.5%; ₹308

Question ID : 264330156182

Option 1 ID : 264330612127

Option 2 ID : 264330612129

Option 3 ID : 264330612130

Option 4 ID : 264330612128

Status : Not Answered

Chosen Option : --

**Q.19** What sum of money invested at 8% per annum in  $1\frac{1}{2}$  years, compounded half-yearly, shall become ₹17,576?

- Ans**
- ☒ 1. ₹ 16,500
  - ☒ 2. ₹ 15,000
  - ☒ 3. ₹ 15,525
  - ☒ 4. ₹ 15,625

Question ID : 264330156079

Option 1 ID : 264330611715

Option 2 ID : 264330611716

Option 3 ID : 264330611718

Option 4 ID : 264330611717

Status : Answered

Chosen Option : 4

**Q.20** Simplify:  
 $(15 \div 3) \div 5 + (18 \div 9) \times 3 + (24 \div 6) \times (5 \div 4) = ?$

- Ans**
- ☒ 1. 12
  - ☒ 2. 1
  - ☒ 3. 16
  - ☒ 4. 21

Question ID : 264330156427

Option 1 ID : 264330613102

Option 2 ID : 264330613099

Option 3 ID : 264330613101

Option 4 ID : 264330613100

Status : Answered

Chosen Option : 1

**Q.1** CZMB is related to NNAM in a certain way based on the English alphabetical order. In the same way, LKQD is related to WRLO. To which of the following is HNTF related, following the same logic?

- Ans**
- ☒ 1. SQOU
  - ☒ 2. SUOQ
  - ☒ 3. SOUQ
  - ☒ 4. SUQO

Question ID : 264330154181

Option 1 ID : 264330604189

Option 2 ID : 264330604188

Option 3 ID : 264330604187

Option 4 ID : 264330604190

Status : Answered

Chosen Option : 2

**Q.2** Select the combination of letters that when sequentially placed in the blanks of the given series will make it logically complete.

AC\_F GJ\_ M\_PR \_UVX YA\_D

- Ans**
- ☒ 1. LODBS
  - ☒ 2. DKOBS
  - ☒ 3. DLOSB
  - ☒ 4. HFBHC

Question ID : 264330156316

Option 1 ID : 264330612666

Option 2 ID : 264330612665

Option 3 ID : 264330612664

Option 4 ID : 264330612663

Status : Answered

Chosen Option : 3

**Q.3** If 16 September 1980 is a Tuesday, then what will be the day of the week on 3 September 1985?

- Ans**
- ☒ 1. Tuesday
  - ☒ 2. Saturday
  - ☒ 3. Friday
  - ☒ 4. Sunday

Question ID : 264330154349

Option 1 ID : 264330604860

Option 2 ID : 264330604861

Option 3 ID : 264330604859

Option 4 ID : 264330604862

Status : Answered

Chosen Option : 1



**Q.4** What will come in the place of '?' in the following equation, if '+' and '-' are interchanged and '×' and '÷' are interchanged?

$$321 \times 3 + 81 - 12 \div 8 = ?$$

- Ans**
- ☒ 1. 132
  - ☒ 2. 122
  - ☒ 3. 142
  - ☒ 4. 112

Question ID : 264330155672

Option 1 ID : 264330610092

Option 2 ID : 264330610091

Option 3 ID : 264330610093

Option 4 ID : 264330610094

Status : Answered

Chosen Option : 2

**Q.5** What should come in place of ? in the given series based on the English alphabetical order?

KFY, LGA, MHC, NIE, ?

- Ans**
- ☒ 1. OJG
  - ☒ 2. MIH
  - ☒ 3. NJG
  - ☒ 4. MKI

Question ID : 264330155773

Option 1 ID : 264330610498

Option 2 ID : 264330610497

Option 3 ID : 264330610495

Option 4 ID : 264330610496

Status : Answered

Chosen Option : 1

**Q.6** Read the given statements and conclusions carefully. You have to take the given statements to be true even if they seem to be at variance from commonly known facts. You have to decide which conclusion/s logically follow/s from the given statements.

Statements: Some bats are curtains. All curtains are yellow. All yellow are pens.

Conclusion I: All yellow are curtains.

Conclusion II: Some pens are curtains.

- Ans**
- ☒ 1. Only conclusion (I) is follow.
  - ☒ 2. Both conclusions (I) and (II) are follow.
  - ☒ 3. Neither conclusion (I) nor (II) is follow.
  - ☒ 4. Only conclusion (II) is follow.

Question ID : 264330155910

Option 1 ID : 264330611043

Option 2 ID : 264330611046

Option 3 ID : 264330611045

Option 4 ID : 264330611044

Status : Answered

Chosen Option : 4

**Q.7** What should come in place of ? in the given series based on the English alphabetical order?

HWC, KUD, NSE, QQF, ?

- Ans**
- ☒ 1. RMH
  - ☒ 2. ROF
  - ☒ 3. SNH
  - ☒ 4. TOG

Question ID : 264330155803

Option 1 ID : 264330610617

Option 2 ID : 264330610618

Option 3 ID : 264330610616

Option 4 ID : 264330610615

Status : Answered

Chosen Option : 4

**Q.8** 27 is related to 36 following a certain logic. Following the same logic, 69 is related to 78. To which of the following is 53 related to, following the same logic?

- Ans**
- ☒ 1. 63
  - ☒ 2. 64
  - ☒ 3. 62
  - ☒ 4. 61

Question ID : 264330151598

Option 1 ID : 264330594021

Option 2 ID : 264330594022

Option 3 ID : 264330594020

Option 4 ID : 264330594019

Status : Answered

Chosen Option : 3

**Q.9** What should come in place of ? in the given series?

56    54    50    48    44    ?

- Ans**
- ☒ 1. 40
  - ☒ 2. 38
  - ☒ 3. 42
  - ☒ 4. 36

Question ID : 264330151718

Option 1 ID : 264330594499

Option 2 ID : 264330594501

Option 3 ID : 264330594500

Option 4 ID : 264330594502

Status : Answered

Chosen Option : 3

**Q.10** R, S, T, U, V, W, X and Y are sitting around a square table facing the center of the table. Some of them are sitting at the corners while some are sitting at the exact center of the sides. R is the immediate neighbour of X and Y. X sits in any of the corners. W sits third to the right of T. T does not sit in any of the corners. U is the immediate neighbour of Y and W. V is not the neighbour of W.

How many people sit between W and T, when counted from the right of W?

- Ans** ☒ 1. Four  
☒ 2. Five  
☒ 3. Two  
☒ 4. Three

Question ID : 264330155540

Option 1 ID : 264330609564

Option 2 ID : 264330609563

Option 3 ID : 264330609566

Option 4 ID : 264330609565

Status : Answered

Chosen Option : 1

**Q.11** If 'P' stands for ' $\times$ ', 'Q' stands for '+', 'R' stands for '-' and 'S' stands for ' $\div$ ', what will come in place of the question mark (?) in the following equation?  
 $39\ S\ 6\ P\ 9\ R\ 32\ S\ 15\ P\ 8\ R\ 70 = ?$

- Ans** ☒ 1. 111  
☒ 2. 88  
☒ 3. 91  
☒ 4. 119

Question ID : 264330151791

Option 1 ID : 264330594791

Option 2 ID : 264330594793

Option 3 ID : 264330594792

Option 4 ID : 264330594794

Status : Answered

Chosen Option : 1

**Q.12** What should come in place of ? in the given series?

101 104 109 116 125 ?

- Ans** ☒ 1. 136  
☒ 2. 134  
☒ 3. 135  
☒ 4. 133

Question ID : 264330151545

Option 1 ID : 264330593810

Option 2 ID : 264330593808

Option 3 ID : 264330593809

Option 4 ID : 264330593807

Status : Answered

Chosen Option : 1

**Q.13** 28 is related to 12 following a certain logic. Following the same logic, 42 is related to 19. To which of the following is 52 related to, following the same logic?

- Ans
- ☒ 1. 23
  - ☒ 2. 25
  - ☒ 3. 24
  - ☒ 4. 22

Question ID : 264330151584

Option 1 ID : 264330593964

Option 2 ID : 264330593966

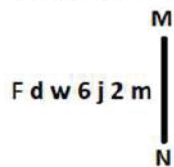
Option 3 ID : 264330593965

Option 4 ID : 264330593963

Status : Answered

Chosen Option : 3

**Q.14** Select the correct mirror image of the given figure when the mirror is placed at MN as shown below.



- Ans
- ☒ 1. m 2 j 6 w d F
  - ☒ 2. 2 m j 6 w b F
  - ☒ 3. m 2 j 6 w b F
  - ☒ 4. m 2 j 6 w d F

Question ID : 264330151505

Option 1 ID : 264330593648

Option 2 ID : 264330593650

Option 3 ID : 264330593649

Option 4 ID : 264330593647

Status : Answered

Chosen Option : 3

**Q.15** In a certain code language, 'MACABRE' is coded as '8' and 'HEDONISM' is coded as '9'. What is the code for 'ERUPT' in the given code language?

- Ans
- ☒ 1. 8
  - ☒ 2. 6
  - ☒ 3. 5
  - ☒ 4. 7

Question ID : 264330155823

Option 1 ID : 264330610695

Option 2 ID : 264330610697

Option 3 ID : 264330610696

Option 4 ID : 264330610698

Status : Answered

Chosen Option : 2

**Q.16** Read the given statements and conclusions carefully. You have to take the given statements to be true even if they seem to be at variance from commonly known facts. You have to decide which conclusion/s logically follow/s from the given statements.

Statements: All flowers are orange. Some orange is colour. All colours are bright.

Conclusion I: Some orange are flowers.

Conclusion II: All colour is orange.

**Ans**

- ✓ 1. Only conclusion (I) is follow.
- ✗ 2. Both conclusions (I) and (II) are follow.
- ✗ 3. Only conclusion (II) is follow.
- ✗ 4. Neither conclusion (I) nor (II) is follow.

Question ID : 264330155904

Option 1 ID : 264330611019


Option 2 ID : 264330611022

Option 3 ID : 264330611020

Option 4 ID : 264330611021

Status : Answered

Chosen Option : 1



**Q.17** Which figure should replace the question mark (?) if the following figure series were to be continued?

D	X	Y	8	Y	9	9	8	Y	↑	Y	D	
8	↑		D	X		↑	=		9	8		?
		9			↑		D			=		

Ans

✓ 1.

D	↑	Y
=	S	
		9

✗ 2.

9	↑	=
8	Y	
		D

✗ 3.

Y	D	↑
=	S	
		9

✗ 4.

D	↑	Y
=	9	
		8

Question ID : 264330154757

Option 1 ID : 264330606493

Option 2 ID : 264330606492

Option 3 ID : 264330606494

Option 4 ID : 264330606491

Status : Not Answered

Chosen Option : --

**Q.18** Select the option figure in which the given figure (X) is embedded as its part (rotation is NOT allowed).



**Ans**

☒ 1.



☒ 2.



☒ 3.



☒ 4.



Question ID : 264330151728

Option 1 ID : 264330594540

Option 2 ID : 264330594539

Option 3 ID : 264330594542

Option 4 ID : 264330594541

Status : Answered

Chosen Option : 2

**Q.19** In a certain code language, 'never lose hope' is coded as 'tu fk mb' and 'winners never quit' is coded as 'dg vc fk'. How is 'never' coded in the given language?

**Ans**

☒ 1. vc

☒ 2. tu

☒ 3. fk

☒ 4. dg

Question ID : 264330151696

Option 1 ID : 264330594414

Option 2 ID : 264330594411

Option 3 ID : 264330594412

Option 4 ID : 264330594413

Status : Answered

Chosen Option : 3

Q.20 What should come in place of ? in the given series?

175 180 185 190 195 ?

- Ans
- ☒ 1. 207
  - ☒ 2. 204
  - ☒ 3. 201
  - ☒ 4. 200

Question ID : 264330151544

Option 1 ID : 264330593805

Option 2 ID : 264330593804

Option 3 ID : 264330593803

Option 4 ID : 264330593806

Status : Answered

Chosen Option : 4

Section : General Awareness

Q.1 Which of the following countries did India beat to win the Men's Hockey Junior Asia Cup 2023?

- Ans
- ☒ 1. South Korea
  - ☒ 2. Thailand
  - ☒ 3. Pakistan
  - ☒ 4. Japan

Question ID : 264330161135

Option 1 ID : 264330631872

Option 2 ID : 264330631874

Option 3 ID : 264330631871

Option 4 ID : 264330631873

Status : Answered

Chosen Option : 1

Q.2 In the realm of soil science, humus is considered:

- Ans
- ☒ 1. synthetic additive
  - ☒ 2. decaying organic matter in soil
  - ☒ 3. mineral-rich compound
  - ☒ 4. inorganic material

Question ID : 264330161317

Option 1 ID : 264330632598

Option 2 ID : 264330632597

Option 3 ID : 264330632595

Option 4 ID : 264330632596

Status : Answered

Chosen Option : 1



**Q.3 Which group of crops belong to fibre crops and are produced on a large scale in India?**

- Ans** ☒ 1. Gram and tur  
☒ 2. Jute and hemp  
☒ 3. Tea and coffee  
☒ 4. Wheat and rice

Question ID : 264330160138

Option 1 ID : 264330627892

Option 2 ID : 264330627894

Option 3 ID : 264330627893

Option 4 ID : 264330627891

Status : Answered

Chosen Option : 1

**Q.4 Name the life-threatening disease caused by protozoa of the genus Trypanosoma that is transmitted to human hosts through the bite of infected tsetse flies.**

- Ans** ☒ 1. Sleeping sickness  
☒ 2. Chagas disease  
☒ 3. Giardiasis  
☒ 4. Kala-azar

Question ID : 264330161077

Option 1 ID : 264330631642

Option 2 ID : 264330631639

Option 3 ID : 264330631640

Option 4 ID : 264330631641

Status : Answered

Chosen Option : 4

**Q.5 Who is an acclaimed Kathak dancer with many awards to his credit?**

- Ans** ☒ 1. Pandit Shiv Kumar Sharma  
☒ 2. Ustad Alla Rakha  
☒ 3. Pandit Birju Maharaj  
☒ 4. Ustad Bismillah Khan

Question ID : 264330160981

Option 1 ID : 264330631255

Option 2 ID : 264330631257

Option 3 ID : 264330631258

Option 4 ID : 264330631256

Status : Answered

Chosen Option : 3

**Q.6 'Pinjar' is a novel by \_\_\_\_\_.**

- Ans** ☒ 1. Kiran Desai  
☒ 2. Kamala Das  
☒ 3. Anita Desai  
☒ 4. Amrita Pritam

Question ID : 264330160969

Option 1 ID : 264330631209

Option 2 ID : 264330631210

Option 3 ID : 264330631208

Option 4 ID : 264330631207

Status : Answered

Chosen Option : 1

**Q.7 When was the Asian Games organised in India for the second time?**

- Ans ☒ 1. 1994  
☒ 2. 1986  
☒ 3. 1982  
☒ 4. 1998

Question ID : 264330158237

Option 1 ID : 264330620309

Option 2 ID : 264330620307

Option 3 ID : 264330620308

Option 4 ID : 264330620310

Status : Answered

Chosen Option : 1

**Q.8 Who nominates members to the Rajya Sabha based on their excellence in literature, science, art and social service?**

- Ans ☒ 1. The Chief Justice of India  
☒ 2. The President  
☒ 3. The Chairman of the Rajya Sabha  
☒ 4. The Prime Minister

Question ID : 264330161292

Option 1 ID : 264330632498

Option 2 ID : 264330632497

Option 3 ID : 264330632496

Option 4 ID : 264330632495

Status : Answered

Chosen Option : 2

**Q.9 Which Indian musician is associated with the Flute?**

- Ans ☒ 1. Pandit Hari Prasad Chaurasia  
☒ 2. Ustad Zakir Hussain  
☒ 3. Pandit Ravi Shankar  
☒ 4. Ustad Allahrakha

Question ID : 264330162231

Option 1 ID : 264330636251

Option 2 ID : 264330636254

Option 3 ID : 264330636253

Option 4 ID : 264330636252

Status : Answered

Chosen Option : 1

**Q.10 The black soil area of the \_\_\_\_\_ is known as the Deccan Trap.**

- Ans ☒ 1. Northern Plains  
☒ 2. Peninsular Plateau  
☒ 3. Coastal Plains  
☒ 4. Himalayan Mountains

Question ID : 264330161524

Option 1 ID : 264330633424

Option 2 ID : 264330633423

Option 3 ID : 264330633426

Option 4 ID : 264330633425

Status : Answered

Chosen Option : 2

Q.11 When did the British East India Company start the 'permanent settlement system'?

Ans ☒ 1. 1793 CE

☐ 2. 1773 CE

☐ 3. 1799 CE

☐ 4. 1780 CE

Question ID : 264330162317

Option 1 ID : 264330636597

Option 2 ID : 264330636595

Option 3 ID : 264330636598

Option 4 ID : 264330636596

Status : Answered

Chosen Option : 1

Q.12 The word 'Swaraj' was first used by Dadabhai Naoroji in the Congress session held in which place?

Ans ☐ 1. Madras

☐ 2. Surat

☒ 3. Calcutta

☐ 4. Lucknow

Question ID : 264330162327

Option 1 ID : 264330636636

Option 2 ID : 264330636635

Option 3 ID : 264330636638

Option 4 ID : 264330636637

Status : Answered

Chosen Option : 3

Q.13 Chhau, identified by the Ministry of Culture as a classical dance, is prevalent in eastern India and has three distinct forms. Which of the following is NOT one of them?

Ans ☐ 1. Seraikela Chhau of Jharkhand

☒ 2. Marwahi Chhau of Chhattisgarh

☐ 3. Purulia Chhau of West Bengal

☐ 4. Mayurbhanj Chhau of Odisha

Question ID : 264330160792

Option 1 ID : 264330630500

Option 2 ID : 264330630502

Option 3 ID : 264330630501

Option 4 ID : 264330630499

Status : Answered

Chosen Option : 2

Q.14 According to the Global Multidimensional Poverty Index 2022, which of the following states is NOT included in 10 poorest states?

Ans ☒ 1. Gujarat

☐ 2. Assam

☐ 3. Odisha

☐ 4. Uttar Pradesh

Question ID : 264330161502

Option 1 ID : 264330633337

Option 2 ID : 264330633335

Option 3 ID : 264330633338

Option 4 ID : 264330633336

Status : Answered

Chosen Option : 1

**Q.15 Which Clause of Article 19 of the Indian Constitution guarantees the 'right to move freely throughout the territory of India'?**

- Ans
- ☒ 1. Clause (b)
  - ☒ 2. Clause (c)
  - ☒ 3. Clause (d)
  - ☒ 4. Clause (a)

Question ID : 264330162249  
Option 1 ID : 264330636324  
Option 2 ID : 264330636325  
Option 3 ID : 264330636326  
Option 4 ID : 264330636323  
Status : Answered  
Chosen Option : 2

**Q.16 Who among the following was a renowned player of the musical instrument called 'Santoor'?**

- Ans
- ☒ 1. Pandit Hariprasad Chaurasia
  - ☒ 2. Pandit Kumar Gandharva
  - ☒ 3. Pandit Shivkumar Sharma
  - ☒ 4. Pandit Ravi Shankar

Question ID : 264330155462  
Option 1 ID : 264330609253  
Option 2 ID : 264330609251  
Option 3 ID : 264330609254  
Option 4 ID : 264330609252  
Status : Answered  
Chosen Option : 3

**Q.17 The President of India conferred the Padma Shri award to Sanathoiba Sharma for his distinguished service in the field of \_\_\_\_\_ in 2023.**

- Ans
- ☒ 1. Mukna
  - ☒ 2. Khong Kangjei
  - ☒ 3. Thang-Ta
  - ☒ 4. Yubi Lakpi

Question ID : 264330161444  
Option 1 ID : 264330633105  
Option 2 ID : 264330633104  
Option 3 ID : 264330633103  
Option 4 ID : 264330633106  
Status : Answered  
Chosen Option : 1

**Q.18 Rikham pada dance belongs to which of the following states?**

- Ans
- ☒ 1. Meghalaya
  - ☒ 2. Assam
  - ☒ 3. Mizoram
  - ☒ 4. Arunachal Pradesh

Question ID : 264330159059  
Option 1 ID : 264330623597  
Option 2 ID : 264330623596  
Option 3 ID : 264330623598  
Option 4 ID : 264330623595  
Status : Answered  
Chosen Option : 1

Q.19 Which theory was published by John Dalton in 1808 to explain chemical reactions?

- Ans ☒ 1. Atomic theory  
☐ 2. Valence bond theory  
☐ 3. Quantum field theory  
☐ 4. Molecular orbital theory

Question ID : 264330161057  
Option 1 ID : 264330631559  
Option 2 ID : 264330631561  
Option 3 ID : 264330631560  
Option 4 ID : 264330631562  
Status : Answered  
Chosen Option : 1

Q.20 What is the main function of money in an economy?

- Ans ☐ 1. To regulate interest rates  
☐ 2. To create wealth  
☒ 3. To facilitate exchange  
☐ 4. To control inflation

Question ID : 264330157297  
Option 1 ID : 264330616554  
Option 2 ID : 264330616552  
Option 3 ID : 264330616551  
Option 4 ID : 264330616553  
Status : Answered  
Chosen Option : 3

Q.21 Who among the following designed the India Gate?

- Ans ☐ 1. Lord Wavell  
☐ 2. Lord Dalhousie  
☒ 3. Edwin Lutyens  
☐ 4. John Nash

Question ID : 264330160773  
Option 1 ID : 264330630423  
Option 2 ID : 264330630425  
Option 3 ID : 264330630424  
Option 4 ID : 264330630426  
Status : Answered  
Chosen Option : 3

Q.22 In 2022, the Centre constituted a committee headed by former Union Agriculture Secretary \_\_\_\_\_ to look into the issues of minimum support price (MSP).

- Ans ☒ 1. Sanjay Agrawal  
☐ 2. P Chandrashekhar  
☐ 3. Radha Mohan Singh  
☐ 4. JP Sharma

Question ID : 264330161410  
Option 1 ID : 264330632968  
Option 2 ID : 264330632969  
Option 3 ID : 264330632967  
Option 4 ID : 264330632970  
Status : Answered  
Chosen Option : 1

Q.23 One of the prominent festivals celebrated in \_\_\_\_\_ is the 'Me-Dum-Me-Phi', i.e., the ancestor worship festival.

- Ans ☒ 1. Assam  
☒ 2. Nagaland  
☒ 3. Manipur  
☒ 4. Meghalaya

Question ID : 264330160820

Option 1 ID : 264330630611

Option 2 ID : 264330630613

Option 3 ID : 264330630614

Option 4 ID : 264330630612

Status : Answered

Chosen Option : 2

Q.24 निम्नलिखित में से सरकारी बजट में राजस्व व्यय का उदाहरण कौन-सा है?

- Ans ☒ 1. नए राजमार्ग का निर्माण  
☒ 2. किसी राज्य-स्वामित्व वाली कंपनी में निवेश  
☒ 3. सरकारी कर्मचारियों के वेतन का भुगतान  
☒ 4. ऋण का पुनर्भुगतान

Question ID : 264330157275

Option 1 ID : 264330616463

Option 2 ID : 264330616466

Option 3 ID : 264330616464

Option 4 ID : 264330616465

Status : Answered

Chosen Option : 2

Q.25 'The Fall of a Sparrow' is an autobiography of \_\_\_\_\_.

- Ans ☒ 1. Salim Ali  
☒ 2. Raj Kapoor  
☒ 3. Kapil Dev  
☒ 4. Atal Bihari Vajpayee

Question ID : 264330155490

Option 1 ID : 264330609364

Option 2 ID : 264330609366

Option 3 ID : 264330609365

Option 4 ID : 264330609363

Status : Answered

Chosen Option : 1

**Q.1** Select the most appropriate meaning of the given idiom.  
**Be like chalk and cheese**

- Ans** ☒ 1. To be completely different from each other  
☒ 2. To be very similar to each other  
☒ 3. To have a close relation with another person  
☒ 4. To be distantly related to each other

Question ID : 264330153410

Option 1 ID : 264330601175

Option 2 ID : 264330601176

Option 3 ID : 264330601177

Option 4 ID : 264330601178

Status : Answered

Chosen Option : 3

**Q.2** Select the most appropriate **ANTONYM** of the underlined word.  
Everyone liked the lively music being played at the restaurant.

- Ans** ☒ 1. Durable  
☒ 2. Cheerful  
☒ 3. Speedy  
☒ 4. Sombre

Question ID : 264330153408

Option 1 ID : 264330601168

Option 2 ID : 264330601167

Option 3 ID : 264330601169

Option 4 ID : 264330601170

Status : Answered

Chosen Option : 4

**Q.3** Select the **INCORRECTLY** spelt word.

- Ans** ☒ 1. Fourty  
☒ 2. Committee  
☒ 3. Hypnotic  
☒ 4. Tennessee

Question ID : 264330153219

Option 1 ID : 264330600435

Option 2 ID : 264330600436

Option 3 ID : 264330600438

Option 4 ID : 264330600437

Status : Answered

Chosen Option : 1

**Q.4** Select the option that can be used as a one-word substitute for the underlined segment in the following sentence.

Raymond has opted the study of religion as his major subject in graduation.

- Ans
- ☒ 1. Psephology
  - ☒ 2. Philology
  - ☒ 3. Theology
  - ☒ 4. Psychology

Question ID : 264330152715

Option 1 ID : 264330598459

Option 2 ID : 264330598461

Option 3 ID : 264330598462

Option 4 ID : 264330598460

Status : Answered

Chosen Option : 3

**Q.5** Select the most appropriate idiom from the given options to fill in the blank.

Greta Thunberg \_\_\_\_\_ when she dared to question about accountability with respect to global warming and climate change.

- Ans
- ☒ 1. sowed wild oats
  - ☒ 2. kept the pot boiling
  - ☒ 3. gave the devil his due
  - ☒ 4. hit the nail on the head

Question ID : 264330152685

Option 1 ID : 264330598346

Option 2 ID : 264330598345

Option 3 ID : 264330598343

Option 4 ID : 264330598344

Status : Answered

Chosen Option : 1

**Q.6** Select the most appropriate option that can substitute the underlined segment in the given sentence. If there is no need to substitute it, select 'No substitution required'.

When Rajesh was going to college, he meet with an accident.

- Ans
- ☒ 1. has met
  - ☒ 2. meets
  - ☒ 3. met
  - ☒ 4. No substitution required

Question ID : 264330152727

Option 1 ID : 264330598508

Option 2 ID : 264330598507

Option 3 ID : 264330598509

Option 4 ID : 264330598510

Status : Answered

Chosen Option : 3



Q.7 Parts of the following sentence have been underlined and given as options. Select the option that contains an error.

As soon as I shall win the lottery, I hope to buy a Ferrari.

- Ans
- ☒ 1. hope
  - ☒ 2. As soon as
  - ☒ 3. shall win
  - ☒ 4. a Ferrari

Question ID : 264330159746

Option 1 ID : 264330626341

Option 2 ID : 264330626339

Option 3 ID : 264330626340

Option 4 ID : 264330626342

Status : Answered

Chosen Option : 1

Q.8 Select the most appropriate option to fill in the blank.

Some things are meant to be, and death is \_\_\_\_\_ for humans.

- Ans
- ☒ 1. edible
  - ☒ 2. spiral
  - ☒ 3. natural
  - ☒ 4. viral

Question ID : 264330153497

Option 1 ID : 264330601506

Option 2 ID : 264330601505

Option 3 ID : 264330601504

Option 4 ID : 264330601503

Status : Answered

Chosen Option : 3

Q.9 Select the option that rectifies the spelling of the underlined word in the given sentence.

They complained that their manager was incompietent and knew nothing about the project.

- Ans
- ☒ 1. incompet
  - ☒ 2. incompetant
  - ☒ 3. inomepetent
  - ☒ 4. incompetent

Question ID : 264330152837

Option 1 ID : 264330598939

Option 2 ID : 264330598941

Option 3 ID : 264330598942

Option 4 ID : 264330598940

Status : Answered

Chosen Option : 4

**Q.10** Select the most appropriate synonym of the given word.  
**Distinguished**

- Ans** ☒ 1. Mirrored  
☒ 2. Dignified  
☒ 3. Dramatic  
☒ 4. Mediocre

Question ID : 264330153558

Option 1 ID : 264330601733

Option 2 ID : 264330601731

Option 3 ID : 264330601732

Option 4 ID : 264330601734

Status : Answered

Chosen Option : 2

**Q.11** Select the most appropriate ANTONYM of the given word.  
**Periodic**

- Ans** ☒ 1. Holistic  
☒ 2. Dynamic  
☒ 3. Irregular  
☒ 4. Tedious

Question ID : 264330151913

Option 1 ID : 264330595269

Option 2 ID : 264330595267

Option 3 ID : 264330595270

Option 4 ID : 264330595268

Status : Answered

Chosen Option : 1

**Q.12** The following sentence has been split into four segments. Identify the segment that contains an error.

**Manisha saw an old elephant / in the wildlife reserve / while she was / on safari tour.**

- Ans** ☒ 1. on safari tour  
☒ 2. Manisha saw an old elephant  
☒ 3. while she was  
☒ 4. in the wildlife reserve

Question ID : 264330155316

Option 1 ID : 264330608706

Option 2 ID : 264330608703

Option 3 ID : 264330608705

Option 4 ID : 264330608704

Status : Answered

Chosen Option : 3

**Q.13** Parts of the following sentence have been given as options. Select the option that contains an error.

In Nepal, the food is more cheaper than in Sri Lanka.

- Ans ☒ 1. more cheaper  
☒ 2. the food is  
☒ 3. than in Sri Lanka  
☒ 4. In Nepal

Question ID : 264330152799

Option 1 ID : 264330598789

Option 2 ID : 264330598788

Option 3 ID : 264330598790

Option 4 ID : 264330598787

Status : Answered

Chosen Option : 1

**Q.14** Select the most appropriate option to fill in the blank.

Most times, he is sitting alone, immersed in his own \_\_\_\_\_.

- Ans ☒ 1. synagogue  
☒ 2. monologue  
☒ 3. mystagogue  
☒ 4. prologue

Question ID : 264330153436

Option 1 ID : 264330601267

Option 2 ID : 264330601269

Option 3 ID : 264330601270

Option 4 ID : 264330601268

Status : Answered

Chosen Option : 2

**Q.15** Identify the INCORRECTLY spelt word in the following sentence and select its correct spelling from the given options.

He has neither the policies nor the persanol charisma to inspire people.

- Ans ☒ 1. cherisma  
☒ 2. polecies  
☒ 3. personal  
☒ 4. niether

Question ID : 264330153109

Option 1 ID : 264330600002

Option 2 ID : 264330600000

Option 3 ID : 264330600001

Option 4 ID : 264330599999

Status : Answered

Chosen Option : 3

**Q.16** Select the most appropriate meaning of the underlined idiom.

The judge wanted to hear straight from the horse's mouth.

- Ans ☒ 1. Directly from the lawyer
- ☒ 2. Directly from the person involved
- ☒ 3. In close vicinity to the juror
- ☒ 4. Having ears which never fail

Question ID : 264330153149

Option 1 ID : 264330600156

Option 2 ID : 264330600155

Option 3 ID : 264330600157

Option 4 ID : 264330600158

Status : Answered

Chosen Option : 2

**Q.17** Select the most appropriate option that can substitute the underlined segment in the given sentence. If there is no need to substitute it, select 'No substitution required'.  
Virtual reality is the creation of a virtual environment presented to our senses in such a way that we experience it as if we were really there.

- Ans ☒ 1. presenting to our senses
- ☒ 2. presenting in our senses
- ☒ 3. presents to our senses
- ☒ 4. No substitution required

Question ID : 264330151899

Option 1 ID : 264330595212

Option 2 ID : 264330595213

Option 3 ID : 264330595211

Option 4 ID : 264330595214

Status : Answered

Chosen Option : 1

**Q.18** Select the most appropriate idiom from the given options to fill in the blank.  
Being a journalist, your first duty is to \_\_\_\_\_ or else your colleagues might surpass you.

- Ans ☒ 1. eat a humble pie
- ☒ 2. have an axe to grind
- ☒ 3. build castles in the air
- ☒ 4. keep your ear to the ground

Question ID : 264330152686

Option 1 ID : 264330598348

Option 2 ID : 264330598349

Option 3 ID : 264330598347

Option 4 ID : 264330598350

Status : Answered

Chosen Option : 4

**Q.19** The following sentence has been divided into four parts. Identify the part that contains an error.

(A) He will come / (B) and receive you / (C) at the station / (D) when you will arrive.

- Ans
- ☒ 1. A
  - ☒ 2. B
  - ☒ 3. C
  - ☒ 4. D

Question ID : 264330152626

Option 1 ID : 264330598108

Option 2 ID : 264330598110

Option 3 ID : 264330598109

Option 4 ID : 264330598107

Status : Answered

Chosen Option : 4

**Q.20** The following sentence has been split into four segments. Identify the segment that contains a grammatical error.

She is very good / in playing / the guitar / and singing songs.

- Ans
- ☒ 1. in playing
  - ☒ 2. and singing songs
  - ☒ 3. the guitar
  - ☒ 4. She is very good

Question ID : 264330155427

Option 1 ID : 264330609116

Option 2 ID : 264330609118

Option 3 ID : 264330609117

Option 4 ID : 264330609115

Status : Answered

Chosen Option : 3

### Comprehension:

In the following passage, some words have been deleted. Read the passage carefully and select the most appropriate option to fill in each blank.

Environmental pollution is a growing (1)\_\_\_\_\_ all around the world as it poses significant risks to human health and ecosystems. The (2)\_\_\_\_\_ of environmental pollution vary from natural causes such as volcanic emissions to human actions, including industrialisation, transportation, energy production and agricultural practices. (3)\_\_\_\_\_ of these activities, pollutants are released into the air, water bodies and soil leading to harmful effects such as respiratory diseases, loss of biodiversity and climate change. One of the primary causes of environmental pollution is human attitudes towards sustainability (4)\_\_\_\_\_ their lack of environmental awareness. Human activities that harm the environment and ecosystem often result from individual choices (5)\_\_\_\_\_ driving or using single-use plastics.

### SubQuestion No : 21

**Q.21** Select the most appropriate option to fill in blank number 1.

- Ans
- ☒ 1. interest
  - ☒ 2. duty
  - ☒ 3. concern
  - ☒ 4. charge

Question ID : 264330153398

Option 1 ID : 264330601130

Option 2 ID : 264330601128

Option 3 ID : 264330601129

Option 4 ID : 264330601127

Status : Answered

Chosen Option : 3

**Comprehension:**

In the following passage, some words have been deleted. Read the passage carefully and select the most appropriate option to fill in each blank.

Environmental pollution is a growing (1)\_\_\_\_\_ all around the world as it poses significant risks to human health and ecosystems. The (2)\_\_\_\_\_ of environmental pollution vary from natural causes such as volcanic emissions to human actions, including industrialisation, transportation, energy production and agricultural practices. (3)\_\_\_\_\_ of these activities, pollutants are released into the air, water bodies and soil leading to harmful effects such as respiratory diseases, loss of biodiversity and climate change. One of the primary causes of environmental pollution is human attitudes towards sustainability (4)\_\_\_\_\_ their lack of environmental awareness. Human activities that harm the environment and ecosystem often result from individual choices (5)\_\_\_\_\_ driving or using single-use plastics.

**SubQuestion No : 22**

**Q.22** Select the most appropriate option to fill in blank number 2.

- Ans ☒ 1. sourcing  
☒ 2. sources  
☒ 3. sourced  
☒ 4. source

Question ID : 264330153399

Option 1 ID : 264330601132

Option 2 ID : 264330601134

Option 3 ID : 264330601133

Option 4 ID : 264330601131

Status : Answered

Chosen Option : 2

**Comprehension:**

In the following passage, some words have been deleted. Read the passage carefully and select the most appropriate option to fill in each blank.

Environmental pollution is a growing (1)\_\_\_\_\_ all around the world as it poses significant risks to human health and ecosystems. The (2)\_\_\_\_\_ of environmental pollution vary from natural causes such as volcanic emissions to human actions, including industrialisation, transportation, energy production and agricultural practices. (3)\_\_\_\_\_ of these activities, pollutants are released into the air, water bodies and soil leading to harmful effects such as respiratory diseases, loss of biodiversity and climate change. One of the primary causes of environmental pollution is human attitudes towards sustainability (4)\_\_\_\_\_ their lack of environmental awareness. Human activities that harm the environment and ecosystem often result from individual choices (5)\_\_\_\_\_ driving or using single-use plastics.

**SubQuestion No : 23**

**Q.23** Select the most appropriate option to fill in blank number 3.

- Ans ☒ 1. Since  
☒ 2. However  
☒ 3. As a result  
☒ 4. Therefore

Question ID : 264330153400

Option 1 ID : 264330601136

Option 2 ID : 264330601138

Option 3 ID : 264330601137

Option 4 ID : 264330601135

Status : Answered

Chosen Option : 3

**Comprehension:**

In the following passage, some words have been deleted. Read the passage carefully and select the most appropriate option to fill in each blank.

Environmental pollution is a growing (1)\_\_\_\_\_ all around the world as it poses significant risks to human health and ecosystems. The (2)\_\_\_\_\_ of environmental pollution vary from natural causes such as volcanic emissions to human actions, including industrialisation, transportation, energy production and agricultural practices. (3)\_\_\_\_\_ of these activities, pollutants are released into the air, water bodies and soil leading to harmful effects such as respiratory diseases, loss of biodiversity and climate change. One of the primary causes of environmental pollution is human attitudes towards sustainability (4)\_\_\_\_\_ their lack of environmental awareness. Human activities that harm the environment and ecosystem often result from individual choices (5)\_\_\_\_\_ driving or using single-use plastics.

**SubQuestion No : 24**

**Q.24** Select the most appropriate option to fill in blank number 4.

Ans ☒ 1. and

☐ 2. since

☐ 3. but

☐ 4. because

Question ID : 264330153401

Option 1 ID : 264330601139

Option 2 ID : 264330601141

Option 3 ID : 264330601140

Option 4 ID : 264330601142

Status : Answered

Chosen Option : 1

**Comprehension:**

In the following passage, some words have been deleted. Read the passage carefully and select the most appropriate option to fill in each blank.

Environmental pollution is a growing (1)\_\_\_\_\_ all around the world as it poses significant risks to human health and ecosystems. The (2)\_\_\_\_\_ of environmental pollution vary from natural causes such as volcanic emissions to human actions, including industrialisation, transportation, energy production and agricultural practices. (3)\_\_\_\_\_ of these activities, pollutants are released into the air, water bodies and soil leading to harmful effects such as respiratory diseases, loss of biodiversity and climate change. One of the primary causes of environmental pollution is human attitudes towards sustainability (4)\_\_\_\_\_ their lack of environmental awareness. Human activities that harm the environment and ecosystem often result from individual choices (5)\_\_\_\_\_ driving or using single-use plastics.

**SubQuestion No : 25**

**Q.25** Select the most appropriate option to fill in blank number 5.

Ans ☐ 1. example

☐ 2. while

☒ 3. like

☐ 4. instance

Question ID : 264330153402

Option 1 ID : 264330601144

Option 2 ID : 264330601143

Option 3 ID : 264330601146

Option 4 ID : 264330601145

Status : Answered

Chosen Option : 3