

IB Security Assistant & MTS

Previous Year Paper
23 Mar, 2023 Shift 1

Test Date	23/03/2023
Test Time	9:00 AM - 10:00 AM
Subject	Security Assistant & Multi Tasking Staff

Section : General Awareness

Q.1 Which Indian badminton player won the gold medal in men's singles badminton at the Commonwealth Games 2022?

- Ans ☒ 1. Chirag Shetty
- ☒ 2. Lakshay Sen
- ☒ 3. Satwiksairaj Rankireddy
- ☒ 4. Srikanth Kidambi

Question ID : 630680192750
Status : Answered
Chosen Option : 2

Q.2 The normal boiling point of water is_____.

- Ans ☒ 1. 373 K
- ☒ 2. 371 K
- ☒ 3. 377 K
- ☒ 4. 375 K

Question ID : 630680192763
Status : Answered
Chosen Option : 1

Q.3 Which is not a percussion instrument from following?

- Ans ☒ 1. Cymbal
- ☒ 2. Timpani
- ☒ 3. Harp
- ☒ 4. Maracas

Question ID : 630680192755
Status : Not Answered
Chosen Option : --

Q.4 Kuchipudi is one of the major dance forms of India that originated in the state of _____.

- Ans
- ☐ 1. Kerala
 - ☐ 2. Uttar Pradesh
 - ☐ 3. Assam
 - ☒ 4. Andhra Pradesh

Question ID : 630680192753
Status : Answered
Chosen Option : 4

Q.5 Thomas Edison was _____inventor who received the historic patent for the light bulb.

- Ans
- ☐ 1. a British
 - ☐ 2. a German
 - ☐ 3. a Dutch
 - ☒ 4. an American

Question ID : 630680192758
Status : Answered
Chosen Option : 4

Q.6 Which of the following is the Ladakhi dance that got its place in the Guinness Book of World Records?

- Ans
- ☐ 1. Kathok Chenmo
 - ☐ 2. Shon dance
 - ☒ 3. Shondol dance
 - ☐ 4. Spao dance

Question ID : 630680192752
Status : Not Answered
Chosen Option : --

Q.7 UN General Secretary visited which place in October 2022 to attend the launch of a Special Environmental Programme along with Prime Minister Narender Modi?

- Ans
- ☐ 1. Surat
 - ☐ 2. Gandhi Nagar
 - ☒ 3. Kevadiya
 - ☐ 4. Ahmedabad

Question ID : 630680192746
Status : Not Answered
Chosen Option : --

Q.8 Which of the following is NOT used as an indicator to detect acid or base?

- Ans
- ☒ 1. Table salt
 - ☐ 2. Red cabbage leaves
 - ☐ 3. Turmeric
 - ☐ 4. Litmus

Question ID : 630680192761
Status : Answered
Chosen Option : 2

Q.9 In which state of India was the 6th National Women's Marathon-2022 organised with the object to promoting women empowerment and save the girl child?

- Ans
- ☒ 1. Rajasthan
 - ☒ 2. Uttar Pradesh
 - ☒ 3. Madhya Pradesh
 - ☒ 4. Punjab

Question ID : 630680192745
Status : Not Answered
Chosen Option : --

Q.10 What is the name of the large-plucked string instrument used in Carnatic classical music and made from the Jackwood Tree?

- Ans
- ☒ 1. Ghatam
 - ☒ 2. Saraswati Veena
 - ☒ 3. Violin
 - ☒ 4. Banjo

Question ID : 630680192754
Status : Answered
Chosen Option : 2

Q.11 The chemical name of which compound is sodium hydrogen carbonate?

- Ans
- ☒ 1. Plaster of Paris
 - ☒ 2. Baking Soda
 - ☒ 3. Gypsum
 - ☒ 4. Washing Soda

Question ID : 630680192762
Status : Answered
Chosen Option : 4

Q.12 Who among the following is revered as the Father of Ecology in India?

- Ans
- ☒ 1. Meghnad Saha
 - ☒ 2. Ramdeo Misra
 - ☒ 3. Har Gobind Khorana
 - ☒ 4. Subrahmanyam Chandrashekar

Question ID : 630680192756
Status : Answered
Chosen Option : 3

Q.13 In October 2022, which village in India was declared by Prime Minister Narendra Modi as the first 24x7 solar powered village?

- Ans
- ☒ 1. Amreli
 - ☒ 2. Modhera
 - ☒ 3. Savar Kundla
 - ☒ 4. Babra

Question ID : 630680192744
Status : Answered
Chosen Option : 2

Q.14 Identify the example of liverworts from the following.

- Ans
- ☒ 1. Mosses
 - ☒ 2. Algae
 - ☒ 3. Marchantia
 - ☒ 4. Horsetails

Question ID : 630680192759
Status : Not Answered
Chosen Option : --

Q.15 Hockey India announced the 18-member Indian junior men's team for the Sultan Johar Cup 2022. Where will this game be played?

- Ans
- ☒ 1. Malaysia
 - ☒ 2. Great Britain
 - ☒ 3. Australia
 - ☒ 4. Japan

Question ID : 630680192749
Status : Answered
Chosen Option : 4

Q.16 On 13 October 2022, the Prime Minister laid the foundation stone of Bulk Drug Park and dedicated the Indian Institute of Information Technology (IIIT) to the nation at _____.

- Ans
- ☒ 1. Jalandhar
 - ☒ 2. Karnal
 - ☒ 3. Una
 - ☒ 4. Jambusar

Question ID : 630680192757
Status : Not Answered
Chosen Option : --

Q.17 Which of the following naturally occurring acids is INCORRECTLY matched?

- Ans
- ☒ 1. Orange – Citric acid
 - ☒ 2. Tomato – Oxalic acid
 - ☒ 3. Vinegar – Acetic acid
 - ☒ 4. Tamarind – Methanoic acid

Question ID : 630680192760
Status : Answered
Chosen Option : 4

Q.18 Who became the first Indian player to win the gold medal in Yogasana in the 36th National Games?

- Ans
- ☒ 1. Pooja Patel
 - ☒ 2. Shivangi Sharma
 - ☒ 3. Mridul Bora
 - ☒ 4. Astha Choudhury

Question ID : 630680192748
Status : Answered
Chosen Option : 2

Q.19 As per the town planning system of the Indus Valley Civilisation, the buildings that were constructed on mud brick platforms were known as _____.

- Ans
- ☐ 1. Foundation base
 - ☐ 2. lower towns
 - ☐ 3. Lower courtyard
 - ☒ 4. citadels

Question ID : 630680192751
Status : Answered
Chosen Option : 4

Q.20 Which of the following is NOT a Wetland RAMSAR site in India listed under the Ramsar Convention as on November 2022?

- Ans
- ☐ 1. Karikili Bird Sanctuary
 - ☒ 2. Chambal Gharial Wildlife Sanctuary
 - ☐ 3. Pala Wetlands
 - ☐ 4. Sakhya Sagar

Question ID : 630680192747
Status : Answered
Chosen Option : 2

Section : Quantitative Aptitude

Q.1 The area of the base of a cuboidal tank is 8400 square centimetres and the volume of petrol contained in it is 10.2 cubic metres. Find the depth of petrol in the tank (correct up to one decimal place).

- Ans
- ☐ 1. 1300.4 cm
 - ☐ 2. 1843.2 cm
 - ☐ 3. 900.2 cm
 - ☒ 4. 1214.3 cm

Question ID : 630680192767
Status : Not Answered
Chosen Option : --

Q.2 Surendra has a property having a certain value. He gives 60% of his property to his wife, 75% of the remaining property to his daughter, and the rest to a trust. If he gives property worth ₹6,00,000 to the trust, find the worth of the share of the property he gives to his daughter.

- Ans
- ☐ 1. ₹10,00,000
 - ☐ 2. ₹15,20,000
 - ☐ 3. ₹15,00,000
 - ☒ 4. ₹18,00,000

Question ID : 630680192775
Status : Answered
Chosen Option : 4

Q.3 Two trains are running in opposite directions. They cross a man standing on a platform in 28 seconds and 10 seconds, respectively. They cross each other in 24 seconds. What is the ratio of their speeds?

- Ans
- ☒ 1. 7 : 2
 - ☐ 2. 9 : 2
 - ☐ 3. 1 : 9
 - ☐ 4. 4 : 5

Question ID : 630680192772
Status : Not Answered
Chosen Option : --

Q.4 What is the compound interest on a sum of ₹15,000 at 18% p.a. for $3\frac{2}{4}$ years, interest compounded annually? (Round off your answer to the nearest integer.)

- Ans
- ☐ 1. ₹10,486
 - ☐ 2. ₹11,084
 - ☒ 3. ₹11,864
 - ☐ 4. ₹10,264

Question ID : 630680192765
Status : Answered
Chosen Option : 3

Q.5 Solutions A and B contain acid to water in the ratio 4 : 5 and 5 : 7, respectively. Three litres of A is mixed with 5 litres of B. In 960 ml of this solution, how much acid (in ml) should be mixed so that the ratio of acid to water becomes 1 : 1 in the resulting solution?

- Ans
- ☐ 1. 144
 - ☐ 2. 136
 - ☒ 3. 140
 - ☐ 4. 130

Question ID : 630680192764
Status : Not Answered
Chosen Option : --

Q.6 The marked price of an item is ₹1,900. The shopkeeper was offering it for a discount of 12% but on further bargaining agreed to offer a successive discount and finally he sold the item for ₹1,538.24. What was the second discount offered by him?

- Ans
- ☐ 1. 15%
 - ☐ 2. 10%
 - ☐ 3. 12%
 - ☒ 4. 8%

Question ID : 630680192769
Status : Answered
Chosen Option : 4

Q.7 Evaluate the following:

$$\sqrt[4]{0.00000081} - \sqrt[4]{0.00000256} + \sqrt{625}$$

- Ans
- ☒ 1. 22.56
 - ☒ 2. 24.99
 - ☒ 3. 25.63
 - ☒ 4. 21.51

Question ID : 630680192776
Status : Answered
Chosen Option : 1

Q.8 A bus has to travel from A to B. The bus covers the first one-third of the distance at 25 km/h and the next one-fourth of the distance at 30 km/h. For the rest of the journey, the bus travels at 50 km/h. The average speed of the bus (in km/h) for the entire journey is _____.

- Ans
- ☒ 1.
 - 2. $37\frac{1}{2}$
 - 3. $33\frac{1}{3}$
 - ☒ 4. 35

Question ID : 630680192780
Status : Not Answered
Chosen Option : --

Q.9 Simplify the following.

$$\frac{2\frac{3}{4}}{1\frac{5}{6}} \div \frac{7}{8} \times \left(\frac{1}{3} + \frac{1}{4}\right) + \frac{5}{7} \div \frac{3}{4} \text{ of } \frac{3}{7}$$

- Ans
- ☒ 1. $\frac{29}{9}$
 - 2. $\frac{2}{9}$
 - 3. $\frac{49}{80}$
 - 4. $\frac{56}{77}$

Question ID : 630680192779
Status : Answered
Chosen Option : 1

Q.10 The sum of all 4-digit numbers which are divisible by both 3 and 5 is _____.

- Ans
- ☒ 1. 3192500
 - ☒ 2. 3095800
 - ☒ 3. 3295800
 - ☒ 4. 3298500

Question ID : 630680192781
Status : Answered
Chosen Option : 4

Q.11 If Ashok and Koushika work together, then they can complete a piece of work in 20 days. However, if Ashok works alone and completes half the work and then Koushika takes over the task and completes the second half of the task, the task is completed in 45 days. How long will Ashok take to complete the task if he worked alone? Assume that Koushika is more efficient than Ashok.

- Ans ☒ 1. 60 days
☐ 2. 65 days
☐ 3. 30 days
☐ 4. 25 days

Question ID : 630680192766
Status : Not Answered
Chosen Option : --

Q.12 A medicine-capsule is in the form of a cylinder with hemispherical ends. The total length of the capsule is 3 cm and the diameter of the cross-section of the cylinder is 1.4 cm. Find the approximate capacity (in cm^3) of the capsule.

[Use $\pi = \frac{22}{7}$.]

- Ans ☐ 1. 2
☐ 2. 8
☐ 3. 6
☒ 4. 4

Question ID : 630680192770
Status : Answered
Chosen Option : 4

Q.13 In a box, there are ₹10 notes, ₹20 notes and ₹50 in a ratio of 3 : 5 : 7. The total amount of notes is ₹3,360. Find the number of ₹20 notes and ₹50 notes taken together.

- Ans ☒ 1. 84
☐ 2. 79
☐ 3. 80
☐ 4. 73

Question ID : 630680192778
Status : Answered
Chosen Option : 1

Q.14 Find the simple interest on ₹3,660 at 5% per annum for 15 months.

- Ans ☐ 1. ₹400.25
☐ 2. ₹216.50
☒ 3. ₹228.75
☐ 4. ₹302.50

Question ID : 630680192771
Status : Answered
Chosen Option : 3

Q.15 I walk at a speed of 10 km/h and cover a distance in 2 hours. If I double my speed, how early would I reach my destination?

- Ans ☒ 1.
- ☐ 2. 35 mins
- ☐ 3. 40 mins
- ☐ 4. 25 mins

Question ID : 630680192774
Status : Answered
Chosen Option : 1

Q.16 Three pipes are attached to a tank. The first one fills it completely in 5 hours, the second one fills it completely in 4 hours and the third one empties it in 20 hours. If all the three pipes are opened simultaneously at 7 a.m., at what time will the tank be completely filled?

- Ans ☒ 1. 9:30 a.m.
- ☐ 2. 11:00 a.m.
- ☐ 3. 10:00 a.m.
- ☐ 4. 10:30 a.m.

Question ID : 630680192773
Status : Answered
Chosen Option : 1

Q.17 Five consecutive even numbers are written in descending order. If 6, 8 and 10 are added to the first, second and third numbers, respectively, and 13 is added to each of the last two numbers, the new sum of the numbers becomes 120% of the sum of the consecutive even numbers initially given. Find the square of the second largest of these five numbers.

- Ans ☒ 1. 2704
- ☐ 2. 2304
- ☐ 3. 1936
- ☐ 4. 2116

Question ID : 630680192782
Status : Not Answered
Chosen Option : --

Q.18 If 15% of 55% of a number is 2475, then 51% of that number is _____.

- Ans ☐ 1. 15000
- ☒ 2. 15300
- ☐ 3. 15100
- ☐ 4. 15200

Question ID : 630680192783
Status : Answered
Chosen Option : 2

Q.19 If $l = \frac{6}{5}$ of m and $m = \frac{5}{8}$ of n , then the ratio of $l : n$ is:

- Ans
- ☒ 1. 1 : 2
 - ☒ 2. 2 : 3
 - ☒ 3. 1 : 3
 - ☒ 4. 3 : 4

Question ID : 630680192777
Status : Answered
Chosen Option : 4

Q.20 If some items of clothing bought at prices ranging from ₹250 to ₹400 are sold at prices ranging from ₹350 to ₹550, then what is the maximum possible profit (in ₹) that might be made in selling 12 such items of clothing?

- Ans
- ☒ 1. 3,000
 - ☒ 2. 3,600
 - ☒ 3. 2,400
 - ☒ 4. 1,800

Question ID : 630680192768
Status : Not Answered
Chosen Option : --

Section : Numerical,Logical,Analytical Ability & Reasoning

Q.1 In a gathering, seven members (A, B, C, D, E, F, G) are sitting in a row facing north. Only two people sit to the left of E. F sits to the immediate right of E. C sits to the immediate left of B. D is not sitting at the extreme end of the row. G sits at the extreme left end of the row. Neither A nor D is the immediate neighbour of the person placed exactly in the middle of the row. Find the person who sits at the extreme right end of the row.

- Ans
- ☒ 1. C
 - ☒ 2. B
 - ☒ 3. D
 - ☒ 4. A

Question ID : 630680192784
Status : Answered
Chosen Option : 4

Q.2 In a row of certain students, Asha is sitting at 532 from the right and 462 from the left end. Find out the total number of persons in that row.

- Ans
- ☒ 1. 991
 - ☒ 2. 992
 - ☒ 3. 990
 - ☒ 4. 993

Question ID : 630680192786
Status : Answered
Chosen Option : 4

Q.3 Soumya is 17th from the left end and 13th to the right of Kiran who is 37th from the right end. If all of them are facing North. Find out the total number of persons in the row.

- Ans
- ☒ 1. 41
 - ☒ 2. 40
 - ☒ 3. 44
 - ☒ 4. 43

Question ID : 630680192787
Status : Answered
Chosen Option : 2

Q.4 In a certain code language, 'BLOCK' is written as 'ELUCT', and 'FLANK' is written as 'ILGNT'. How will 'WHILE' be written in that language?

- Ans
- ☒ 1. YHMLE
 - ☒ 2. ZHOLN
 - ☒ 3. YGOMN
 - ☒ 4. ZGOML

Question ID : 630680192794
Status : Answered
Chosen Option : 2

Q.5 Select the correct combination of mathematical signs that can sequentially replace the * signs and balance the given equation.

$181 * 7 * 9 * 18 * 9 = 120$

- Ans
- ☒ 1. $\div \times + -$
 - ☒ 2. $- \times + \div$
 - ☒ 3. $+ \times \div -$
 - ☒ 4. $\times + - \div$

Question ID : 630680192803
Status : Answered
Chosen Option : 2

Q.6 Assuming the given statement to be true, find which of the following conclusions among given two is/are true.

Statement
 $D > T \leq B > A, P \leq R > S \neq D$
Conclusions
1) $P \neq D$
2) $T = A$

- Ans
- ☒ 1. None of the conclusions follow.
 - ☒ 2. Only conclusion 1 follows.
 - ☒ 3. Only conclusion 2 follows.
 - ☒ 4. Both conclusions 1 and 2 follow.

Question ID : 630680192789
Status : Answered
Chosen Option : 3

Q.7 Read the given statements and conclusions carefully. Assuming that the information given in the statements is true, even if it appears to be at variance with commonly known facts, decide which of the given conclusions logically follow(s) from the statements.

- Statements:
- 1. All books are purses.
 - 2. All yellow are purses .
 - 3. Some papers are yellow.

- Conclusions:
- I. Some bags are yellow.
 - II. Some purses are papers.

- Ans
- ☒ 1. Both conclusions I and II follow.
 - ☒ 2. Only conclusion II follows.
 - ☒ 3. Neither conclusion I nor II follow.
 - ☒ 4. Only conclusion I follows.

Question ID : 630680192788
Status : Answered
Chosen Option : 2

Q.8 Diksha walks 20 m towards the south, turns left and walks 30 m, after which, she turns right and walks 30 m. Again, she turns right and walks 30 m, after which, she takes a final right turn and walks 20 m. How far is she from the starting point?

- Ans
- ☒ 1. 40 m
 - ☒ 2. 50 m
 - ☒ 3. 30 m
 - ☒ 4. 10 m

Question ID : 630680192795
Status : Answered
Chosen Option : 3

Q.9 Four words have been given, out of which three are alike in some manner and one is different. Select the one that is different.

Please note that the reasoning for the answer is to be deduced considering the actual meaning of the words and not basis the counting of letters, vowels, consonants or any other such parameters.

















- Ans
- ☒ 1. Chisel
 - ☒ 2. Rake
 - ☒ 3. Sickel
 - ☒ 4. Shovel

Question ID : 630680192797
Status : Answered
Chosen Option : 4

Q.10 Veer is the brother of Rohan and Hari. Rita is Hari's mother. Ram is Rohan's father. How is Veer related to Ram?

- Ans
- ☒ 1. Son's son
 - ☒ 2. Brother
 - ☒ 3. Father
 - ☒ 4. Son

Question ID : 630680192796
Status : Answered
Chosen Option : 4

<p>Q.11 In a certain code language, 'BUREAU' is written as 'RUBUAE', and 'NUMBER' is written as 'MUNREB'. How will be 'DETECT' be written in that language?</p> <p>Ans  1. ETEDEC</p> <p> 2. TEDTCE</p> <p> 3. EDECTC</p> <p> 4. TCETED</p>	<div>Question ID : 630680192793</div> <div>Status : Answered</div> <div>Chosen Option : 2</div>
<p>Q.12 Select the number from among the given options that can replace the question mark (?) in the following series.</p> <p>51, 54, 59, ?, 75, 86</p> <p>Ans  1. 69</p> <p> 2. 64</p> <p> 3. 66</p> <p> 4. 65</p>	<div>Question ID : 630680192800</div> <div>Status : Answered</div> <div>Chosen Option : 3</div>
<p>Q.13 Select the number from among the given options that can replace the question mark (?) in the following series.</p> <p>342, 215, 124, ?, 26, 7</p> <p>Ans  1. 67</p> <p> 2. 63</p> <p> 3. 61</p> <p> 4. 65</p>	<div>Question ID : 630680192801</div> <div>Status : Answered</div> <div>Chosen Option : 2</div>
<p>Q.14 Eight friends (A, B, C, D, E, F, G, H) sit around a circular table, all of them facing the centre. Only three people sit between F and E. E sits second to the right of G. B is immediate the neighbour of E but not D. C sits third to the left of D. A sits second, to the right of B. H and C are not immediate neighbours of each other. Who is sitting between D and H, when counted from the right of D?</p> <p>Ans  1. A</p> <p> 2. E</p> <p> 3. F</p> <p> 4. G</p>	<div>Question ID : 630680192785</div> <div>Status : Answered</div> <div>Chosen Option : 4</div>

Q.15

How many such symbols are there in the following string, each of which is exactly preceded by a letter but NOT followed by a number?

9\$D8@7H%Y3G5\$9%8#Q6R&PT&6

Ans

✓

1. 2

✗

2. 4

✗

3. 5

✗

4. 3

Question ID : 630680192792

Status : Answered

Chosen Option : 1

Q.16

How many such letters are there in the following string, each of which is followed by a number?

8WH6T84G9ER6K5LQ7UP3

Ans

✓

1. 7

✗

2. 9

✗

3. 6

✗

4. 8

Question ID : 630680192791

Status : Answered

Chosen Option : 1

Q.17

Select the term from the given options that can replace the question mark (?) in the following series.
DFH, EHK, FJN, ?

Ans

✗

1. GMR

✓

2. GLQ

✗

3. GLT

✗

4. GJN

Question ID : 630680192790

Status : Answered

Chosen Option : 2

Q.18

What is the approximate value of the following expression?

$198.98 - (98.89 + 9.98) + 9 - 1.89 + 9.09 = ?$

Ans

✗

1. 115

✓

2. 106

✗

3. 121

✗

4. 100

Question ID : 630680192802

Status : Not Answered

Chosen Option : --

Q.19

Select the option that is related to the third word in the same way as the second word is related to the first word.

Stop : Cease :: Start : ?

Ans

✖

1. Set up

✖

2. Endeavour

✖

3. End

✔

4. Commence

Question ID : 630680192798

Status : Answered

Chosen Option : 4

Q.20

Four words have been given, out of which three are alike in some manner and one is different. Select the one that is different.

Please note that the reasoning for the answer is to be deduced considering the actual meaning of the words and not basis the counting of letters, vowels, consonants or any other such parameters.

Ans

✖

1. Peacock

✖

2. Sparrow

✖

3. Hen

✔

4. Ostrich

Question ID : 630680192799

Status : Answered

Chosen Option : 4

Section : English Language

Q.1

Select the grammatically correct sentence from the given options.

Ans

✖

1. Chromotherapy is based on the fact that are linked to various organs of the body and various lights have definitive energy bands and can help to heal them.

✔

2. Chromotherapy is based on the fact that various lights have definitive energy bands and are linked to various organs of the body and can help to heal them.

✖

3. Various lights have definitive energy bands and are linked to various organs of the body and chromotherapy is based on the fact that can help to heal them.

✖

4. Various lights have definitive energy bands and chromotherapy is based on the fact that can help to heal them are linked to various organs of the body and.

Question ID : 630680192819

Status : Not Answered

Chosen Option : --

Q.2

Identify the adverb in the given sentence.

Rajat and Sanjeev seldom disagree on trivial matters and seem to be excellent friends.

Ans

✖

1. trivial

✔

2. seldom

✖

3. disagree

✖

4. excellent

Question ID : 630680192807

Status : Answered

Chosen Option : 1

Q.3 The following sentence has been split into four parts (1 to 4). Identify the part that contains an error.

Either my aunt or (1) / my cousin have (2) / the cookbook my (3) / uncle wrote. (4)

- Ans
- ☒ 1. (1)
 - ☒ 2. (3)
 - ☒ 3. (2)
 - ☒ 4. (4)

Question ID : 630680192811
Status : Answered
Chosen Option : 3

Q.4 Select the option that can be used as a one-word substitute for the given group of words.

A person who does not believe in there being any God

- Ans
- ☒ 1. Atheist
 - ☒ 2. Pantheist
 - ☒ 3. Antipathy
 - ☒ 4. Antisocial

Question ID : 630680192821
Status : Answered
Chosen Option : 1

Q.5 Select the most appropriate option to fill in the blank.

Today, man has reached_____Moon and you still believe in superstitions?

- Ans
- ☒ 1. an
 - ☒ 2. the
 - ☒ 3. a
 - ☒ 4. No article required

Question ID : 630680192804
Status : Answered
Chosen Option : 2

Q.6 Select the correctly spelt word.

- Ans
- ☒ 1. Arbitraty
 - ☒ 2. Confidantial
 - ☒ 3. Itinerary
 - ☒ 4. Mandatery

Question ID : 630680192817
Status : Answered
Chosen Option : 3

Q.7 Select the grammatically correct sentence from the given options.

- Ans ☒ 1. Mind very soon becomes stagnant studies in psychology show that an untroubled.
- ☒ 2. Studies in psychology becomes stagnant show that an untroubled mind very soon.
- ☒ 3. Show that an untroubled studies in psychology mind very soon becomes stagnant.
- ☒ 4. Studies in psychology show that an untroubled mind very soon becomes stagnant.

Question ID : 630680192818
Status : Answered
Chosen Option : 4

Q.8 The following sentence has been split into four parts (1 to 4). Identify the part that contains a punctuation error.

The headmaster said (1) / to the student, (2) / “Yes, you may (3) / come in. (4)

- Ans ☒ 1. (3)
- ☒ 2. (2)
- ☒ 3. (1)
- ☒ 4. (4)

Question ID : 630680192808
Status : Answered
Chosen Option : 3

Q.9 Select the option that can be used as a one-word substitute for the underlined group of words.

Ruchika is a collector of coins as a hobby and loves showing off her collection to her guests.

- Ans ☒ 1. Coinologist
- ☒ 2. Philatelist
- ☒ 3. Numismatist
- ☒ 4. Philanthropist

Question ID : 630680192822
Status : Answered
Chosen Option : 3

Q.10 Select the most appropriate meaning of the given idiom.

Bread and butter

- Ans ☒ 1. Livelihood
- ☒ 2. Simplicity
- ☒ 3. Food
- ☒ 4. Basic understanding

Question ID : 630680192812
Status : Answered
Chosen Option : 1

Q.11 Select the most appropriate option to fill in the blanks.

After you _____ a meal or a snack, your pancreas releases more insulin to make sure the extra glucose in your bloodstream can enter _____ cells. If you have more glucose than you need, your body can remove the excess _____ your blood and store it in your liver and muscles or convert it to fat.

- Ans
- ☒ 1. eat; your; from
 - ☐ 2. devour; any; by
 - ☐ 3. consume; the; into
 - ☐ 4. gobble; their; to

Question ID : 630680192820
Status : Answered
Chosen Option : 1

Q.12 Select the most appropriate ANTONYM of the word given in brackets in the following sentence, to fill in the blank.

Tarana needs _____ (fleeting) attention: she is such a spoilt, fussy woman.

- Ans
- ☐ 1. same
 - ☐ 2. flexible
 - ☒ 3. constant
 - ☐ 4. varying

Question ID : 630680192814
Status : Answered
Chosen Option : 3

Q.13 Select the most appropriate articles to fill in the blanks.

Suman's father is _____ army brigadier whereas her sister is _____ M.B.A.

- Ans
- ☐ 1. No article; a
 - ☒ 2. an; an
 - ☐ 3. an; the
 - ☐ 4. a; a

















Question ID : 630680192805
Status : Answered
Chosen Option : 2

Q.14 Select the option that can be used as a one-word substitute for the underlined group of words.

Finally, Mr. Yuvraj Narsinghani passed by the slowly moving line of people or cars at a funeral.

- Ans
- ☐ 1. Caravan
 - ☐ 2. Posse
 - ☐ 3. Procession
 - ☒ 4. Cortege

Question ID : 630680192823
Status : Answered
Chosen Option : 1

<p>Q.15 Select the most appropriate ANTONYM of the given word.</p> <p>Uncouth</p> <p>Ans  1. Conspicuous</p> <p> 2. Barbaric</p> <p> 3. Cultivated</p> <p> 4. Covered</p>	<div>Question ID : 630680192815 Status : Not Answered Chosen Option : --</div>
<p>Q.16 Select the most appropriate form of the verb to fill the blank.</p> <p>I did not_____the laptop with me, so I cannot update the file.</p> <p>Ans  1. had brought</p> <p> 2. bringed</p> <p> 3. bring</p> <p> 4. brought</p>	<div>Question ID : 630680192810 Status : Answered Chosen Option : 3</div>
<p>Q.17 Select the most appropriate preposition to fill in the blank.</p> <p>We are not oblivious_____the dangers that lie in our path.</p> <p>Ans  1. on</p> <p> 2. at</p> <p> 3. from</p> <p> 4. to</p>	<div>Question ID : 630680192806 Status : Not Answered Chosen Option : --</div>
<p>Q.18 Select the INCORRECTLY spelt word.</p> <p>Ans  1. Florid</p> <p> 2. Discripancy</p> <p> 3. Emulate</p> <p> 4. Insular</p>	<div>Question ID : 630680192816 Status : Answered Chosen Option : 2</div>

Q.19 Select the most appropriate proverb that conveys the meaning given in brackets in the following sentence, to fill in the blank.

Aryan should be happy with the job he got after struggling without an income for five years, and not complain about the low salary. After all, _____ (One should be grateful for what one has, even if it's not what one desired).

- Ans
- ☒ 1. it is better to be safe than sorry
 - ☒ 2. a rolling stone gathers no moss
 - ☒ 3. half a loaf is better than none
 - ☒ 4. the early bird gets the worm

Question ID : 630680192813
Status : Answered
Chosen Option : 1

Q.20 Identify the correctly punctuated sentence.

- Ans
- ☒ 1. "My name," replied the lady "is the same as my mothers'."
 - ☒ 2. "My name," replied the lady "is the same as my mother."
 - ☒ 3. "My name" replied the lady, "is the same as my mothers."
 - ☒ 4. "My name," replied the lady, "is the same as my mother's."

Question ID : 630680192809
Status : Answered
Chosen Option : 4

Section : General Studies

Q.1 As per the 'Climate Transparency Report' of 2022, which of the following countries among the G20 countries suffered the highest loss to earnings from heat-related labour capacity?

- Ans
- ☒ 1. India
 - ☒ 2. Japan
 - ☒ 3. Indonesia
 - ☒ 4. China

Question ID : 630680192834
Status : Not Answered
Chosen Option : --

Q.2 As of October 2022, who is the Minister of Textiles?

- Ans
- ☒ 1. Piyush Goyal
 - ☒ 2. Smriti Zubin Irani
 - ☒ 3. Arjun Munda
 - ☒ 4. Pralhad Joshi

Question ID : 630680192827
Status : Answered
Chosen Option : 4

Q.3 Vide 61st amendment of Constitution of India, which of the following amendments was made?

- Ans ☒ 1. Attempt was made to reduce the powers of supreme Court and High Courts
- ☒ 2. The voting age was reduced from 21 to 18
- ☒ 3. Fundamental duty was added
- ☒ 4. Right to property was removed from the list of fundamental rights

Question ID : 630680192840
Status : Answered
Chosen Option : 2

Q.4 In October 2022, who was elected as the new chairman of Indian Bank's Association?

- Ans ☒ 1. Aditya Puri
- ☒ 2. Atul Kumar Goel
- ☒ 3. Aswani Bhatia
- ☒ 4. Vibha Padalkar

Question ID : 630680192832
Status : Not Answered
Chosen Option : --

Q.5 The famous king Pulakeshin II belonged to which of the following dynasties?

- Ans ☒ 1. Pandya dynasty
- ☒ 2. Pallava dynasty
- ☒ 3. Chalukya dynasty
- ☒ 4. Mauryan dynasty

Question ID : 630680192825
Status : Answered
Chosen Option : 1

Q.6 In October 2022, which of the following political parties lost its three-decade-old poll symbol of the 'bow and arrow'?

- Ans ☒ 1. Bahujan Samaj Party
- ☒ 2. Communist Party of India
- ☒ 3. Shiv Sena
- ☒ 4. National People's Party

Question ID : 630680192828
Status : Not Answered
Chosen Option : --

Q.7 According to Census of India 2011, what is the sex ratio in India?

- Ans ☒ 1. 944 females / 1000 males
- ☒ 2. 936 females / 1000 males
- ☒ 3. 940 females / 1000 males
- ☒ 4. 948 females / 1000 males

Question ID : 630680192839
Status : Answered
Chosen Option : 1

Q.8 Who was the 49th Chief Justice of India?

- Ans
- ☒ 1. Justice Nuthalapati Venkata Ramana
 - ☒ 2. Justice Uday Umesh Lalit
 - ☒ 3. Justice Sharad Arvind Bobde
 - ☒ 4. Justice DY Chandrachud

Question ID : 630680192826
Status : Answered
Chosen Option : 1

Q.9 In which year was the Tendulkar Committee appointed by the Government of India to take a fresh look at the poverty lines?

- Ans
- ☒ 1. 1991
 - ☒ 2. 1993
 - ☒ 3. 1979
 - ☒ 4. 2005

Question ID : 630680192838
Status : Not Answered
Chosen Option : --

Q.10 Ibrahim Khan Lodi's Tomb is situated near the tehsil office in_____.

- Ans
- ☒ 1. Charkhi Dadri
 - ☒ 2. Panipat
 - ☒ 3. Yamunanagar
 - ☒ 4. Kaithal

Question ID : 630680192824
Status : Answered
Chosen Option : 4

Q.11 In which year was the Micro Finance Institutions Network established as an industry association for Non-Banking Financial Companies (NBFCs)?

- Ans
- ☒ 1. 2005
 - ☒ 2. 2011
 - ☒ 3. 2009
 - ☒ 4. 2014

Question ID : 630680192833
Status : Not Answered
Chosen Option : --

Q.12 Which of the following Acts was Introduced by the British Government in 1773?

- Ans
- ☒ 1. Regulating Act
 - ☒ 2. Charter Act
 - ☒ 3. Pitt's India Act
 - ☒ 4. Government of India Act

Question ID : 630680192843
Status : Answered
Chosen Option : 1

Q.13 According to Census of India 2011, what is the male literacy rate in Bihar?

- Ans
- ☐ 1. 66.76%
 - ☐ 2. 71.20%
 - ☐ 3. 68.54%
 - ☒ 4. 75.23%

Question ID : 630680192837
Status : Not Answered
Chosen Option : --

Q.14 The Nubra and Hunza rivers are tributaries of which river?

- Ans
- ☐ 1. Damodar
 - ☐ 2. Yamuna
 - ☒ 3. Indus
 - ☐ 4. Chambal

Question ID : 630680192836
Status : Answered
Chosen Option : 3

Q.15 As per the Tinkathia system, the farmers of Champaran were under the obligation to cultivate three Kathas per beegha of his land with_____.

- Ans
- ☐ 1. wheat
 - ☐ 2. maize
 - ☐ 3. rice
 - ☒ 4. indigo

Question ID : 630680192830
Status : Answered
Chosen Option : 4

Q.16 The Fundamental Rights in the Constitution of India has been borrowed from which of the following countries?

- Ans
- ☐ 1. Canada
 - ☒ 2. The US
 - ☐ 3. Australia
 - ☐ 4. Britain

Question ID : 630680192841
Status : Answered
Chosen Option : 2

Q.17 Where did Mahatma Gandhi join the Satyagraha against the high tax demands following the failure of peasants harvest in 1918?

- Ans
- ☒ 1. Kheda
 - ☐ 2. Champaran
 - ☐ 3. Ahmedabad
 - ☐ 4. Surat

Question ID : 630680192831
Status : Answered
Chosen Option : 2

Q.18 Who led the bench of Supreme Court, which refused to hear a plea seeking a blanket ban on firecrackers?

- Ans
- ☒ 1. S Abdul Nazeer
 - ☒ 2. DY Chandrachud
 - ☒ 3. Hemant Gupta
 - ☒ 4. UU Lalit

Question ID : 630680192829
Status : Answered
Chosen Option : 4

Q.19 Which of the following Articles of the Constitution of India is related to Fundamental Duties?

- Ans
- ☒ 1. Article 112
 - ☒ 2. Article 78
 - ☒ 3. Article 23
 - ☒ 4. Article 51A

Question ID : 630680192842
Status : Answered
Chosen Option : 4

Q.20 In August 2022, Prime Minister Narendra Modi inaugurated the pedestrian-only Atal Bridge on Sabarmati river in which state?

- Ans
- ☒ 1. Gujarat
 - ☒ 2. Haryana
 - ☒ 3. Punjab
 - ☒ 4. Rajasthan