

Multi Tasking Non Technical Staff and Havaladar CBIC and CBN Examination 2023

Roll Number	
Candidate Name	
Venue Name	iON Digital Zone iDZ Karsua
Exam Date	05/09/2023
Exam Time	9:00 AM - 11:00 AM
Subject	MTS Non Tech Havaladar CBIC and CBN Examination 2023

Section : Numerical and Mathematical Ability

Q.1 Apples are bought at 25 for ₹250 and sold at 30 for ₹390. What is the profit/loss percentage in this transaction?

- Ans**
- ☒ 1. 25% Profit
 - ☒ 2. 30% Profit
 - ☒ 3. 25% Loss
 - ☒ 4. 30% Loss

Question ID : 264330155707

Option 1 ID : 264330610231

Option 2 ID : 264330610233

Option 3 ID : 264330610232

Option 4 ID : 264330610234

Status : Answered

Chosen Option : 1

Q.2 The average height of a class of 50 students is 170 cm. What will be the average height (in cm, rounded off to the nearest integer) of the rest of the students if the average height of 15 of the students is 180 cm?

- Ans**
- ☒ 1. 162
 - ☒ 2. 166
 - ☒ 3. 175
 - ☒ 4. 174

Question ID : 264330153761

Option 1 ID : 264330602510

Option 2 ID : 264330602508

Option 3 ID : 264330602507

Option 4 ID : 264330602509

Status : Answered

Chosen Option : 2

Q.3 A sum of ₹5,345, when invested at a certain rate of simple interest per annum for 10 years, earns an interest of ₹2,672.50 on maturity. What is the rate of simple interest per annum?

- Ans**
- ☒ 1. 4.5%
 - ☒ 2. 8%
 - ☒ 3. 5%
 - ☒ 4. 6.5%

Question ID : 264330156486

Option 1 ID : 264330613333

Option 2 ID : 264330613331

Option 3 ID : 264330613332

Option 4 ID : 264330613334

Status : Answered

Chosen Option : 3

Q.4 Find the number of solid lead balls each 2 cm in diameter that can be made from solid sphere made up of lead of diameter 14 cm.

- Ans**
- ☒ 1. 433
 - ☒ 2. 343
 - ☒ 3. 430
 - ☒ 4. 340

Question ID : 264330156017

Option 1 ID : 264330611469

Option 2 ID : 264330611468

Option 3 ID : 264330611467

Option 4 ID : 264330611470

Status : Answered

Chosen Option : 2

Q.5 The speed of a boat in still water is 30 km/h and the speed of the stream is 7.5 km/h. What is the time in hours taken by the boat in the stream to go from point A to B and then back to A covering a total distance of 90 km?

- Ans**
- ☒ 1. 3.2
 - ☒ 2. 2.8
 - ☒ 3. 3.4
 - ☒ 4. 3.0

Question ID : 264330153814

Option 1 ID : 264330602721

Option 2 ID : 264330602719

Option 3 ID : 264330602722

Option 4 ID : 264330602720

Status : Answered

Chosen Option : 2

Q.6 What is the average of the first 13 multiples of 3?

- Ans ☒ 1. 21
☐ 2. 39
☐ 3. 42
☐ 4. 35

Question ID : 264330155725

Option 1 ID : 264330610304

Option 2 ID : 264330610303

Option 3 ID : 264330610306

Option 4 ID : 264330610305

Status : Answered

Chosen Option : 1

Q.7 ₹1,250 at 12% per annum compounded annually will amount to ₹1,568 in:

- Ans ☐ 1. 4 years
☐ 2. 1 year
☒ 3. 2 years
☐ 4. 3 years

Question ID : 264330153880

Option 1 ID : 264330602986

Option 2 ID : 264330602983

Option 3 ID : 264330602984

Option 4 ID : 264330602985

Status : Not Answered

Chosen Option : --

Q.8 The speed of a car is 90 km/h. The distance covered by the car in 7 Seconds will be:

- Ans ☐ 1. 172 metres
☒ 2. 175 metres
☐ 3. 170 metres
☐ 4. 180 metres

Question ID : 264330155968

Option 1 ID : 264330611274

Option 2 ID : 264330611273

Option 3 ID : 264330611272

Option 4 ID : 264330611271

Status : Answered

Chosen Option : 2

Q.9 Anil works 3 times as fast as Sumit. If Sumit can complete a work in 12 days independently, then the number of days in which Anil and Sumit can together finish the work will be:

- Ans**
- ☒ 1. 2
 - ☒ 2. 3
 - ☒ 3. 4
 - ☒ 4. 5

Question ID : 264330156236

Option 1 ID : 264330612343

Option 2 ID : 264330612344

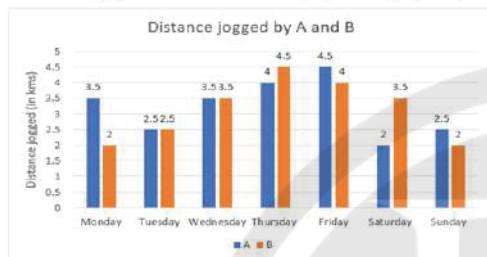
Option 3 ID : 264330612345

Option 4 ID : 264330612346

Status : Answered

Chosen Option : 2

Q.10 The following graph refers to the distance jogged daily by two persons A and B.



If 100 calories are burnt by jogging 1 km, what is the difference between the calories burnt by A and B in the given week?

- Ans**
- ☒ 1. 150 calories
 - ☒ 2. 10 calories
 - ☒ 3. 100 calories
 - ☒ 4. 50 calories

Question ID : 264330154099

Option 1 ID : 264330603861

Option 2 ID : 264330603862

Option 3 ID : 264330603860

Option 4 ID : 264330603859

Status : Answered

Chosen Option : 4

Q.11 Vaishali booked a bus ticket for ₹1,260. Because of her ill health, she had to cancel the ticket. She got a refund of ₹945 in this process. What is the percentage loss that Vaishali had to face?

- Ans**
- ☒ 1. 23%
 - ☒ 2. 15%
 - ☒ 3. 25%
 - ☒ 4. 33%

Question ID : 264330155703

Option 1 ID : 264330610216

Option 2 ID : 264330610215

Option 3 ID : 264330610217

Option 4 ID : 264330610218

Status : Answered

Chosen Option : 3

Q.12 Three numbers are in the ratio of 3 : 4 : 5 and their HCF is 18. What is the sum of these numbers?

- Ans**
- ☒ 1. 198
 - ☒ 2. 216
 - ☒ 3. 234
 - ☒ 4. 180

Question ID : 264330155683

Option 1 ID : 264330610136

Option 2 ID : 264330610137

Option 3 ID : 264330610138

Option 4 ID : 264330610135

Status : Answered

Chosen Option : 2

Q.13 If two varieties of a grain worth ₹202 per kg and ₹250 per kg, respectively, are mixed in the ratio of 7 : 5, then what is the cost (in ₹) of the resulting mixture per kg?

- Ans**
- ☒ 1. 225
 - ☒ 2. 218
 - ☒ 3. 222
 - ☒ 4. 220

Question ID : 264330155693

Option 1 ID : 264330610178

Option 2 ID : 264330610175

Option 3 ID : 264330610177

Option 4 ID : 264330610176

Status : Not Answered

Chosen Option : --

Q.14 Akash is thrice as good a workman as Arvind and therefore is able to finish a job in 30 days less than Arvind. If they work together, in how many days can they finish the job?

- Ans**
- ☒ 1. $11\frac{1}{4}$
 - ☒ 2. $11\frac{3}{4}$
 - ☒ 3. $12\frac{3}{4}$
 - ☒ 4. $12\frac{1}{4}$

Question ID : 264330156117

Option 1 ID : 264330611867

Option 2 ID : 264330611868

Option 3 ID : 264330611870

Option 4 ID : 264330611869

Status : Not Answered

Chosen Option : --

Q.15 Find the value of x if $15\frac{2}{3} \times 3\frac{1}{6} + 6\frac{1}{3} = 11\frac{7}{18} + x$

Ans

☒ 1. $137\frac{4}{9}$

☒ 2. $44\frac{5}{9}$

☒ 3. $29\frac{7}{9}$

☒ 4. $39\frac{5}{9}$

Question ID : 264330156335

Option 1 ID : 264330612740

Option 2 ID : 264330612742

Option 3 ID : 264330612741

Option 4 ID : 264330612739

Status : Answered

Chosen Option : 2

Q.16 The following table gives the number of employees in different departments of an organisation and percentage of females and males. Study the table carefully and answer the question.

Department	Total No. of employees	% of females	% of males
IT	640	45	55
Accounts	220	40	60
Production	800	30	70
HR	360	65	35
Marketing	400	40	60

Find the ratio of the number of females in production and HR departments together to the number of males in the IT and Accounts departments together.

Ans

☒ 1. 237 : 242

☒ 2. 227 : 323

☒ 3. 235 : 330

☒ 4. 235 : 340

Question ID : 264330156013

Option 1 ID : 264330611453

Option 2 ID : 264330611452

Option 3 ID : 264330611451

Option 4 ID : 264330611454

Status : Answered

Chosen Option : 1

Q.17 What is the total surface area (in cm^2) of a cone with a base radius of 28 cm and height of 45 cm? (use $\pi = \frac{22}{7}$)

- Ans
- ☒ 1. 8168
 - ☒ 2. 6288
 - ☒ 3. 7128
 - ☒ 4. 9216

Question ID : 264330156540

Option 1 ID : 264330613547

Option 2 ID : 264330613550

Option 3 ID : 264330613548

Option 4 ID : 264330613549

Status : Answered

Chosen Option : 4

Q.18 Arrange the ratios in ascending order $5 : 3\frac{1}{3}$, $6\frac{1}{4} : 3\frac{1}{8}$ and $3.5 : 4.5$.

- Ans
- ☒ 1. $3.5 : 4.5 < 5 : 3\frac{1}{3} < 6\frac{1}{4} : 3\frac{1}{8}$
 - ☒ 2. $6\frac{1}{4} : 3\frac{1}{8} < 5 : 3\frac{1}{3} < 3.5 : 4.5$
 - ☒ 3. $5 : 3\frac{1}{3} < 3.5 : 4.5 < 6\frac{1}{4} : 3\frac{1}{8}$
 - ☒ 4. $5 : 3\frac{1}{3} < 6\frac{1}{4} : 3\frac{1}{8} < 3.5 : 4.5$

Question ID : 264330153766

Option 1 ID : 264330602530

Option 2 ID : 264330602527

Option 3 ID : 264330602528

Option 4 ID : 264330602529

Status : Not Answered

Chosen Option : --

Q.19 If $15x = 24y = 32z$, then $x : y : z$ is equal to:

- Ans
- ☒ 1. 32 : 15 : 20
 - ☒ 2. 15 : 24 : 32
 - ☒ 3. 32 : 20 : 15
 - ☒ 4. 24 : 15 : 4

Question ID : 264330153875

Option 1 ID : 264330602965

Option 2 ID : 264330602964

Option 3 ID : 264330602966

Option 4 ID : 264330602963

Status : Not Answered

Chosen Option : --

Q.20

The incomes of P, Q and R are in the ratio of 9 : 15 : 10 and their savings are in the ratio is 10 : 15 : 12. If R spends 60% of his income, what is the ratio of the expenditures of P, Q and R?

- Ans
- ☒ 1. 18 : 17 : 30
 - ☒ 2. 17 : 30 : 18
 - ☒ 3. 17 : 18 : 30
 - ☒ 4. 18 : 30 : 17

Question ID : 264330153763

Option 1 ID : 264330602518

Option 2 ID : 264330602517

Option 3 ID : 264330602516

Option 4 ID : 264330602515

Status : Not Answered

Chosen Option : --

Section : Reasoning Ability and Problem Solving

Q.1 What should come in place of the question mark (?) in the given series based on the English alphabetical order?

MQA, NRE, OSI, PTM, ?

- Ans
- ☒ 1. RVO
 - ☒ 2. QWN
 - ☒ 3. QUQ
 - ☒ 4. SUM

Question ID : 264330156297

Option 1 ID : 264330612588

Option 2 ID : 264330612587

Option 3 ID : 264330612589

Option 4 ID : 264330612590

Status : Answered

Chosen Option : 3

Q.2 Select the combination of letters that when sequentially placed in the blanks of the given series, will complete the series.

_ML _MLLM _L _

- Ans
- ☒ 1. MLMML
 - ☒ 2. MMLMM
 - ☒ 3. LLLML
 - ☒ 4. LLMLM

Question ID : 264330151639

Option 1 ID : 264330594186

Option 2 ID : 264330594184

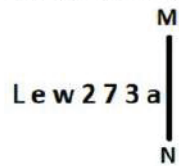
Option 3 ID : 264330594183

Option 4 ID : 264330594185

Status : Answered

Chosen Option : 3

Q.3 Select the correct mirror image of the given figure when the mirror is placed at MN as shown below.



- Ans
- ☒ 1.
 - ☒ 2.
 - ☒ 3.
 - ☒ 4.

Question ID : 264330151502

Option 1 ID : 264330593635

Option 2 ID : 264330593637

Option 3 ID : 264330593636

Option 4 ID : 264330593638

Status : Answered

Chosen Option : 2

Q.4 Read the given statements and conclusions carefully. You have to take the given statements to be true even if they seem to be at variance from commonly known facts. You have to decide which conclusion/s logically follow/s from the given statements.

Statements: All needles are pins. Some pins are wood. All wood are cups.

Conclusion I: Some needles are wood.

Conclusion II: All cups are pins.

- Ans
- ☒ 1. Neither conclusion (I) nor (II) is follow.
 - ☒ 2. Only conclusion (II) is follow.
 - ☒ 3. Both conclusions (I) and (II) are follow.
 - ☒ 4. Only conclusion (I) is follow.

Question ID : 264330155930

Option 1 ID : 264330611125

Option 2 ID : 264330611124

Option 3 ID : 264330611126

Option 4 ID : 264330611123

Status : Answered

Chosen Option : 1

Q.5 In the following number-pairs, the second number is obtained by applying certain mathematical operations to the first number. Select the set in which the numbers are related in the same way as are the numbers of the following sets.
(NOTE: Operations should be performed on the whole numbers, without breaking down the numbers into its constituent digits. E.g. 13 – Operations on 13 such as adding /deleting /multiplying etc. to 13 can be performed. Breaking down 13 into 1 and 3 and then performing mathematical operations on 1 and 3 is not allowed)
11 : 60
13 : 70

- Ans**
- ☒ 1. 19 : 90
- ☒ 2. 15 : 80
- ☒ 3. 17 : 85
- ☒ 4. 21 : 100

Question ID : 264330154649

Option 1 ID : 264330606062

Option 2 ID : 264330606059

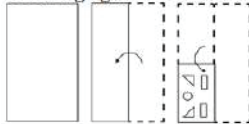
Option 3 ID : 264330606060

Option 4 ID : 264330606061

Status : Answered

Chosen Option : 2

Q.6 The sequence of folding a piece of paper and the manner in which the folded paper is cut is shown in the following figures. How would this paper look when unfolded?



Ans

- ☒ 1.
- ☒ 2.
- ☒ 3.
- ☒ 4.

Question ID : 264330155612

Option 1 ID : 264330609852

Option 2 ID : 264330609851

Option 3 ID : 264330609853

Option 4 ID : 264330609854

Status : Answered

Chosen Option : 3

Q.7 In a certain code language, 'get more sleep' is coded as 'wo bt gk' and 'less is more' is coded as 'ap gk cm'. How is 'more' coded in the given language?

- Ans**
- ☒ 1. wo
 - ☒ 2. cm
 - ☒ 3. bt
 - ☒ 4. gk

Question ID : 264330151704

Option 1 ID : 264330594446

Option 2 ID : 264330594444

Option 3 ID : 264330594443

Option 4 ID : 264330594445

Status : Answered

Chosen Option : 4

Q.8 In a certain code language, 'PING' is coded as '62' and 'HAZE' is coded as '68'. What is the code for 'GOAT' in the given code language?

- Ans**
- ☒ 1. 67
 - ☒ 2. 65
 - ☒ 3. 66
 - ☒ 4. 69

Question ID : 264330155833

Option 1 ID : 264330610736

Option 2 ID : 264330610738

Option 3 ID : 264330610737

Option 4 ID : 264330610735

Status : Answered

Chosen Option : 4

Q.9 Read the given statements and conclusions carefully. You have to take the given statements to be true even if they seem to be at variance from commonly known facts. You have to decide which conclusion/s logically follow/s from the given statements.

Statements: All jars are plastic. Some plastic are spoons. No spoon is a fork.

Conclusion I: Some plastic are jars.

Conclusion II: Some forks are spoons.

- Ans**
- ☒ 1. Only conclusion (II) is follow.
 - ☒ 2. Neither conclusion (I) nor (II) is follow.
 - ☒ 3. Only conclusion (I) is follow.
 - ☒ 4. Both conclusions (I) and (II) are follow.

Question ID : 264330155899

Option 1 ID : 264330611000

Option 2 ID : 264330611001

Option 3 ID : 264330610999

Option 4 ID : 264330611002

Status : Answered

Chosen Option : 3

Q.10 What should come in place of '?' in the given series?

11 44 143 440 1331 ?

- Ans
- ☐ 1. 3996
 - ☐ 2. 4118
 - ☐ 3. 4266
 - ☒ 4. 4004

Question ID : 264330151476

Option 1 ID : 264330593531

Option 2 ID : 264330593533

Option 3 ID : 264330593534

Option 4 ID : 264330593532

Status : Answered

Chosen Option : 4

Q.11 If G means '-', A means '×', F means '+', B means '+', then what will come in place of the question mark (?) in the following equation?

37 B 16 A 3 G 88 F 8 = ?

- Ans
- ☒ 1. 74
 - ☐ 2. 69
 - ☐ 3. 93
 - ☐ 4. 51

Question ID : 264330154685

Option 1 ID : 264330606205

Option 2 ID : 264330606204

Option 3 ID : 264330606206

Option 4 ID : 264330606203

Status : Answered

Chosen Option : 1

Q.12 KGTO is related to HDQL in a certain way based on the English alphabetical order. In the same way, YFSH is related to VCPE. To which of the following is GUMS related to, following the same logic?

- Ans
- ☐ 1. JXOU
 - ☐ 2. DSKP
 - ☐ 3. ESKU
 - ☒ 4. DRJP

Question ID : 264330151677

Option 1 ID : 264330594338

Option 2 ID : 264330594335

Option 3 ID : 264330594337

Option 4 ID : 264330594336

Status : Answered

Chosen Option : 4

Q.13 Select the combination of letters that when sequentially placed in the blanks of the given series, will complete the series.

_ KL _ K _ KK _ _ KL

- Ans**
- ✓ 1. KKLLK
 - ✗ 2. LLKLL
 - ✗ 3. KKKLL
 - ✗ 4. LKLLK

Question ID : 264330151636

Option 1 ID : 264330594171

Option 2 ID : 264330594174

Option 3 ID : 264330594173

Option 4 ID : 264330594172

Status : Answered

Chosen Option : 1

Q.14 What should come in place of '?' in the given series?

2 9 30 93 282 ?

- Ans**
- ✗ 1. 813
 - ✓ 2. 849
 - ✗ 3. 861
 - ✗ 4. 857

Question ID : 264330151465

Option 1 ID : 264330593487

Option 2 ID : 264330593488

Option 3 ID : 264330593490

Option 4 ID : 264330593489

Status : Answered

Chosen Option : 2

Q.15 N, O, P, Q, R, S, T and U are sitting around a square table facing the center of the table. Some of them are sitting at the corners while some are sitting at the exact center of the sides. N sits third to the left of U. U sits in any of the corners. O sits third to the right of T. T sits in one of the corners. Q is the immediate neighbour of P and U. P is not the neighbour of N. R is not T's neighbour.

How many people sit between P and R, when counted from the right of P?

- Ans**
- ✗ 1. Two
 - ✗ 2. Four
 - ✗ 3. One
 - ✓ 4. Three

Question ID : 264330155541

Option 1 ID : 264330609568

Option 2 ID : 264330609570

Option 3 ID : 264330609567

Option 4 ID : 264330609569

Status : Answered

Chosen Option : 3

Q.16 What will come in place of '?' in the following equation, if '+' and '-' are interchanged and '×' and '÷' are interchanged?

$$7 + 3 - 6 + 4 \times 4 = ?$$

- Ans**
- ✓ 1. 10
 - ✗ 2. 7
 - ✗ 3. 4
 - ✗ 4. 15

Question ID : 264330154668

Option 1 ID : 264330606138

Option 2 ID : 264330606135

Option 3 ID : 264330606136

Option 4 ID : 264330606137

Status : Answered

Chosen Option : 1

Q.17 Which figure should replace the question mark (?) if the following figure series were to be continued?

X	□	L	8	X	F	3	C	X	□	3	L	
	3			L		8			X			?
8	C	F	C	□	3	□	F	L	F	C	8	

Ans

✓ 1.

8	F	3
	□	
C	L	X

✗ 2.

3	L	F
	□	
C	8	X

✗ 3.

F	C	3
	□	
X	8	L

✗ 4.

8	L	3
	□	
C	F	X

Question ID : 264330154760

Option 1 ID : 264330606505

Option 2 ID : 264330606503

Option 3 ID : 264330606506

Option 4 ID : 264330606504

Status : Answered

Chosen Option : 1

Q.18 Select the set in which the numbers are related in the same way as are the numbers of the following sets.
(NOTE: Operations should be performed on the whole numbers, without breaking down the numbers into its constituent digits. E.g. 13 – Operations on 13 such as adding / subtracting / multiplying etc. to 13 can be performed. Breaking down 13 into 1 and 3 and then performing mathematical operations on 1 and 3 is not allowed)
(2, 14, 28)
(7, 11, 77)

- Ans ☒ 1. 4, 7, 23
☒ 2. 6, 9, 54
☒ 3. 1, 7, 45
☒ 4. 8, 6, 98

Question ID : 264330151614
Option 1 ID : 264330594083
Option 2 ID : 264330594085
Option 3 ID : 264330594084
Option 4 ID : 264330594086
Status : Answered
Chosen Option : 2

Q.19 What should come in place of '?' in the given series?

10 41 165 661 2645 ?

- Ans ☒ 1. 10597
☒ 2. 10581
☒ 3. 10604
☒ 4. 10378

Question ID : 264330151480
Option 1 ID : 264330593549
Option 2 ID : 264330593548
Option 3 ID : 264330593550
Option 4 ID : 264330593547
Status : Answered
Chosen Option : 2

Q.20 If 5 October 2003 is a Sunday, then what will be the day of the week on 14 July 2010?

- Ans ☒ 1. Friday
☒ 2. Monday
☒ 3. Wednesday
☒ 4. Saturday

Question ID : 264330154356
Option 1 ID : 264330604888
Option 2 ID : 264330604889
Option 3 ID : 264330604890
Option 4 ID : 264330604887
Status : Not Answered
Chosen Option : --

Q.1 What does the term 'interest' refer to in banking?

- Ans** ☒ 1. The additional amount earned on a loan or deposit
- ☐ 2. The amount of money deposited into a bank account
- ☐ 3. The value of a currency in relation to other currencies
- ☐ 4. The fee charged for withdrawing money from an ATM

Question ID : 264330157299

Option 1 ID : 264330616561

Option 2 ID : 264330616560

Option 3 ID : 264330616562

Option 4 ID : 264330616559

Status : **Answered**

Chosen Option : 1

Q.2 Bihu is a folk dance of which state?

- Ans** ☐ 1. Bihar
- ☒ 2. Assam
- ☐ 3. Chhattisgarh
- ☐ 4. Arunachal Pradesh

Question ID : 264330159055

Option 1 ID : 264330623579

Option 2 ID : 264330623581

Option 3 ID : 264330623582

Option 4 ID : 264330623580

Status : **Answered**

Chosen Option : 1

Q.3 In which year did Lord Curzon announce the partition of Bengal during the British rule in India?

- Ans** ☐ 1. 1904
- ☐ 2. 1906
- ☒ 3. 1905
- ☐ 4. 1907

Question ID : 264330161737

Option 1 ID : 264330634275

Option 2 ID : 264330634277

Option 3 ID : 264330634276

Option 4 ID : 264330634278

Status : **Answered**

Chosen Option : 3

Q.4 Which of the following statements are correct regarding the Power Sector's Revamped Distribution Sector Scheme?

- 1) The Prime Minister launched the Ministry of Power's flagship Revamped Distribution Sector Scheme in 2022.
- 2) This scheme is aimed at improving the operational efficiencies and financial sustainability of distribution companies.
- 3) From FY 2022-23 to FY 2027-28, the scheme aims to provide financial assistance to DISCOMs.
- 4) This scheme proposes to provide 25 crore Smart Prepaid meters to consumers all over the country.

Ans ☒ 1. 1, 3 and 4

☒ 2. 1, 2 and 4

☒ 3. 2, 3 and 4

☒ 4. 1, 2 and 3

Question ID : 264330161404

Option 1 ID : 264330632944

Option 2 ID : 264330632945

Option 3 ID : 264330632946

Option 4 ID : 264330632943

Status : Answered

Chosen Option : 2

Q.5 'Mein Kampf' is the autobiography of which world personality?

Ans ☒ 1. Adolf Hitler

☒ 2. Robert Mugabe

☒ 3. Albert Einstein

☒ 4. Charlie Chaplin

Question ID : 264330160966

Option 1 ID : 264330631196

Option 2 ID : 264330631198

Option 3 ID : 264330631197

Option 4 ID : 264330631195

Status : Answered

Chosen Option : 1

Q.6 What is the geographic location of the world's largest coral reef, known as the Great Barrier Reef?

Ans ☒ 1. Switzerland

☒ 2. Australia

☒ 3. China

☒ 4. Ireland

Question ID : 264330161313

Option 1 ID : 264330632580

Option 2 ID : 264330632581

Option 3 ID : 264330632582

Option 4 ID : 264330632579

Status : Answered

Chosen Option : 2

Q.7 To which Gharana did Gangubai Hangal primarily belong?

- Ans
- ☐ 1. Patiala
 - ☐ 2. Agra
 - ☐ 3. Banaras
 - ☒ 4. Kirana

Question ID : 264330155467

Option 1 ID : 264330609273

Option 2 ID : 264330609274

Option 3 ID : 264330609271

Option 4 ID : 264330609272

Status : Not Attempted and
Marked For Review

Chosen Option : --

Q.8 Popular since ancient eras for the trading of livestock, _____, which is a month-long event, takes place on the auspicious occasion of Kartik Purnima in the month of November near Harihar Nath temple.

- Ans
- ☒ 1. Sonepur Mela
 - ☐ 2. Rajgir Mela
 - ☐ 3. Pushkar Mela
 - ☐ 4. Ardhkumbh Mela

Question ID : 264330160835

Option 1 ID : 264330630671

Option 2 ID : 264330630673

Option 3 ID : 264330630672

Option 4 ID : 264330630674

Status : Answered

Chosen Option : 1

Q.9 How many states were selected in Garib Kalyan Rojgar Abhiyaan (GKRA) 2020?

- Ans
- ☐ 1. 16 states
 - ☒ 2. 6 states
 - ☐ 3. 10 states
 - ☐ 4. 8 states

Question ID : 264330160170

Option 1 ID : 264330628022

Option 2 ID : 264330628019

Option 3 ID : 264330628021

Option 4 ID : 264330628020

Status : Not Answered

Chosen Option : --

Q.10 The celebrated folk artist Gulabo Sapera, recipient of Padma Shri Award in 2016, is an exponent of _____ dance.

- Ans**
- ☒ 1. Kalbeliya
 - ☐ 2. Tippani
 - ☐ 3. Bhavai
 - ☐ 4. Dandiya

Question ID : 264330155485
Option 1 ID : 264330609345
Option 2 ID : 264330609344
Option 3 ID : 264330609346
Option 4 ID : 264330609343
Status : Answered
Chosen Option : 4

Q.11 Which Indian musician was awarded the Grammy award for his Album 'Planet Drum'?

- Ans**
- ☒ 1. Zakir Hussain
 - ☐ 2. Sivamani
 - ☐ 3. Darshan Doshi
 - ☐ 4. Trilok Gurtu

Question ID : 264330155461
Option 1 ID : 264330609247
Option 2 ID : 264330609248
Option 3 ID : 264330609250
Option 4 ID : 264330609249
Status : Answered
Chosen Option : 1

Q.12 Which of the following is NOT a part of the six communication mail channels in India?

- Ans**
- ☐ 1. Metro channel
 - ☒ 2. Monthly channel
 - ☐ 3. Rajdhani channel
 - ☐ 4. Business channel

Question ID : 264330160144
Option 1 ID : 264330627918
Option 2 ID : 264330627916
Option 3 ID : 264330627915
Option 4 ID : 264330627917
Status : Answered
Chosen Option : 2

Q.13 Which of the following is an example of a non-debt capital receipt in the government budget?

- Ans** ☒ 1. Sale of government-owned land
☒ 2. Loans from international financial institutions
☒ 3. Interest payment on government bonds
☒ 4. Tax revenue collected from citizens

Question ID : 264330157279

Option 1 ID : 264330616480

Option 2 ID : 264330616479

Option 3 ID : 264330616482

Option 4 ID : 264330616481

Status : Answered

Chosen Option : 3

Q.14 Visva Bharati a famous educational institute was founded in 1921 by:

- Ans** ☒ 1. Rabindranath Tagore
☒ 2. Vinoba Bhave
☒ 3. Mother Teresa
☒ 4. Swami Chinmayananda

Question ID : 264330160885

Option 1 ID : 264330630874

Option 2 ID : 264330630872

Option 3 ID : 264330630873

Option 4 ID : 264330630871

Status : Answered

Chosen Option : 1

Q.15 How many women boxers from India won gold medals in the Women's World Boxing Championship 2023?

- Ans** ☒ 1. 2
☒ 2. 3
☒ 3. 1
☒ 4. 4

Question ID : 264330158225

Option 1 ID : 264330620260

Option 2 ID : 264330620261

Option 3 ID : 264330620259

Option 4 ID : 264330620262

Status : Answered

Chosen Option : 3

Q.16 Famous Bollywood actress Hema Malini is a trained _____ dancer.

- Ans** ☒ 1. Kathak
☒ 2. Bharatanatyam
☒ 3. Odissi
☒ 4. Kuchipudi

Question ID : 264330159066

Option 1 ID : 264330623626

Option 2 ID : 264330623625

Option 3 ID : 264330623624

Option 4 ID : 264330623623

Status : Answered

Chosen Option : 1

Q.17 Whose prior recommendation is required to introduce money bills in state legislature?

- Ans**
- ☒ 1. Speaker of the House
 - ☒ 2. Chief Minister
 - ☒ 3. Governor
 - ☒ 4. Advocate General

Question ID : 264330159923

Option 1 ID : 264330627041

Option 2 ID : 264330627039

Option 3 ID : 264330627040

Option 4 ID : 264330627042

Status : Answered

Chosen Option : 3

Q.18 RK Narayan is the author of _____.

- Ans**
- ☒ 1. The Guide
 - ☒ 2. Far From the Madding Crowd
 - ☒ 3. Godan
 - ☒ 4. Untouchable

Question ID : 264330160971

Option 1 ID : 264330631218

Option 2 ID : 264330631217

Option 3 ID : 264330631215

Option 4 ID : 264330631216

Status : Answered

Chosen Option : 2

Q.19 Where is the Qutub Minar situated?

- Ans**
- ☒ 1. Delhi
 - ☒ 2. Agra
 - ☒ 3. Lucknow
 - ☒ 4. Chandigarh

Question ID : 264330160767

Option 1 ID : 264330630401

Option 2 ID : 264330630402

Option 3 ID : 264330630400

Option 4 ID : 264330630399

Status : Answered

Chosen Option : 1

Q.20 Which is the most obvious symptom of infantile jaundice that usually appears between the second and fourth day after birth?

- Ans**
- ☒ 1. Cracking and irritation at the corners of mouth
 - ☒ 2. Swollen or puffy ankles
 - ☒ 3. Yellowing of the skin and the whites of the eyes
 - ☒ 4. Swelling and bleeding of the gums

Question ID : 264330161080

Option 1 ID : 264330631653

Option 2 ID : 264330631651

Option 3 ID : 264330631652

Option 4 ID : 264330631654

Status : Answered

Chosen Option : 3

Q.21 The Units of Linear momentum are measured in _____.

- Ans
- ☒ 1. $\text{kg}^2 \text{ m/s}$
 - ☒ 2. kg m/s^2
 - ☒ 3. $\text{k}^2\text{g m/s}$
 - ☒ 4. kg m/s

Question ID : 264330157779

Option 1 ID : 264330618476

Option 2 ID : 264330618477

Option 3 ID : 264330618478

Option 4 ID : 264330618475

Status : Answered

Chosen Option : 2

Q.22 In which of the following cities the 2023 SAFF Championship was held?

- Ans
- ☒ 1. Mumbai
 - ☒ 2. Bengaluru
 - ☒ 3. Kochi
 - ☒ 4. Ahmedabad

Question ID : 264330161149

Option 1 ID : 264330631927

Option 2 ID : 264330631929

Option 3 ID : 264330631928

Option 4 ID : 264330631930

Status : Answered

Chosen Option : 2

Q.23 Mirabai Chanu was selected as BBC Indian Sportswoman of the Year 2022. She is related to which sport?

- Ans
- ☒ 1. Discus throw
 - ☒ 2. Javelin throw
 - ☒ 3. Boxing
 - ☒ 4. Weightlifting

Question ID : 264330158367

Option 1 ID : 264330620830

Option 2 ID : 264330620829

Option 3 ID : 264330620827

Option 4 ID : 264330620828

Status : Answered

Chosen Option : 4

Q.24 Punjab state is rich in which natural resource from the following?

- Ans
- ☒ 1. Coal
 - ☒ 2. Petroleum
 - ☒ 3. Silicon
 - ☒ 4. Fertile soil

Question ID : 264330161493

Option 1 ID : 264330633301

Option 2 ID : 264330633299

Option 3 ID : 264330633302

Option 4 ID : 264330633300

Status : Answered

Chosen Option : 4

Q.25 How many schedules are there in our Constitution as of June 2023?

- Ans ☒ 1. 8
☒ 2. 9
☒ 3. 12
☒ 4. 10

Question ID : 264330159895

Option 1 ID : 264330626927

Option 2 ID : 264330626930

Option 3 ID : 264330626929

Option 4 ID : 264330626928

Status : Answered

Chosen Option : 3

Section : English Language and Comprehension

Q.1 Select the most appropriate synonym of the given word.
Diminish

- Ans ☒ 1. Demote
☒ 2. Relegate
☒ 3. Prevent
☒ 4. Weaken

Question ID : 264330151879

Option 1 ID : 264330595135

Option 2 ID : 264330595137

Option 3 ID : 264330595138

Option 4 ID : 264330595136

Status : Answered

Chosen Option : 1

Q.2 Select the option that can be used as a one-word substitute for the given group of words.

A person who loves or collects books

- Ans ☒ 1. Anglophile
☒ 2. Heliophile
☒ 3. Paedophile
☒ 4. Bibliophile

Question ID : 264330151866

Option 1 ID : 264330595085

Option 2 ID : 264330595086

Option 3 ID : 264330595084

Option 4 ID : 264330595083

Status : Answered

Chosen Option : 4

Q.3 The following sentence has been divided into four parts. Identify the part that contains an error.

(A) We are living / (B) here since / (C) the summer / (D) of last year.

Ans ☒ 1. A

☒ 2. C

☒ 3. B

☒ 4. D

Question ID : 264330152627

Option 1 ID : 264330598114

Option 2 ID : 264330598111

Option 3 ID : 264330598112

Option 4 ID : 264330598113

Status : Answered

Chosen Option : 3

Q.4 Select the most appropriate option to fill in the blank.

Suresh has been learning Tamil _____ two months.

Ans ☒ 1. from

☒ 2. since

☒ 3. before

☒ 4. for

Question ID : 264330152732

Option 1 ID : 264330598527

Option 2 ID : 264330598528

Option 3 ID : 264330598530

Option 4 ID : 264330598529

Status : Answered

Chosen Option : 1

Q.5 Select the most appropriate meaning of the underlined idiom in the given sentence.

Rina's house is at a stone's throw from the school.

Ans ☒ 1. A very long distance

☒ 2. Next to

☒ 3. A very short distance

☒ 4. Not very close to

Question ID : 264330152877

Option 1 ID : 264330599099

Option 2 ID : 264330599101

Option 3 ID : 264330599100

Option 4 ID : 264330599102

Status : Answered

Chosen Option : 3

Q.6 Select the INCORRECTLY spelt word.

- Ans ☒ 1. Wrestler
☒ 2. Accompaniment
☒ 3. Debatable
☒ 4. Discrepancy

Question ID : 264330152786

Option 1 ID : 264330598737

Option 2 ID : 264330598738

Option 3 ID : 264330598735

Option 4 ID : 264330598736

Status : Answered

Chosen Option : 2

Q.7 Select the most appropriate option to substitute the underlined segment in the given sentence.

Mohan unknowingly altered salt instead of sugar to the dessert making it taste terrible.

- Ans ☒ 1. added salt instead of sugar
☒ 2. anguished salt instead of sugar
☒ 3. amplified salt instead of sugar
☒ 4. abridged salt instead of sugar

Question ID : 264330153435

Option 1 ID : 264330601266

Option 2 ID : 264330601264

Option 3 ID : 264330601263

Option 4 ID : 264330601265

Status : Answered

Chosen Option : 3

Q.8 Select the most appropriate meaning of the underlined idiom.

The actor decided to live life in the fast lane.

- Ans ☒ 1. Dropping charges of crime
☒ 2. A life filled with excitement
☒ 3. Racing away to the moon
☒ 4. A life of extreme speed

Question ID : 264330153144

Option 1 ID : 264330600137

Option 2 ID : 264330600138

Option 3 ID : 264330600136

Option 4 ID : 264330600135

Status : Answered

Chosen Option : 4

Q.9 Parts of the following sentence have been given as options. Select the option that contains an error.
Sanjana rubbed her eyes hardly.

- Ans
- ☒ 1. Sanjana
 - ☒ 2. rubbed
 - ☒ 3. hardly
 - ☒ 4. her eyes

Question ID : 264330152807

Option 1 ID : 264330598819

Option 2 ID : 264330598820

Option 3 ID : 264330598822

Option 4 ID : 264330598821

Status : Answered

Chosen Option : 3

Q.10 Select the most appropriate idiom to fill in the blank.
I asked my friend to _____ against her employers who are doing wrong to her.

- Ans
- ☒ 1. fine words butter no parsnips
 - ☒ 2. finders keepers, losers weepers
 - ☒ 3. fight the good fight
 - ☒ 4. fight fire with fire

Question ID : 264330153297

Option 1 ID : 264330600746

Option 2 ID : 264330600744

Option 3 ID : 264330600743

Option 4 ID : 264330600745

Status : Answered

Chosen Option : 4

Q.11 Parts of the following sentence have been underlined and given as options. Select the option that contains a misspelt word.

The single most important factor that distinguishes those of us who succed in any venture and those of us who don't is this 'instant coffee' attitude.

- Ans
- ☒ 1. venture
 - ☒ 2. attitude
 - ☒ 3. distinguishes
 - ☒ 4. succed

Question ID : 264330151835

Option 1 ID : 264330594969

Option 2 ID : 264330594970

Option 3 ID : 264330594967

Option 4 ID : 264330594968

Status : Answered

Chosen Option : 4

Q.12 The following sentence has been divided into parts. One of them may contain an error. Select the part that contains the error from the given options. If you don't find any error, mark 'No error' as your answer.
A night alone / in a hotel / can be lonely prospect.

Ans ☒ 1. can be lonely prospect

☒ 2. A night alone

☒ 3. No error

☒ 4. in a hotel

Question ID : 264330153195

Option 1 ID : 264330600341

Option 2 ID : 264330600339

Option 3 ID : 264330600342

Option 4 ID : 264330600340

Status : Answered

Chosen Option : 1

Q.13 Parts of the given sentence have been underlined. One of them contains an error. The underlined parts are given as options with some changes. Select the option that correctly rectifies the error.

The new restaurant on Main Street is cheap than the old one.

Ans ☒ 1. the older one

☒ 2. in Main Street

☒ 3. newer restaurant

☒ 4. is cheaper than

Question ID : 264330153171

Option 1 ID : 264330600246

Option 2 ID : 264330600244

Option 3 ID : 264330600243

Option 4 ID : 264330600245

Status : Answered

Chosen Option : 4

Q.14 Parts of the following sentence have been underlined and given as options. Select the option that contains an error.

My relatives shall have reached Amritsar by now.

Ans ☒ 1. My

☒ 2. by now

☒ 3. shall

☒ 4. reached

Question ID : 264330153189

Option 1 ID : 264330600315

Option 2 ID : 264330600318

Option 3 ID : 264330600316

Option 4 ID : 264330600317

Status : Answered

Chosen Option : 3

Q.15 Select the option that can be used as a one-word substitute for the given group of words.

Group of bees

- Ans ☒ 1. Gaggle
☒ 2. Shoal
☒ 3. Swarm
☒ 4. Pack

Question ID : 264330151814

Option 1 ID : 264330594883

Option 2 ID : 264330594884

Option 3 ID : 264330594885

Option 4 ID : 264330594886

Status : Answered

Chosen Option : 3

Q.16 Select the most appropriate ANTONYM of the given word.
Crude

- Ans ☒ 1. Patient
☒ 2. Refined
☒ 3. Primitive
☒ 4. Observant

Question ID : 264330153365

Option 1 ID : 264330601013

Option 2 ID : 264330601011

Option 3 ID : 264330601012

Option 4 ID : 264330601014

Status : Answered

Chosen Option : 2

Q.17 Select the most appropriate option to fill in the blank.
Can you quote any _____ in your favour?

- Ans ☒ 1. answer
☒ 2. summary
☒ 3. lines
☒ 4. precedent

Question ID : 264330153357

Option 1 ID : 264330600981

Option 2 ID : 264330600979

Option 3 ID : 264330600982

Option 4 ID : 264330600980

Status : Answered

Chosen Option : 1

Q.18 Select the INCORRECTLY spelt word.

- Ans ☒ 1. Insurance
☒ 2. Assasin
☒ 3. Mischievous
☒ 4. Inexpressible

Question ID : 264330152691

Option 1 ID : 264330598368

Option 2 ID : 264330598369

Option 3 ID : 264330598367

Option 4 ID : 264330598370

Status : Answered

Chosen Option : 2

Q.19 Select the most appropriate meaning of the underlined segment in the given sentence.
Buying a new car can cost an arm and a leg.

- Ans ☒ 1. Be free
☒ 2. Be affordable
☒ 3. Be reasonable
☒ 4. Be expensive

Question ID : 264330152926

Option 1 ID : 264330599284

Option 2 ID : 264330599285

Option 3 ID : 264330599286

Option 4 ID : 264330599283

Status : Answered

Chosen Option : 4

Q.20 Select the most appropriate synonym of the given word.
Insist

- Ans ☒ 1. Persist
☒ 2. Resist
☒ 3. Heist
☒ 4. Assist

Question ID : 264330151824

Option 1 ID : 264330594926

Option 2 ID : 264330594924

Option 3 ID : 264330594923

Option 4 ID : 264330594925

Status : Answered

Chosen Option : 2

Comprehension:

In the following passage, some words have been deleted. Read the passage carefully and select the most appropriate option to fill in each blank.

There are several reasons why people might 1)_____ that homework is an unnecessary burden on children. Firstly, there is evidence to support the idea that homework 2)_____ nothing to improve educational outcomes. Countries such as Finland, where school children are not given homework, regularly top international educational league tables and outperform nations where setting homework is the norm. Secondly, many parents would agree that the school day is already 3)_____, and leaves their children too tired to do further study when they return home. 4)_____, it is recognised that play time is just as 5)_____ as study time from the perspective of brain development.

SubQuestion No : 21

Q.21 Select the most appropriate option to fill in blank 1.

Ans ☒ 1. be argues

☒ 2. have argue

☒ 3. argues

☒ 4. argue

Question ID : 264330153600

Option 1 ID : 264330601886

Option 2 ID : 264330601885

Option 3 ID : 264330601884

Option 4 ID : 264330601883

Status : Answered

Chosen Option : 1

Comprehension:

In the following passage, some words have been deleted. Read the passage carefully and select the most appropriate option to fill in each blank.

There are several reasons why people might 1)_____ that homework is an unnecessary burden on children. Firstly, there is evidence to support the idea that homework 2)_____ nothing to improve educational outcomes. Countries such as Finland, where school children are not given homework, regularly top international educational league tables and outperform nations where setting homework is the norm. Secondly, many parents would agree that the school day is already 3)_____, and leaves their children too tired to do further study when they return home. 4)_____, it is recognised that play time is just as 5)_____ as study time from the perspective of brain development.

SubQuestion No : 22

Q.22 Select the most appropriate option to fill in blank 2.

Ans ☒ 1. will does

☒ 2. has do

☒ 3. does

☒ 4. do

Question ID : 264330153601

Option 1 ID : 264330601890

Option 2 ID : 264330601887

Option 3 ID : 264330601889

Option 4 ID : 264330601888

Status : Answered

Chosen Option : 4

Comprehension:

In the following passage, some words have been deleted. Read the passage carefully and select the most appropriate option to fill in each blank.

There are several reasons why people might 1)_____ that homework is an unnecessary burden on children. Firstly, there is evidence to support the idea that homework 2)_____ nothing to improve educational outcomes. Countries such as Finland, where school children are not given homework, regularly top international educational league tables and outperform nations where setting homework is the norm. Secondly, many parents would agree that the school day is already 3)_____, and leaves their children too tired to do further study when they return home. 4)_____, it is recognised that play time is just as 5)_____ as study time from the perspective of brain development.

SubQuestion No : 23

Q.23 Select the most appropriate option to fill in blank 3.

Ans ✓ 1. long enough

✗ 2. big enough

✗ 3. not enough

✗ 4. enough of

Question ID : 264330153602

Option 1 ID : 264330601892

Option 2 ID : 264330601891

Option 3 ID : 264330601894

Option 4 ID : 264330601893

Status : Answered

Chosen Option : 1

Comprehension:

In the following passage, some words have been deleted. Read the passage carefully and select the most appropriate option to fill in each blank.

There are several reasons why people might 1)_____ that homework is an unnecessary burden on children. Firstly, there is evidence to support the idea that homework 2)_____ nothing to improve educational outcomes. Countries such as Finland, where school children are not given homework, regularly top international educational league tables and outperform nations where setting homework is the norm. Secondly, many parents would agree that the school day is already 3)_____, and leaves their children too tired to do further study when they return home. 4)_____, it is recognised that play time is just as 5)_____ as study time from the perspective of brain development.

SubQuestion No : 24

Q.24 Select the most appropriate option to fill in blank 4.

Ans ✗ 1. Similarly

✗ 2. Normally

✓ 3. Finally

✗ 4. Usually

Question ID : 264330153603

Option 1 ID : 264330601897

Option 2 ID : 264330601895

Option 3 ID : 264330601898

Option 4 ID : 264330601896

Status : Answered

Chosen Option : 4

Comprehension:

In the following passage, some words have been deleted. Read the passage carefully and select the most appropriate option to fill in each blank.

There are several reasons why people might 1)_____ that homework is an unnecessary burden on children. Firstly, there is evidence to support the idea that homework 2)_____ nothing to improve educational outcomes. Countries such as Finland, where school children are not given homework, regularly top international educational league tables and outperform nations where setting homework is the norm. Secondly, many parents would agree that the school day is already 3)_____, and leaves their children too tired to do further study when they return home. 4)_____, it is recognised that play time is just as 5)_____ as study time from the perspective of brain development.

SubQuestion No : 25

Q.25 Select the most appropriate option to fill in blank 5.

- Ans ☒ 1. soon
☒ 2. beneficial
☒ 3. bad
☒ 4. confidential

Question ID : **264330153604**

Option 1 ID : **264330601899**

Option 2 ID : **264330601900**

Option 3 ID : **264330601902**

Option 4 ID : **264330601901**

Status : **Answered**

Chosen Option : **2**