

## Multi Tasking Non Technical Staff and Havaladar CBIC and CBN Examination 2023

Roll Number	
Candidate Name	
Venue Name	iON Digital Zone iDZ HAZARIBAGH
Exam Date	06/09/2023
Exam Time	9:00 AM - 11:00 AM
Subject	MTS Non Tech Havaladar CBIC and CBN Examination 2023

### Section : Numerical and Mathematical Ability

**Q.1** A certain sum is to be divided between A, B, and C in the ratio 2 : 5 : 7. But by mistake, it was divided in the ratio 5 : 2 : 7. Thus B loses by ₹150. Find the sum.

- Ans**
- ✓ 1. ₹700
  - ✗ 2. ₹850
  - ✗ 3. ₹900
  - ✗ 4. ₹625

Question ID : 264330156342

Option 1 ID : 264330612768

Option 2 ID : 264330612769

Option 3 ID : 264330612770

Option 4 ID : 264330612767

Status : Answered

Chosen Option : 1

**Q.2** Four books and eight pens were bought for ₹260. If the average price of a book is ₹35, then the average price of a pen would be:

- Ans**
- ✗ 1. ₹31
  - ✗ 2. ₹5
  - ✓ 3. ₹15
  - ✗ 4. ₹10

Question ID : 264330153868

Option 1 ID : 264330602936

Option 2 ID : 264330602935

Option 3 ID : 264330602937

Option 4 ID : 264330602938

Status : Answered

Chosen Option : 3

Q.3 The fourth proportional to 1.5, 4.8 and 8 is:

- Ans ☒ 1. 25.6  
☐ 2. 26.5  
☐ 3. 22.6  
☐ 4. 24.5

Question ID : 264330153770

Option 1 ID : 264330602543

Option 2 ID : 264330602545

Option 3 ID : 264330602546

Option 4 ID : 264330602544

Status : Answered

Chosen Option : 1

Q.4 X can type 8 pages in 3 minutes. Y can type 3 pages in 5 minutes. Working together, how many pages can they type in 15 minutes?

- Ans ☐ 1. 42  
☐ 2. 40  
☐ 3. 46  
☒ 4. 49

Question ID : 264330156239

Option 1 ID : 264330612356

Option 2 ID : 264330612355

Option 3 ID : 264330612357

Option 4 ID : 264330612358

Status : Answered

Chosen Option : 4

Q.5 The average weight of 20 students of a class was 30.5 kg. After 6 new students joined the class, its average weight increased by 2 kg. Find the average weight of the 6 new students who joined the class (rounded off to one decimal place).

- Ans ☐ 1. 30.5 kg  
☐ 2. 32.5 kg  
☒ 3. 39.2 kg  
☐ 4. 38.5 kg

Question ID : 264330157323

Option 1 ID : 264330616657

Option 2 ID : 264330616656

Option 3 ID : 264330616658

Option 4 ID : 264330616655

Status : Answered

Chosen Option : 3

**Q.6** A batsman makes 96 runs in the 13<sup>th</sup> innings and thus his average increases by 3. Find his average after 13 innings.

- Ans**
- ☐ 1. 65
  - ☐ 2. 50
  - ☐ 3. 70
  - ☒ 4. 60

Question ID : 264330155987

Option 1 ID : 264330611349

Option 2 ID : 264330611347

Option 3 ID : 264330611350

Option 4 ID : 264330611348

Status : Answered

Chosen Option : 4

**Q.7** Surjeet alone can finish an assignment in 8 days and Manjeet alone can finish the same assignment in 6 days. Surjeet and Manjeet decided to do this assignment by working on alternate days, starting with Surjeet. In how many days will the assignment be finished?

- Ans**
- ☒ 1. 7 days
  - ☐ 2. 8.5 days
  - ☐ 3. 8 days
  - ☐ 4. 7.5 days

Question ID : 264330154134

Option 1 ID : 264330603999

Option 2 ID : 264330604002

Option 3 ID : 264330604001

Option 4 ID : 264330604000

Status : Answered

Chosen Option : 1

**Q.8** Two numbers are in the ratio of 2 : 5. Their LCM is 80. Find the numbers.

- Ans**
- ☐ 1. 18 , 38
  - ☐ 2. 14 , 36
  - ☒ 3. 16 , 40
  - ☐ 4. 16 , 38

Question ID : 264330156206

Option 1 ID : 264330612226

Option 2 ID : 264330612225

Option 3 ID : 264330612224

Option 4 ID : 264330612223

Status : Answered

Chosen Option : 3

**Q.9** Two trains of equal length are running on parallel lines in the same direction at 36 km/h and 54 km/h. The faster train passes the slower train in 48 seconds. The length of each train (in m) is:

- Ans**
- ☒ 1. 80
  - ☒ 2. 160
  - ☒ 3. 240
  - ☒ 4. 120

Question ID : 264330156490

Option 1 ID : 264330613349

Option 2 ID : 264330613350

Option 3 ID : 264330613347

Option 4 ID : 264330613348

Status : Answered

Chosen Option : 3

**Q.10** If the sides of a triangle are in the ratio 3 : 4 : 5 and its perimeter is 24 m, then find the area of the triangle.

- Ans**
- ☒ 1.  $32 \text{ m}^2$
  - ☒ 2.  $37 \text{ m}^2$
  - ☒ 3.  $16 \text{ m}^2$
  - ☒ 4.  $24 \text{ m}^2$

Question ID : 264330156065

Option 1 ID : 264330611661

Option 2 ID : 264330611662

Option 3 ID : 264330611659

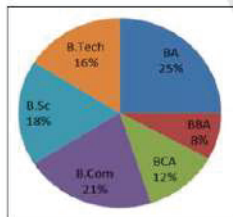
Option 4 ID : 264330611660

Status : Not Answered

Chosen Option : --

**Q.11** The pie chart shows the percentage of students studying different courses in a college.

The ratio between the number of students studying in BCA and B.sc, if the total number of students is 1200, is:



- Ans**
- ☒ 1. 14 : 27
  - ☒ 2. 32 : 63
  - ☒ 3. 7 : 9
  - ☒ 4. 2 : 3

Question ID : 264330154067

Option 1 ID : 264330603731

Option 2 ID : 264330603733

Option 3 ID : 264330603734

Option 4 ID : 264330603732

Status : Answered

Chosen Option : 4

Q.12 Simplify the following expression.

$$45 - 22 \div 2 + 12 + 70 \div 35 + 0.4 \div 0.8 + 1.5 \div 3 + 1$$

- Ans ☒ 1. 50  
☐ 2. 50.5  
☐ 3. 48.5  
☐ 4. 54.5

Question ID : 264330153830  
Option 1 ID : 264330602785  
Option 2 ID : 264330602783  
Option 3 ID : 264330602786  
Option 4 ID : 264330602784  
Status : Answered  
Chosen Option : 1

Q.13 Find the simple interest (in ₹) on ₹5,400 for 7 years at 4% per annum.

- Ans ☒ 1. 1,512  
☐ 2. 1,230  
☐ 3. 1,380  
☐ 4. 1,172

Question ID : 264330155744  
Option 1 ID : 264330610379  
Option 2 ID : 264330610381  
Option 3 ID : 264330610380  
Option 4 ID : 264330610382  
Status : Answered  
Chosen Option : 1

Q.14 What is the length of the longest pole that can be placed in an indoor stadium 24 m long, 18 m wide and 16 m high?

- Ans ☐ 1. 38 m  
☒ 2. 34 m  
☐ 3. 42 m  
☐ 4. 36 m

Question ID : 264330154108  
Option 1 ID : 264330603896  
Option 2 ID : 264330603898  
Option 3 ID : 264330603895  
Option 4 ID : 264330603897  
Status : Not Answered  
Chosen Option : --

**Q.15** Study the given table and answer the question that follows.

The table shows the centre and post-wise number of candidates.

Centre	Officer	Clerk	Supervisor	Field Officer
Mumbai	12000	18000	8000	200
Chennai	8000	10000	6000	100
Hyderabad	10000	12000	7000	150
Bengaluru	9000	6000	5000	80
Kolkata	14000	18000	6500	120

Which centre has the highest number of candidates?

- Ans  1. Mumbai  
 2. Kolkata  
 3. Chennai  
 4. Hyderabad

Question ID : 264330155978

Option 1 ID : 264330611313

Option 2 ID : 264330611312

Option 3 ID : 264330611314

Option 4 ID : 264330611311

Status : Answered

Chosen Option : 2

**Q.16** A thief is spotted by a policeman from a distance of 108 m. The thief starts running and the policeman chases him. If the speed of the thief and policeman are 21 km/h and 23 km/h, respectively, then how far will the thief have to run (in m) before he is overtaken by the policeman?

- Ans  1. 2534  
 2. 3121  
 3. 1216  
 4. 1134

Question ID : 264330154092

Option 1 ID : 264330603832

Option 2 ID : 264330603834

Option 3 ID : 264330603831

Option 4 ID : 264330603833

Status : Not Answered

Chosen Option : --

**Q.17** What is the difference between the compound interest, interest compounded half yearly on ₹72,000 for 1.5 years at 10% per annum and its simple interest for 3 years at 5% per annum?

- Ans
- ☒ 1. ₹559
  - ☒ 2. ₹549
  - ☒ 3. ₹540
  - ☒ 4. ₹449

Question ID : 264330154133

Option 1 ID : 264330603996

Option 2 ID : 264330603998

Option 3 ID : 264330603997

Option 4 ID : 264330603995

Status : Not Answered

Chosen Option : --

**Q.18** The profit obtained by a vendor on selling goods at ₹3,200 is equal to 7/5th of the profit obtained by selling the same goods at ₹3,000. What is the cost price (in ₹) of the goods?

- Ans
- ☒ 1. 2,500
  - ☒ 2. 2,700
  - ☒ 3. 2,400
  - ☒ 4. 2,900

Question ID : 264330156104

Option 1 ID : 264330611817

Option 2 ID : 264330611816

Option 3 ID : 264330611818

Option 4 ID : 264330611815

Status : Not Answered

Chosen Option : --

**Q.19** A spends 20% of the daily income. If the expenditure is ₹250, then the daily income is:

- Ans
- ☒ 1. ₹800
  - ☒ 2. ₹1,250
  - ☒ 3. ₹2,500
  - ☒ 4. ₹1,500

Question ID : 264330154045

Option 1 ID : 264330603646

Option 2 ID : 264330603644

Option 3 ID : 264330603645

Option 4 ID : 264330603643

Status : Answered

Chosen Option : 2

**Q.20** By selling a book at some price, Ankita gains 10%. If the book is sold at twice the price, then what will be the gain percentage for Ankita?

- Ans**
- ☒ 1. 140%
  - ☒ 2. 100%
  - ☒ 3. 120%
  - ☒ 4. 125%

Question ID : 264330155708

Option 1 ID : 264330610238

Option 2 ID : 264330610235

Option 3 ID : 264330610236

Option 4 ID : 264330610237

Status : Answered

Chosen Option : 2

Section : Reasoning Ability and Problem Solving

**Q.1** LCNT is related to NEPV in a certain way based on the English alphabetical order. In the same way, HBER is related to JDGT. To which of the following is OSCF related to, following the same logic?

- Ans**
- ☒ 1. PUDJ
  - ☒ 2. RVEH
  - ☒ 3. QVEI
  - ☒ 4. QUEH

Question ID : 264330151682

Option 1 ID : 264330594357

Option 2 ID : 264330594355

Option 3 ID : 264330594356

Option 4 ID : 264330594358

Status : Answered

Chosen Option : 4

**Q.2** What will come in the place of '?' in the following equation, if '+' and '-' are interchanged and '×' and '÷' are interchanged?  
 $111 \times 3 - 13 \div 3 + 26 = ?$

- Ans**
- ☒ 1. 50
  - ☒ 2. 70
  - ☒ 3. 40
  - ☒ 4. 60

Question ID : 264330155674

Option 1 ID : 264330610101

Option 2 ID : 264330610102

Option 3 ID : 264330610100

Option 4 ID : 264330610099

Status : Answered

Chosen Option : 1



Q.3 What should come in place of '?' in the given series?

24 103 498 2473 12348 ?

- Ans
- ☐ 1. 60983
  - ☐ 2. 63487
  - ☐ 3. 62457
  - ☒ 4. 61723

Question ID : 264330151455

Option 1 ID : 264330593447

Option 2 ID : 264330593450

Option 3 ID : 264330593449

Option 4 ID : 264330593448

Status : Not Answered

Chosen Option : --

Q.4 Select the set in which the numbers are related in the same way as are the numbers of the following sets.

(NOTE : Operations should be performed on the whole numbers, without breaking down the numbers into its constituent digits. E.g. 13 – Operations on 13 such as adding / subtracting / multiplying etc. to 13 can be performed. Breaking down 13 into 1 and 3 and then performing mathematical operations on 1 and 3 is not allowed)

(8, 720, 9)

(16, 800, 5)

- Ans
- ☐ 1. 7, 125, 8
  - ☐ 2. 13, 169, 5
  - ☐ 3. 14, 238, 5
  - ☒ 4. 18, 1260, 7

Question ID : 264330151611

Option 1 ID : 264330594071

Option 2 ID : 264330594072

Option 3 ID : 264330594074

Option 4 ID : 264330594073

Status : Answered

Chosen Option : 4

Q.5 What should come in place of ? in the given series based on the English alphabetical order?

LPA, PSY, TVW, XYU, ?

- Ans
- ☐ 1. CBR
  - ☒ 2. BBS
  - ☐ 3. CDS
  - ☐ 4. DCR

Question ID : 264330155801

Option 1 ID : 264330610608

Option 2 ID : 264330610607

Option 3 ID : 264330610609

Option 4 ID : 264330610610

Status : Answered

Chosen Option : 2

**Q.6** Read the given statement(s) and conclusions carefully. Assuming that the information given in the statements is true, even if it appears to be at variance with commonly known facts, decide which of the given conclusions logically follow(s) from the statement(s).

Statements: All buildings are chalks. No chalk is a toffee.

Conclusions:

(I) No building is a toffee.

(II) All chalks are buildings.

**Ans** ☒ 1. Both conclusions (I) and (II) are follows.

☒ 2. Only conclusion (I) is follows.

☒ 3. Neither conclusion (I) nor (II) is follows.

☒ 4. Only conclusion (II) is follows.

Question ID : 264330154432

Option 1 ID : 264330605194

Option 2 ID : 264330605191

Option 3 ID : 264330605193

Option 4 ID : 264330605192

Status : Answered

Chosen Option : 2

**Q.7** In a certain code language, 'NAME' is coded as '2473' and 'MEND' is coded as '7642'. What is the code for 'D' in the given code language?

**Ans** ☒ 1. 4

☒ 2. 6

☒ 3. 7

☒ 4. 2

Question ID : 264330151707

Option 1 ID : 264330594458

Option 2 ID : 264330594457

Option 3 ID : 264330594456

Option 4 ID : 264330594455

Status : Answered

Chosen Option : 2

**Q.8** If 4 November 2021 is a Thursday, then what will be the day of the week on 13 May 2023?

**Ans** ☒ 1. Monday

☒ 2. Sunday

☒ 3. Friday

☒ 4. Saturday

Question ID : 264330154358

Option 1 ID : 264330604897

Option 2 ID : 264330604898

Option 3 ID : 264330604896

Option 4 ID : 264330604895

Status : Answered

Chosen Option : 4

**Q.9** 8 is related to 40 following a certain logic. Following the same logic, 3 is related to 15. To which of the following is 52 related to, following the same logic?

- Ans**
- ☒ 1. 261
  - ☒ 2. 262
  - ☒ 3. 260
  - ☒ 4. 263

Question ID : 264330151587  
Option 1 ID : 264330593976  
Option 2 ID : 264330593977  
Option 3 ID : 264330593975  
Option 4 ID : 264330593978  
Status : Answered  
Chosen Option : 3

**Q.10** In a certain code language, 'CHORAL' is coded as 'OHCLAR' and 'FOREGO' is coded as 'ROFOGE'. What is the code for 'GALLEY' in the given code language?

- Ans**
- ☒ 1. GYALLE
  - ☒ 2. ELLAGY
  - ☒ 3. LAGYEL
  - ☒ 4. YELLAG

Question ID : 264330155809  
Option 1 ID : 264330610641  
Option 2 ID : 264330610642  
Option 3 ID : 264330610639  
Option 4 ID : 264330610640  
Status : Answered  
Chosen Option : 3

**Q.11** What should come in place of ? in the given series?

64    61    55    46    34    ?

- Ans**
- ☒ 1. 19
  - ☒ 2. 24
  - ☒ 3. 15
  - ☒ 4. 21

Question ID : 264330151722  
Option 1 ID : 264330594517  
Option 2 ID : 264330594516  
Option 3 ID : 264330594518  
Option 4 ID : 264330594515  
Status : Answered  
Chosen Option : 1

**Q.12** If 'I' stands for '+', 'J' stands for '×', 'K' stands for '÷' and 'L' stands for '-', what will come in place of the question mark (?) in the following equation?  
105 L (72 K 9) I 43 L (9 J 4) = ?

- Ans**
- ✓ 1. 104
  - ✗ 2. 114
  - ✗ 3. 106
  - ✗ 4. 126

Question ID : 264330151798

Option 1 ID : 264330594822

Option 2 ID : 264330594820

Option 3 ID : 264330594819

Option 4 ID : 264330594821

Status : Answered

Chosen Option : 1

**Q.13** E, F, G, H, I and J are sitting around a circular table facing the center. J sits immediate left of I. G sits second to the right of I. E sits second to the right of G. H sits second to the left of F. Who sits third to the right of E?

- Ans**
- ✗ 1. F
  - ✓ 2. H
  - ✗ 3. I
  - ✗ 4. J

Question ID : 264330154472

Option 1 ID : 264330605354

Option 2 ID : 264330605351

Option 3 ID : 264330605353

Option 4 ID : 264330605352

Status : Not Answered

Chosen Option : --

**Q.14** What should come in place of '?' in the given series?

77 754 ? 75224 752224 7522224 75222224

- Ans**
- ✗ 1. 7544
  - ✗ 2. 7254
  - ✗ 3. 7425
  - ✓ 4. 7524

Question ID : 264330151443

Option 1 ID : 264330593400

Option 2 ID : 264330593401

Option 3 ID : 264330593402

Option 4 ID : 264330593399

Status : Not Answered

Chosen Option : --

**Q.15** Read the given statements and conclusions carefully. You have to take the given statements to be true even if they seem to be at variance from commonly known facts. You have to decide which conclusion/s logically follow/s from the given statements.

Statements: All cakes are biscuits. Some biscuits are tarts. All tarts are puddings.

Conclusion I: Some biscuits are cakes.

Conclusion II: Some puddings are biscuits.

- Ans**
- ☒ 1. Neither conclusion (I) nor (II) is follow.
  - ☒ 2. Both conclusions (I) and (II) are follow.
  - ☒ 3. Only conclusion (I) is follow.
  - ☒ 4. Only conclusion (II) is follow.

Question ID : 264330155937

Option 1 ID : 264330611153

Option 2 ID : 264330611154

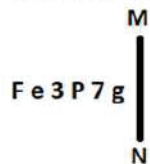
Option 3 ID : 264330611151

Option 4 ID : 264330611152

Status : Answered

Chosen Option : 2

**Q.16** Select the correct mirror image of the given figure when the mirror is placed at MN as shown below.



- Ans**
- ☒ 1. g 7 9 e 3 7
  - ☒ 2. g 7 d e 3 f
  - ☒ 3. g 7 9 e 3 f
  - ☒ 4. g 7 p 7 e 3 f

Question ID : 264330151525

Option 1 ID : 264330593728

Option 2 ID : 264330593730

Option 3 ID : 264330593729

Option 4 ID : 264330593727

Status : Answered

Chosen Option : 3

**Q.17** Which figure should replace the question mark (?) if the following figure series were to be continued?

6	☆	☆	B	U	H	H	B	
U	B	H	□	6	U	☆	B	Z
Z	□	H	Z	6	□	Z	6	?

Ans

✗ 1.

6		Z
☆	H	□
B		U

✓ 2.

☆		Z
H	B	6
U		□

✗ 3.

6		☆
B	H	Z
□		U

✗ 4.

6		Z
☆	B	□
U		H

Question ID : 264330154740

Option 1 ID : 264330606425

Option 2 ID : 264330606424

Option 3 ID : 264330606423

Option 4 ID : 264330606426

Status : Not Answered

Chosen Option : --

**Q.18** What should come in place of ? in the given series based on the English alphabetical order?

UDM, XGP, AJS, DMV, ?

Ans

✓ 1. GPY

✗ 2. FPX

✗ 3. EOX

✗ 4. FOY

Question ID : 264330155764

Option 1 ID : 264330610460

Option 2 ID : 264330610461

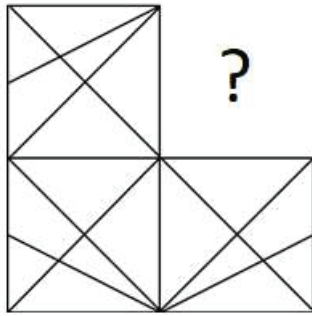
Option 3 ID : 264330610462

Option 4 ID : 264330610459

Status : Answered

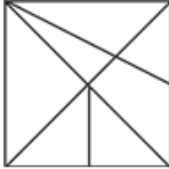
Chosen Option : 1

Q.19 Identify the figure that completes the pattern (rotation is NOT allowed).

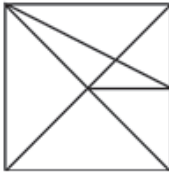


Ans

✗ 1.



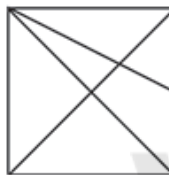
✗ 2.



✗ 3.



✓ 4.



Question ID : 264330154517

Option 1 ID : 264330605532

Option 2 ID : 264330605533

Option 3 ID : 264330605534

Option 4 ID : 264330605531

Status : Answered

Chosen Option : 4

Q.20 What should come in place of ? in the given series based on the English alphabetical order?

TOY, UQB, VSE, WUH, ?

Ans ✗ 1. YVJ

✗ 2. ZWI

✗ 3. YUI

✓ 4. XWK

Question ID : 264330155774

Option 1 ID : 264330610499

Option 2 ID : 264330610502

Option 3 ID : 264330610501

Option 4 ID : 264330610500

Status : Answered

Chosen Option : 4

Q.1 The Guide is a 1958 novel written in English by the Indian author \_\_\_\_\_.

- Ans
- ☒ 1. Mulk Raj Anand
  - ☒ 2. Khushwant Singh
  - ☒ 3. RK Narayan
  - ☒ 4. Nirad Chaudhuri

Question ID : 264330155452

Option 1 ID : 264330609211

Option 2 ID : 264330609212

Option 3 ID : 264330609213

Option 4 ID : 264330609214

Status : Answered

Chosen Option : 1

Q.2 The stretch between Mumbai to Goa of western coast of India is known as \_\_\_\_\_.

- Ans
- ☒ 1. Coromandel coast
  - ☒ 2. Konkan coast
  - ☒ 3. Malabar Coast
  - ☒ 4. Kannada Plain

Question ID : 264330161495

Option 1 ID : 264330633310

Option 2 ID : 264330633309

Option 3 ID : 264330633308

Option 4 ID : 264330633307

Status : Answered

Chosen Option : 2

Q.3 Which of the following autobiographies is NOT correctly matched with the concerned cricketer?

- Ans
- ☒ 1. Playing it My Way – VVS Laxman
  - ☒ 2. The Test of My Life: From Cricket to Cancer and Back – Yuvraj Singh
  - ☒ 3. Straight from the Heart – Kapil Dev
  - ☒ 4. Cricket Delightful – Mushtaq Ali

Question ID : 264330161753

Option 1 ID : 264330634341

Option 2 ID : 264330634342

Option 3 ID : 264330634339

Option 4 ID : 264330634340

Status : Answered

Chosen Option : 1



**Q.4 What does El Niño refer to?**

**Ans** ✓ 1. Hot water current

- ✗ 2. Pressure water current
- ✗ 3. High air pressure
- ✗ 4. Low air pressure

Question ID : 264330161310

Option 1 ID : 264330632567

Option 2 ID : 264330632568

Option 3 ID : 264330632570

Option 4 ID : 264330632569

Status : Answered

Chosen Option : 1

**Q.5 Where was the 13<sup>th</sup> Hockey India senior women's national hockey championship held?**

**Ans** ✓ 1. Andhra Pradesh

- ✗ 2. New Delhi
- ✗ 3. Punjab
- ✗ 4. Karnataka

Question ID : 264330161155

Option 1 ID : 264330631951

Option 2 ID : 264330631953

Option 3 ID : 264330631952

Option 4 ID : 264330631954

Status : Not Answered

Chosen Option : --

**Q.6 Which Article of the Constitution of India provides for a Council of Ministers with the Prime Minister at the head to aid and advice the President in the exercise of the President's functions?**

**Ans** ✗ 1. Article 77

✓ 2. Article 74

✗ 3. Article 71

✗ 4. Article 72

Question ID : 264330161288

Option 1 ID : 264330632482

Option 2 ID : 264330632481

Option 3 ID : 264330632479

Option 4 ID : 264330632480

Status : Answered

Chosen Option : 2

**Q.7 Which of the following is a key objective of Micro Finance Institutions in India?**

**Ans** ✗ 1. Providing loans exclusively to women entrepreneurs

✗ 2. Encouraging large-scale industrialisation

✗ 3. Maximising profits for shareholders

✓ 4. Promoting financial inclusion and poverty alleviation

Question ID : 264330157288

Option 1 ID : 264330616517

Option 2 ID : 264330616518

Option 3 ID : 264330616515

Option 4 ID : 264330616516

Status : Answered

Chosen Option : 4

Q.8 \_\_\_\_\_ is one of the most important festivals of Kamakhya temple of Guwahati. It is held every year during the monsoon (mid-June) season, when the temple is closed for three days for tantric rites.

- Ans ☒ 1. Ambubachi  
☐ 2. Bihu  
☐ 3. Baishagu  
☐ 4. Me-Dum-Me-Phi

Question ID : 264330160821  
Option 1 ID : 264330630617  
Option 2 ID : 264330630615  
Option 3 ID : 264330630616  
Option 4 ID : 264330630618  
Status : Answered  
Chosen Option : 1

Q.9 In which city is the Kamakhya temple situated?

- Ans ☐ 1. Dehradun  
☐ 2. Bhopal  
☒ 3. Guwahati  
☐ 4. Indore

Question ID : 264330160779  
Option 1 ID : 264330630450  
Option 2 ID : 264330630447  
Option 3 ID : 264330630448  
Option 4 ID : 264330630449  
Status : Answered  
Chosen Option : 3

Q.10 Which of the following statements best defines a Micro Finance Institution (MFI)?

- Ans ☐ 1. MFIs are investment firms that cater exclusively to high-net-worth individuals.  
☒ 2. MFIs are non-profit organisations that provide financial services to low-income individuals and small businesses.  
☐ 3. MFIs are banks that provide loans only to large corporations.  
☐ 4. MFIs are government agencies that regulate the microfinance sector.

Question ID : 264330157284  
Option 1 ID : 264330616502  
Option 2 ID : 264330616500  
Option 3 ID : 264330616499  
Option 4 ID : 264330616501  
Status : Answered  
Chosen Option : 4

Q.11 Mumbai Indians defeated which team to win Women's Premier League in March, 2023?

- Ans ☐ 1. UP Warriors  
☐ 2. Royal Challengers  
☒ 3. Delhi Capitals  
☐ 4. Gujarat Giants

Question ID : 264330158352  
Option 1 ID : 264330620770  
Option 2 ID : 264330620768  
Option 3 ID : 264330620769  
Option 4 ID : 264330620767  
Status : Answered  
Chosen Option : 2

**Q.12** The Songi Mukhawate dance of \_\_\_\_\_ celebrates the victory of truth over falsehood. The name of the dance is derived from the two lion masks worn by two dancers who represent Narasimha, an aspect of Lord Vishnu.

- Ans**
- ☒ 1. Madhya Pradesh
  - ☒ 2. Jharkhand
  - ☒ 3. Maharashtra
  - ☒ 4. Gujarat

Question ID : 264330160802

Option 1 ID : 264330630541

Option 2 ID : 264330630542

Option 3 ID : 264330630539

Option 4 ID : 264330630540

Status : Not Answered

Chosen Option : --

**Q.13** Who among the following is best known for creating a fusion style of dance by adapting European theatrical techniques to Indian classical dance?

- Ans**
- ☒ 1. Yamini Krishnamurthy
  - ☒ 2. Uday Shankar
  - ☒ 3. Gopi Krishna
  - ☒ 4. Sonal Mansingh

Question ID : 264330155522

Option 1 ID : 264330609494

Option 2 ID : 264330609492

Option 3 ID : 264330609491

Option 4 ID : 264330609493

Status : Not Answered

Chosen Option : --

**Q.14** Where was the Hindustan Socialist Republican Association founded in 1928?

- Ans**
- ☒ 1. Kanpur
  - ☒ 2. Amritsar
  - ☒ 3. Lucknow
  - ☒ 4. Delhi

Question ID : 264330162324

Option 1 ID : 264330636625

Option 2 ID : 264330636624

Option 3 ID : 264330636623

Option 4 ID : 264330636626

Status : Answered

Chosen Option : 4

Q.15 Which process is sometimes called "reduction division" because it reduces the number of chromosomes to half the normal number to form sperm and eggs?

- Ans ☒ 1. Amitosis  
☒ 2. Meiosis  
☒ 3. Cytokinesis  
☒ 4. Karyokinesis

Question ID : 264330161089

Option 1 ID : 264330631689

Option 2 ID : 264330631690

Option 3 ID : 264330631687

Option 4 ID : 264330631688

Status : Answered

Chosen Option : 2

Q.16 Which chemical element with atomic number 35 has a dark reddish-brown liquid with a burning pungent odour?

- Ans ☒ 1. Tennessine  
☒ 2. Chlorine  
☒ 3. Astatine  
☒ 4. Bromine

Question ID : 264330161061

Option 1 ID : 264330631578

Option 2 ID : 264330631575

Option 3 ID : 264330631577

Option 4 ID : 264330631576

Status : Answered

Chosen Option : 2

Q.17 In which year did Pakistan win the Kabaddi (Circle style) World Cup?

- Ans ☒ 1. 2016  
☒ 2. 2014  
☒ 3. 2020  
☒ 4. 2013

Question ID : 264330158235

Option 1 ID : 264330620301

Option 2 ID : 264330620300

Option 3 ID : 264330620302

Option 4 ID : 264330620299

Status : Not Answered

Chosen Option : --

Q.18 The North-South corridor, which is a part of the Golden Quadrilateral super highways, links which two cities of India from the following?

- Ans ☒ 1. Delhi and Chennai  
☒ 2. Leh and Chennai  
☒ 3. Jammu and Kanyakumari  
☒ 4. Srinagar and Kanyakumari

Question ID : 264330161489

Option 1 ID : 264330633284

Option 2 ID : 264330633283

Option 3 ID : 264330633286

Option 4 ID : 264330633285

Status : Answered

Chosen Option : 1

**Q.19** For which community was a journal Rast Goftar started for the purpose of social-religious reforms?

- Ans**
- ☒ 1. Sikhs
  - ☒ 2. Muslim
  - ☒ 3. Parsis
  - ☒ 4. Hindu

Question ID : 264330160892

Option 1 ID : 264330630900

Option 2 ID : 264330630901

Option 3 ID : 264330630899

Option 4 ID : 264330630902

Status : Answered

Chosen Option : 3

**Q.20** 26 January was selected as the date of the inauguration of the Constitution because on the same date in 1930, the Indian National Congress had revealed

- Ans**
- ☒ 1. Quit India Movement
  - ☒ 2. Purna Swaraj Movement
  - ☒ 3. Namak Satyagraha
  - ☒ 4. Khilafat Movement

Question ID : 264330161346

Option 1 ID : 264330632712

Option 2 ID : 264330632711

Option 3 ID : 264330632713

Option 4 ID : 264330632714

Status : Answered

Chosen Option : 2

**Q.21** What is the name of the scheme launched by Uttar Pradesh government to boost milk production?

- Ans**
- ☒ 1. Nand Baba Milk Mission
  - ☒ 2. Gokul Milk Mission
  - ☒ 3. Krishna Balram Milk Mission
  - ☒ 4. Gwa Ras Mission

Question ID : 264330158329

Option 1 ID : 264330620677

Option 2 ID : 264330620678

Option 3 ID : 264330620675

Option 4 ID : 264330620676

Status : Answered

Chosen Option : 2

**Q.22 What is the source of Directive Principles of State Policy?**

- Ans** ☒ 1. The instrument of instructions from GOI Act 1919
- ☒ 2. The instrument of instructions from GOI Act 1935
- ☒ 3. The instrument of instructions from GOI Act 1909
- ☒ 4. The instrument of instructions from GOI Act 1947

Question ID : 264330161397

Option 1 ID : 264330632916

Option 2 ID : 264330632917

Option 3 ID : 264330632915

Option 4 ID : 264330632918

Status : Answered

Chosen Option : 2

**Q.23 How many classical dance forms does the Sangeet Natak Akademi in India officially recognise, as of August 2021?**

- Ans** ☒ 1. 9
- ☒ 2. 6
- ☒ 3. 7
- ☒ 4. 8

Question ID : 264330160786

Option 1 ID : 264330630478

Option 2 ID : 264330630475

Option 3 ID : 264330630476

Option 4 ID : 264330630477

Status : Answered

Chosen Option : 4

**Q.24 According to the Human Development Report 2021-22, what is the rank of India among 191 countries?**

- Ans** ☒ 1. 117
- ☒ 2. 180
- ☒ 3. 148
- ☒ 4. 132

Question ID : 264330160167

Option 1 ID : 264330628010

Option 2 ID : 264330628007

Option 3 ID : 264330628008

Option 4 ID : 264330628009

Status : Answered

Chosen Option : 4

**Q.25** Which Indian musical legend is credited with composing Talas such as Trimukhi, Panchamukhi, Saptamukhi and Navamukhi?

- Ans ☒ 1. M Balamuralikrishna  
☐ 2. Bade Ghulam Ali Khan  
☐ 3. KJ Yesudas  
☐ 4. Pandit Jasraj

Question ID : 264330155464  
Option 1 ID : 264330609260  
Option 2 ID : 264330609261  
Option 3 ID : 264330609262  
Option 4 ID : 264330609259  
Status : Not Answered  
Chosen Option : --

Section : English Language and Comprehension

**Q.1** Select the most appropriate meaning of the underlined idiom.

The Indian team had its back against the wall, but managed to fight back.

- Ans ☐ 1. In extreme joy or exhilaration  
☒ 2. Stuck in a difficult circumstance with no escape  
☐ 3. Forced to indulge in propaganda  
☐ 4. Throwing the opposition off guard

Question ID : 264330153142  
Option 1 ID : 264330600127  
Option 2 ID : 264330600129  
Option 3 ID : 264330600128  
Option 4 ID : 264330600130  
Status : Answered  
Chosen Option : 2

**Q.2** The following sentence has been split into four segments. Identify the segment that contains a grammatical error.

This is the first time / I ate such / a tasty cake.

- Ans ☒ 1. I ate such  
☐ 2. This is the first time  
☐ 3. No error  
☐ 4. a tasty cake

Question ID : 264330153616  
Option 1 ID : 264330601948  
Option 2 ID : 264330601947  
Option 3 ID : 264330601950  
Option 4 ID : 264330601949  
Status : Answered  
Chosen Option : 3

**Q.3** Select the option that can be used as a one-word substitute for the given group of words.

**A lover of books**

- Ans ☒ 1. Philosopher  
☒ 2. Librarian  
☒ 3. Teacher  
☒ 4. Bibliophile

Question ID : 264330152737

Option 1 ID : 264330598549

Option 2 ID : 264330598548

Option 3 ID : 264330598547

Option 4 ID : 264330598550

Status : Answered

Chosen Option : 4

**Q.4** Select the most appropriate option to fill in the blank.

Tom waited until \_\_\_\_\_ to start working on his term paper but managed to finish it just in time.

- Ans ☒ 1. the twelfth hour  
☒ 2. the thirteenth hour  
☒ 3. the tenth hour  
☒ 4. the eleventh hour

Question ID : 264330151885

Option 1 ID : 264330595161

Option 2 ID : 264330595162

Option 3 ID : 264330595160

Option 4 ID : 264330595159

Status : Answered

Chosen Option : 4

**Q.5** Select the most appropriate synonym of the given word.

**Cordial**

- Ans ☒ 1. Unfriendly  
☒ 2. Friendly  
☒ 3. Brave  
☒ 4. Aromatic

Question ID : 264330151918

Option 1 ID : 264330595287

Option 2 ID : 264330595288

Option 3 ID : 264330595290

Option 4 ID : 264330595289

Status : Answered

Chosen Option : 2



**Q.6** Select the most appropriate meaning of the given idiom.

**Bigger fish to fry**

- Ans ☒ 1. To barely get something done
- ☒ 2. Having something more important to take care of
- ☒ 3. Having work more than one's capacity
- ☒ 4. To be similar to one's parents in some way

Question ID : 264330153013

Option 1 ID : 264330599626

Option 2 ID : 264330599624

Option 3 ID : 264330599623

Option 4 ID : 264330599625

Status : Answered

Chosen Option : 2

**Q.7** There is a spelling error in the given sentence. Select the option that contains the **INCORRECTLY** spelt word.

The hungry goblin scratched the grammar book with a feather.

- Ans ☒ 1. hungry
- ☒ 2. scratched
- ☒ 3. feather
- ☒ 4. grammar

Question ID : 264330152836

Option 1 ID : 264330598935

Option 2 ID : 264330598936

Option 3 ID : 264330598938

Option 4 ID : 264330598937

Status : Answered

Chosen Option : 1

**Q.8** Select the most appropriate option to fill in the blank.  
The rusty door made a \_\_\_\_\_ screeching noise.

- Ans ☒ 1. low
- ☒ 2. soft
- ☒ 3. harsh
- ☒ 4. smooth

Question ID : 264330152638

Option 1 ID : 264330598157

Option 2 ID : 264330598158

Option 3 ID : 264330598156

Option 4 ID : 264330598155

Status : Answered

Chosen Option : 3

**Q.9** Select the most appropriate option to fill in the blank.

The tone of his voice seemed to \_\_\_\_\_ that he knew more than he was letting on.

- Ans
- ☒ 1. incise
  - ☒ 2. intent
  - ☒ 3. inculcate
  - ☒ 4. imply

Question ID : 264330151864  
Option 1 ID : 264330595077  
Option 2 ID : 264330595078  
Option 3 ID : 264330595075  
Option 4 ID : 264330595076  
Status : Not Answered  
Chosen Option : --

**Q.10** Select the most appropriate ANTONYM of the given word.  
Enormous

- Ans
- ☒ 1. Tiny
  - ☒ 2. Inapposite
  - ☒ 3. Irrelevant
  - ☒ 4. Gigantic

Question ID : 264330151876  
Option 1 ID : 264330595124  
Option 2 ID : 264330595126  
Option 3 ID : 264330595125  
Option 4 ID : 264330595123  
Status : Answered  
Chosen Option : 4

**Q.11** There is a spelling error in the given sentence. Select the option that contains the INCORRECTLY spelt word.  
The questionnaire appeared to be misrably designed.

- Ans
- ☒ 1. designed
  - ☒ 2. questionnaire
  - ☒ 3. misrably
  - ☒ 4. appeared

Question ID : 264330152839  
Option 1 ID : 264330598950  
Option 2 ID : 264330598947  
Option 3 ID : 264330598949  
Option 4 ID : 264330598948  
Status : Answered  
Chosen Option : 3

**Q.12** Select the most appropriate option to fill in the blank.  
COVID-19 \_\_\_\_\_ structural weaknesses in health systems worldwide and negatively impacted individuals, societies, and economies.

- Ans ☒ 1. concealed  
☒ 2. laid  
☒ 3. hit  
☒ 4. revealed

Question ID : 264330151903  
Option 1 ID : 264330595227  
Option 2 ID : 264330595228  
Option 3 ID : 264330595229  
Option 4 ID : 264330595230  
Status : Answered  
Chosen Option : 4

**Q.13** Select the most appropriate option that can substitute the underlined segment in the given sentence.

She will handling the baby as tenderly as possible.

- Ans ☒ 1. wills handle  
☒ 2. shall handles  
☒ 3. will handle  
☒ 4. will handled

Question ID : 264330153483  
Option 1 ID : 264330601450  
Option 2 ID : 264330601447  
Option 3 ID : 264330601449  
Option 4 ID : 264330601448  
Status : Answered  
Chosen Option : 3

**Q.14** Parts of the following sentence have been given as options. Select the option that contains an error.

A old woman suddenly laughed, sounding just like an amused hen.

- Ans ☒ 1. like an amused hen  
☒ 2. sounding just  
☒ 3. A old woman  
☒ 4. suddenly laughed

Question ID : 264330153606  
Option 1 ID : 264330601910  
Option 2 ID : 264330601909  
Option 3 ID : 264330601907  
Option 4 ID : 264330601908  
Status : Answered  
Chosen Option : 1

**Q.15** Select the most appropriate **ANTONYM** of the given word.  
**Annoy**

- Ans**   ☒ 1. Gratify  
         ☒ 2. Vex  
         ☒ 3. Irritate  
         ☒ 4. Thrill

Question ID : 264330152593

Option 1 ID : 264330597977

Option 2 ID : 264330597976

Option 3 ID : 264330597975

Option 4 ID : 264330597978

Status : Answered

Chosen Option : 4

**Q.16** Four words of the following sentence have been underlined and given as options.  
Select the option that contains a spelling error.  
All life depends on a healthy planet, but the interwoven systems of atmosphere,  
oceans, watercourses, land, ice cover and biosphere, which form the natural  
environment, are threatned by human activities.

- Ans**   ☒ 1. interwoven  
         ☒ 2. threatned  
         ☒ 3. biosphere  
         ☒ 4. watercourses

Question ID : 264330151928

Option 1 ID : 264330595327

Option 2 ID : 264330595330

Option 3 ID : 264330595329

Option 4 ID : 264330595328

Status : Answered

Chosen Option : 1

**Q.17** Select the most appropriate meaning of the given idiom.  
**A storm in a teacup**

- Ans**   ☒ 1. Much excitement over something trivial  
         ☒ 2. A signal for upcoming storm  
         ☒ 3. Easy money  
         ☒ 4. Suffering in silence

Question ID : 264330156386

Option 1 ID : 264330612945

Option 2 ID : 264330612943

Option 3 ID : 264330612946

Option 4 ID : 264330612944

Status : Answered

Chosen Option : 1

Q.18 Select the most appropriate option to fill in the blank.  
Varun has to \_\_\_\_\_ his studies for the sake of his ill father.

- Ans ☒ 1. sacrifice  
☐ 2. imitate  
☐ 3. reverse  
☐ 4. applaud

Question ID : 264330153551  
Option 1 ID : 264330601703  
Option 2 ID : 264330601705  
Option 3 ID : 264330601704  
Option 4 ID : 264330601706  
Status : Answered  
Chosen Option : 1

Q.19 Parts of the following sentence have been given as options. Select the option that contains an error.  
Vikram is very stronger than I am.

- Ans ☒ 1. very stronger  
☐ 2. I am  
☐ 3. Vikram is  
☐ 4. than

Question ID : 264330152798  
Option 1 ID : 264330598784  
Option 2 ID : 264330598786  
Option 3 ID : 264330598783  
Option 4 ID : 264330598785  
Status : Answered  
Chosen Option : 2

Q.20 Select the most appropriate option that can substitute the underlined segment in the given sentence.

You are always try with jump over the wall.

- Ans ☐ 1. trying in jumping  
☐ 2. try to jump  
☒ 3. trying to jump  
☐ 4. tried with jump

Question ID : 264330153475  
Option 1 ID : 264330601415  
Option 2 ID : 264330601416  
Option 3 ID : 264330601418  
Option 4 ID : 264330601417  
Status : Answered  
Chosen Option : 3

**Comprehension:**

In the following passage, some words have been deleted. Read the passage carefully and select the most appropriate option to fill in the blanks.

Kasturi went to the garden looking for her mother. Her dog Rex was waiting (1)\_\_\_\_ her. Kasturi picked up a stick and threw it. Rex (2)\_\_\_\_\_ the stick and brought it back. Kasturi ran (3)\_\_\_\_ the house. Rex chased her. Kasturi ran through the garden and Rex (4)\_\_\_\_ her. Mother yelled at both of them. She told them to stay (5)\_\_\_\_\_ of the garden and play somewhere else. Kasturi apologised to her mother. She went for a bike ride while Rex ran next to the bike.

**SubQuestion No : 21**

**Q.21** Select the most appropriate option to fill in blank number 1.

- Ans ☒ 1. with  
☒ 2. by  
☒ 3. to  
☒ 4. for

Question ID : 264330152950

Option 1 ID : 264330599375

Option 2 ID : 264330599378

Option 3 ID : 264330599377

Option 4 ID : 264330599376

Status : Answered

Chosen Option : 2

**Comprehension:**

In the following passage, some words have been deleted. Read the passage carefully and select the most appropriate option to fill in the blanks.

Kasturi went to the garden looking for her mother. Her dog Rex was waiting (1)\_\_\_\_ her. Kasturi picked up a stick and threw it. Rex (2)\_\_\_\_\_ the stick and brought it back. Kasturi ran (3)\_\_\_\_ the house. Rex chased her. Kasturi ran through the garden and Rex (4)\_\_\_\_ her. Mother yelled at both of them. She told them to stay (5)\_\_\_\_\_ of the garden and play somewhere else. Kasturi apologised to her mother. She went for a bike ride while Rex ran next to the bike.

**SubQuestion No : 22**

**Q.22** Select the most appropriate option to fill in blank number 2.

- Ans ☒ 1. chases  
☒ 2. throws  
☒ 3. threw  
☒ 4. chased

Question ID : 264330152951

Option 1 ID : 264330599380

Option 2 ID : 264330599382

Option 3 ID : 264330599379

Option 4 ID : 264330599381

Status : Answered

Chosen Option : 1

**Comprehension:**

In the following passage, some words have been deleted. Read the passage carefully and select the most appropriate option to fill in the blanks.

Kasturi went to the garden looking for her mother. Her dog Rex was waiting (1)\_\_\_\_ her. Kasturi picked up a stick and threw it. Rex (2)\_\_\_\_\_ the stick and brought it back. Kasturi ran (3)\_\_\_\_ the house. Rex chased her. Kasturi ran through the garden and Rex (4)\_\_\_\_ her. Mother yelled at both of them. She told them to stay (5)\_\_\_\_\_ of the garden and play somewhere else. Kasturi apologised to her mother. She went for a bike ride while Rex ran next to the bike.

**SubQuestion No : 23**

**Q.23** Select the most appropriate option to fill in blank number 3.

Ans ☒ 1. in

☒ 2. around

☒ 3. round

☒ 4. about

Question ID : 264330152952

Option 1 ID : 264330599386

Option 2 ID : 264330599384

Option 3 ID : 264330599383

Option 4 ID : 264330599385

Status : Answered

Chosen Option : 2

**Comprehension:**

In the following passage, some words have been deleted. Read the passage carefully and select the most appropriate option to fill in the blanks.

Kasturi went to the garden looking for her mother. Her dog Rex was waiting (1)\_\_\_\_ her. Kasturi picked up a stick and threw it. Rex (2)\_\_\_\_\_ the stick and brought it back. Kasturi ran (3)\_\_\_\_ the house. Rex chased her. Kasturi ran through the garden and Rex (4)\_\_\_\_ her. Mother yelled at both of them. She told them to stay (5)\_\_\_\_\_ of the garden and play somewhere else. Kasturi apologised to her mother. She went for a bike ride while Rex ran next to the bike.

**SubQuestion No : 24**

**Q.24** Select the most appropriate option to fill in blank number 4.

Ans ☒ 1. obey

☒ 2. listen

☒ 3. followed

☒ 4. came

Question ID : 264330152953

Option 1 ID : 264330599390

Option 2 ID : 264330599387

Option 3 ID : 264330599388

Option 4 ID : 264330599389

Status : Answered

Chosen Option : 3

**Comprehension:**

In the following passage, some words have been deleted. Read the passage carefully and select the most appropriate option to fill in the blanks.

Kasturi went to the garden looking for her mother. Her dog Rex was waiting (1)\_\_\_\_ her. Kasturi picked up a stick and threw it. Rex (2)\_\_\_\_\_ the stick and brought it back. Kasturi ran (3)\_\_\_\_ the house. Rex chased her. Kasturi ran through the garden and Rex (4)\_\_\_\_ her. Mother yelled at both of them. She told them to stay (5)\_\_\_\_\_ of the garden and play somewhere else. Kasturi apologised to her mother. She went for a bike ride while Rex ran next to the bike.

**SubQuestion No : 25**

**Q.25** Select the most appropriate option to fill in blank number 5.

- Ans ☒ 1. of  
☒ 2. in  
☒ 3. from  
☒ 4. out

Question ID : **264330152954**

Option 1 ID : **264330599394**

Option 2 ID : **264330599392**

Option 3 ID : **264330599393**

Option 4 ID : **264330599391**

Status : **Answered**

Chosen Option : **4**