

Multi Tasking Non Technical Staff and Havaladar CBIC and CBN Examination 2023

Roll Number	
Candidate Name	
Venue Name	iON Digital Zone iDZ Thondamuthur
Exam Date	01/09/2023
Exam Time	9:00 AM - 11:00 AM
Subject	MTS Non Tech Havaladar CBIC and CBN Examination 2023

Section : Numerical and Mathematical Ability

Q.1 If the first number is 20% less than the third number and the ratio of the second to the third number is 7 : 10, then the average of the first and the third number is how much per cent more than the second number?

- Ans**
- ☒ 1. $26\frac{4}{7}$
- ☒ 2. $28\frac{2}{7}$
- ☒ 3. $28\frac{4}{7}$
- ☒ 4. $24\frac{2}{7}$

Question ID : 264330155958

Option 1 ID : 264330611234

Option 2 ID : 264330611232

Option 3 ID : 264330611231

Option 4 ID : 264330611233

Status : Answered

Chosen Option : 3

Q.2 Geeta deposited a certain sum of money in her bank account which amounted to ₹27,783 in 3 years at 5% per annum, the interest being compounded annually. What amount did she deposit?

- Ans**
- ☒ 1. ₹25,500
- ☒ 2. ₹25,000
- ☒ 3. ₹26,000
- ☒ 4. ₹24,000

Question ID : 264330154129

Option 1 ID : 264330603980

Option 2 ID : 264330603981

Option 3 ID : 264330603979

Option 4 ID : 264330603982

Status : Answered

Chosen Option : 4

Q.3 A truck driver drove 60 km/h for three hours. Then he stopped for one hour and did not go anywhere. Then, he drove four more hours at 60 km/h. What was the driver's average speed (in km/h)?

- Ans** ☒ 1. 52.5
☐ 2. 62.4
☐ 3. 50.5
☐ 4. 42.8

Question ID : 264330156099

Option 1 ID : 264330611796

Option 2 ID : 264330611798

Option 3 ID : 264330611795

Option 4 ID : 264330611797

Status : Answered

Chosen Option : 1

Q.4 The following table indicates the number of candidates who appeared in an entrance examination from four different cities A, B, C, D and the ratio of passing and failing. Study the table carefully and answer the question.

City	No. of candidates appeared	Ratio of passing and failing
A	660	5 : 6
B	650	2 : 3
C	500	3 : 2
D	630	4 : 5

Which city has the highest number of candidates who failed in the entrance examination and find its rate of per cent in that city, respectively?

- Ans** ☐ 1. A, 50%
☒ 2. B, 60%
☐ 3. D, 60%
☐ 4. C, 50%

Question ID : 264330156014

Option 1 ID : 264330611456

Option 2 ID : 264330611457

Option 3 ID : 264330611455

Option 4 ID : 264330611458

Status : Answered

Chosen Option : 2

Q.5 Disha invested an amount of ₹20,000 for 9 years at a simple interest per annum and obtain the total amount of ₹33,500. What is the rate of interest?

- Ans** ☐ 1. 8%
☐ 2. 8.5%
☒ 3. 7.5%
☐ 4. 9%

Question ID : 264330156188

Option 1 ID : 264330612154

Option 2 ID : 264330612153

Option 3 ID : 264330612152

Option 4 ID : 264330612151

Status : Answered

Chosen Option : 3

Q.6 Simplify:

$$(13 \div 13 \text{ of } 13 + 13)/(13 \div 13 \times 13 + 13)$$

Ans

☐ 1. $\frac{1}{26}$

☐ 2. $\frac{15}{26}$

☐ 3. $\frac{13}{96}$

☒ 4. $\frac{85}{169}$

Question ID : 264330156088

Option 1 ID : 264330611751

Option 2 ID : 264330611752

Option 3 ID : 264330611754

Option 4 ID : 264330611753

Status : Answered

Chosen Option : 4

Q.7 The cost price of an item is ₹4,350. What is the profit percentage (rounded off to 1 decimal place) if it is sold at ₹5,680?

Ans

☐ 1. 28.5%

☐ 2. 40.7%

☐ 3. 36.8%

☒ 4. 30.6%

Question ID : 264330156475

Option 1 ID : 264330613290

Option 2 ID : 264330613287

Option 3 ID : 264330613288

Option 4 ID : 264330613289

Status : Answered

Chosen Option : 4

Q.8 In a class of 37 students, there are 22 girls. The average weight of these girls is 46 kg and the average weight of the whole class is 50 kg. What is the average weight (in kg) of the boys in that class? (Rounded off to 2 decimal places)

Ans

☐ 1. 60.74

☒ 2. 55.87

☐ 3. 61.35

☐ 4. 58.25

Question ID : 264330155728

Option 1 ID : 264330610317

Option 2 ID : 264330610315

Option 3 ID : 264330610318

Option 4 ID : 264330610316

Status : Answered

Chosen Option : 2

Q.9 A boat takes 20 hours for travelling downstream from point A to point B and comes back to a midpoint C between A and B. The speed of the stream is 5 km/h and the speed of the boat in still water is 10 km/h. Find the distance between A and B (in km).

- Ans
- ☒ 1. 100
 - ☒ 2. 120
 - ☒ 3. 150
 - ☒ 4. 75

Question ID : 264330153854

Option 1 ID : 264330602880

Option 2 ID : 264330602879

Option 3 ID : 264330602881

Option 4 ID : 264330602882

Status : Answered

Chosen Option : 2

Q.10 Raju sold an article to Ravi at 10% gain. Ravi sold the article to Ramu at a loss of 10%. If Ramu paid ₹1,485 to Ravi, find the selling price of Raju to Ravi.

- Ans
- ☒ 1. ₹1,200
 - ☒ 2. ₹1,500
 - ☒ 3. ₹1,650
 - ☒ 4. ₹1,600

Question ID : 264330153840

Option 1 ID : 264330602825

Option 2 ID : 264330602823

Option 3 ID : 264330602826

Option 4 ID : 264330602824

Status : Answered

Chosen Option : 3

Q.11 A and B can do a piece of work in 4 days, B and C can do the same work in 5 days, A and C can do it in 10 days. If A, B, C work together, in how many days can they complete the work?

- Ans
- ☒ 1. $3\frac{11}{7}$
 - ☒ 2. $11\frac{3}{7}$
 - ☒ 3. $3\frac{7}{11}$
 - ☒ 4. $11\frac{7}{3}$

Question ID : 264330156009

Option 1 ID : 264330611437

Option 2 ID : 264330611436

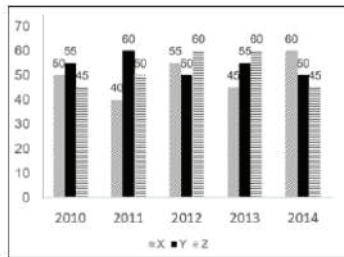
Option 3 ID : 264330611438

Option 4 ID : 264330611435

Status : Answered

Chosen Option : 3

- Q.12** The graph shows the production of tyres (in Lakhs) by three different companies X, Y, and Z over the years.
Directions: Study the following graph carefully to answer the question given below it.



What is the difference between the average production per year of the company with the highest average production and that of the company with the lowest average production in Lakhs?

- Ans**
- ☒ 1. 2
 - ☒ 2. 6
 - ☒ 3. 8
 - ☒ 4. 4

Question ID : 264330153891

Option 1 ID : 264330603027

Option 2 ID : 264330603029

Option 3 ID : 264330603030

Option 4 ID : 264330603028

Status : Answered

Chosen Option : 4

- Q.13** What is the mean proportional of 9.61 and 3.61?

- Ans**
- ☒ 1. 3.17
 - ☒ 2. 5.89
 - ☒ 3. 4.87
 - ☒ 4. 6.78

Question ID : 264330154085

Option 1 ID : 264330603803

Option 2 ID : 264330603805

Option 3 ID : 264330603804

Option 4 ID : 264330603806

Status : Answered

Chosen Option : 2

- Q.14** Two numbers A and B are such that the sum of 6% of A and 4% of B is two-fifth of the sum of 7% of A and 11% of B, then the ratio A : B is:

- Ans**
- ☒ 1. 3 : 7
 - ☒ 2. 5 : 8
 - ☒ 3. 1 : 8
 - ☒ 4. 1 : 7

Question ID : 264330154088

Option 1 ID : 264330603816

Option 2 ID : 264330603818

Option 3 ID : 264330603817

Option 4 ID : 264330603815

Status : Answered

Chosen Option : 3

Q.15 Two trains of length 110 m and 85 m are moving in the same direction at 12 m/s and 7 m/s, respectively. Find the time (in seconds) taken by the faster train to cross the slower train.

- Ans** ☒ 1. 39
☐ 2. 35
☐ 3. 19
☐ 4. 29

Question ID : 264330155753

Option 1 ID : 264330610418

Option 2 ID : 264330610417

Option 3 ID : 264330610415

Option 4 ID : 264330610416

Status : Answered

Chosen Option : 1

Q.16 In what ratio must a grocer mix two varieties of rice costing ₹128 and ₹143 per kg, respectively, to get a mixture of rice worth ₹137.75 per kg?

- Ans** ☐ 1. 12:5
☒ 2. 7:13
☐ 3. 5:4
☐ 4. 6:7

Question ID : 264330153759

Option 1 ID : 264330602499

Option 2 ID : 264330602500

Option 3 ID : 264330602501

Option 4 ID : 264330602502

Status : Answered

Chosen Option : 2

Q.17 Two persons take steps of 77 cm and 88 cm, respectively. If they start in step, then what is the minimum distance (in cm) they should cover so that both of them can cover the distance in complete steps?

- Ans** ☐ 1. 968
☐ 2. 828
☒ 3. 616
☐ 4. 560

Question ID : 264330156295

Option 1 ID : 264330612581

Option 2 ID : 264330612580

Option 3 ID : 264330612582

Option 4 ID : 264330612579

Status : Answered

Chosen Option : 3

Q.18 The surface area of a sphere is 616 cm^2 , find its diameter.

Take $\pi = \frac{22}{7}$

- Ans ☒ 1. 14 cm
☐ 2. 2 cm
☐ 3. 4 cm
☐ 4. 3 cm

Question ID : 264330156369

Option 1 ID : 264330612875

Option 2 ID : 264330612876

Option 3 ID : 264330612878

Option 4 ID : 264330612877

Status : Answered

Chosen Option : 1

Q.19 The diameter of a metallic sphere is 6 cm. It is melted and drawn into a wire having a diameter of the cross section as 0.4 cm. Find the length of the wire (in metres).

- Ans ☐ 1. 18
☒ 2. 9
☐ 3. 12
☐ 4. 10

Question ID : 264330153866

Option 1 ID : 264330602930

Option 2 ID : 264330602929

Option 3 ID : 264330602928

Option 4 ID : 264330602927

Status : Answered

Chosen Option : 2

Q.20 A, B and C can do a piece of work in 10, 15, 12 days, respectively. A and B worked alternately for 5 days each and left. Then C joined and completed the work. In how many days did C complete the remaining work?

- Ans ☐ 1. 3
☐ 2. 1
☐ 3. 4
☒ 4. 2

Question ID : 264330153856

Option 1 ID : 264330602888

Option 2 ID : 264330602890

Option 3 ID : 264330602887

Option 4 ID : 264330602889

Status : Answered

Chosen Option : 4

Q.1 287 is related to 398 following a certain logic. Following the same logic, 378 is related to 489. To which of the following is 852 related to, following the same logic?

- Ans**
- ☒ 1. 643
 - ☒ 2. 963
 - ☒ 3. 346
 - ☒ 4. 543

Question ID : 264330151602

Option 1 ID : 264330594036

Option 2 ID : 264330594035

Option 3 ID : 264330594038

Option 4 ID : 264330594037

Status : Answered

Chosen Option : 2

Q.2 If 'A' stands for '+', 'B' stands for '×', 'C' stands for '÷' and 'D' stands for '-', what will come in place of the question mark (?) in the following equation?
(87 A 29) B 14 D 24 C 14 C 6 B 5 = ?

- Ans**
- ☒ 1. 68
 - ☒ 2. 74
 - ☒ 3. 62
 - ☒ 4. 56

Question ID : 264330151805

Option 1 ID : 264330594848

Option 2 ID : 264330594850

Option 3 ID : 264330594849

Option 4 ID : 264330594847

Status : Answered

Chosen Option : 3

Q.3 What should come in place of '?' in the given series?

9 15 33 87 ? 735 2193

- Ans**
- ☒ 1. 241
 - ☒ 2. 249
 - ☒ 3. 237
 - ☒ 4. 225

Question ID : 264330151483

Option 1 ID : 264330593561

Option 2 ID : 264330593562

Option 3 ID : 264330593560

Option 4 ID : 264330593559

Status : Answered

Chosen Option : 2

Q.4 What should come in place of ? in the given series based on the English alphabetical order?

CNT, FQU, ITV, LWW, ?

- Ans**
- ✓ 1. OZX
 - ✗ 2. NYY
 - ✗ 3. MXZ
 - ✗ 4. LYX

Question ID : 264330155786

Option 1 ID : 264330610550

Option 2 ID : 264330610549

Option 3 ID : 264330610548

Option 4 ID : 264330610547

Status : Answered

Chosen Option : 1

Q.5 38 is related to 49 following a certain logic. Following the same logic, 64 is related to 75. To which of the following is 83 related to, following the same logic?

- Ans**
- ✗ 1. 93
 - ✗ 2. 95
 - ✗ 3. 92
 - ✓ 4. 94

Question ID : 264330151593

Option 1 ID : 264330594000

Option 2 ID : 264330594002

Option 3 ID : 264330593999

Option 4 ID : 264330594001

Status : Answered

Chosen Option : 4

Q.6 What should come in place of '?' in the given series?

3 9 45 261 1557 ?

- Ans**
- ✗ 1. 9555
 - ✗ 2. 8572
 - ✗ 3. 9433
 - ✓ 4. 9333

Question ID : 264330151451

Option 1 ID : 264330593434

Option 2 ID : 264330593431

Option 3 ID : 264330593433

Option 4 ID : 264330593432

Status : Answered

Chosen Option : 4

Q.7 What will come in the place of '?' in the following equation, if '+' and '-' are interchanged and '×' and '÷' are interchanged?

$$32 - 512 \times 64 \div 8 + 64 = ?$$

- Ans
- ☒ 1. 42
 - ☒ 2. 22
 - ☒ 3. 32
 - ☒ 4. 52

Question ID : 264330155677

Option 1 ID : 264330610113

Option 2 ID : 264330610111

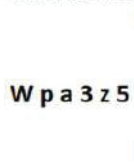
Option 3 ID : 264330610112

Option 4 ID : 264330610114

Status : Answered

Chosen Option : 3

Q.8 Select the correct mirror image of the given figure when the mirror is placed at MN as shown below.



- Ans
- ☒ 1. 5z3 ap W
 - ☒ 2. z5E ap M
 - ☒ 3. 2z3 eb M
 - ☒ 4. 2zE ap W

Question ID : 264330151510

Option 1 ID : 264330593667

Option 2 ID : 264330593670

Option 3 ID : 264330593668

Option 4 ID : 264330593669

Status : Answered

Chosen Option : 4

Q.9 What should come in place of '?' in the given series?

16 65 261 1045 4181 ?

- Ans
- ☒ 1. 16945
 - ☒ 2. 16273
 - ☒ 3. 16725
 - ☒ 4. 16892

Question ID : 264330151475

Option 1 ID : 264330593530

Option 2 ID : 264330593527

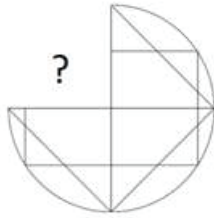
Option 3 ID : 264330593528

Option 4 ID : 264330593529

Status : Answered

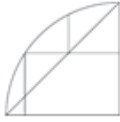
Chosen Option : 3

Q.10 Identify the figure that completes the pattern (rotation is NOT allowed).



Ans

✗ 1.



✗ 2.



✗ 3.



✓ 4.



Question ID : 264330154514

Option 1 ID : 264330605521

Option 2 ID : 264330605520

Option 3 ID : 264330605519

Option 4 ID : 264330605522

Status : Answered

Chosen Option : 4

Q.11 Select the word-pair that best represents a similar relationship to the one expressed in the pair of words given below.

(The words must be considered as meaningful English words and must not be related to each other based on the number of letters/number of consonants/vowels in the word)

Reflection : Light

Ans

✗ 1. Sentiment : Feeling

✓ 2. Echo : Sound

✗ 3. Iris : Sight

✗ 4. Movie : Scene

Question ID : 264330154638

Option 1 ID : 264330606017

Option 2 ID : 264330606016

Option 3 ID : 264330606018

Option 4 ID : 264330606015

Status : Answered

Chosen Option : 2

Q.12 Read the given statements and conclusions carefully. You have to take the given statements to be true even if they seem to be at variance from commonly known facts. You have to decide which conclusion/s logically follow/s from the given statements.

Statements: All rags are carpets. Some carpets are steel. Some steel are bottles.

Conclusion I: All carpets are rags.

Conclusion II: Some carpets are bottles.

- Ans**
- ☒ 1. Only conclusion (I) is follow.
 - ☒ 2. Both conclusions (I) and (II) are follow.
 - ☒ 3. Only conclusion (II) is follow.
 - ☒ 4. Neither conclusion (I) nor (II) is follow.

Question ID : 264330155925

Option 1 ID : 264330611103

Option 2 ID : 264330611106

Option 3 ID : 264330611104

Option 4 ID : 264330611105

Status : Answered

Chosen Option : 4

Q.13 Find out the correct alternative that when filled in the blanks in the same sequence will make the series logically complete.

X _AL ZH _L _KAL DNA _ _QAL

- Ans**
- ☒ 1. FBPSB
 - ☒ 2. FABLE
 - ☒ 3. EABLF
 - ☒ 4. EBFLA

Question ID : 264330154726

Option 1 ID : 264330606370

Option 2 ID : 264330606368

Option 3 ID : 264330606369

Option 4 ID : 264330606367

Status : Answered

Chosen Option : 3

Q.14 The position of how many letters will remain unchanged if each of the letter in the word 'FINGER' is arranged in alphabetical order?

- Ans**
- ☒ 1. Two
 - ☒ 2. One
 - ☒ 3. Three
 - ☒ 4. Four

Question ID : 264330154326

Option 1 ID : 264330604769

Option 2 ID : 264330604770

Option 3 ID : 264330604768

Option 4 ID : 264330604767

Status : Answered

Chosen Option : 2

Q.15 In a certain code language, 'BLUE' is coded as '1542' and 'ABLE' is coded as '1745'. What is the code for 'A' in the given code language?

- Ans** ☒ 1. 7
☐ 2. 1
☐ 3. 4
☐ 4. 5

Question ID : 264330151690

Option 1 ID : 264330594390

Option 2 ID : 264330594387

Option 3 ID : 264330594389

Option 4 ID : 264330594388

Status : Answered

Chosen Option : 1

Q.16 Read the given statement(s) and conclusions carefully. Assuming that the information given in the statements is true, even if it appears to be at variance with commonly known facts, decide which of the given conclusions logically follow(s) from the statement(s).

Statements: All chocolates are sweets. Some sweets are harmful.

Conclusions:

(I) All Chocolates are harmful.

(II) Some harmful are chocolates.

- Ans** ☒ 1. Neither conclusion (I) nor (II) is follows.
☐ 2. Both conclusions (I) and (II) are follows.
☐ 3. Only conclusion (II) is follows.
☐ 4. Only conclusion (I) is follows.

Question ID : 264330154433

Option 1 ID : 264330605197

Option 2 ID : 264330605198

Option 3 ID : 264330605196

Option 4 ID : 264330605195

Status : Answered

Chosen Option : 1

Q.17 Which figure should replace the question mark (?) if the following figure series were to be continued?

K	3	3	D	D	U	U	T	
L	O	U	D	K	T	O	L	O
T		U		3		K		?

Ans

✗ 1.

K		U		
3	D	O	L	
		T		

✗ 2.

K		U		
O	L	D	3	
		T		

✗ 3.

T		K		
O	L	D	3	
		U		

✓ 4.

T		K		
L	O	D	3	
		U		

Question ID : 264330154764

Option 1 ID : 264330606521

Option 2 ID : 264330606522

Option 3 ID : 264330606519

Option 4 ID : 264330606520

Status : Not Attempted and Marked For Review

Chosen Option : --

Q.18 In a certain code language, 'ENVY' is coded as 'FMWX' and 'ALAS' is coded as 'BKBR'. What is the code for 'BODY' in the given code language?

Ans

✗ 1. DNEY

✗ 2. DNEX

✗ 3. CPEY

✓ 4. CNEX

Question ID : 264330155810

Option 1 ID : 264330610643

Option 2 ID : 264330610646

Option 3 ID : 264330610644

Option 4 ID : 264330610645

Status : Answered

Chosen Option : 4

Q.19 Six people, P, Q, R, S, T and U are sitting in a straight line, facing north. U sits fourth to the right of R. R is not sitting at the extreme end of the line. T is the immediate neighbour of U and S. Q sits third to the left of S.

Who is sitting immediately to the right of R?

- Ans**
- ☒ 1. S
 - ☒ 2. T
 - ☒ 3. Q
 - ☒ 4. P

Question ID : 264330155549

Option 1 ID : 264330609601

Option 2 ID : 264330609602

Option 3 ID : 264330609599

Option 4 ID : 264330609600

Status : Answered

Chosen Option : 4

Q.20 Select the combination of letters that when sequentially placed in the blanks of the given series, will complete the series.

P _ _ PO _ P _ P _ OP

- Ans**
- ☒ 1. POPPO
 - ☒ 2. POOOP
 - ☒ 3. OOOPP
 - ☒ 4. OPPOP

Question ID : 264330151650

Option 1 ID : 264330594227

Option 2 ID : 264330594229

Option 3 ID : 264330594230

Option 4 ID : 264330594228

Status : Answered

Chosen Option : 4

Section : General Awareness

Q.1 FIFA U-17 Women's World Cup 2022 matches were NOT held in which state?

- Ans**
- ☒ 1. Maharashtra
 - ☒ 2. Odisha
 - ☒ 3. Goa
 - ☒ 4. Gujarat

Question ID : 264330158223

Option 1 ID : 264330620251

Option 2 ID : 264330620254

Option 3 ID : 264330620252

Option 4 ID : 264330620253

Status : Not Answered

Chosen Option : --

Q.2 Who among the following is one of the co-authors of the book, 'Cracking The Code:My Journey in Bollywood'?

- Ans** ☒ 1. Harshvardhan Kapoor
☒ 2. Nawazuddin Siddique
☒ 3. Ayushmann Khurrana
☒ 4. Rajkumar Rao

Question ID : 264330161906

Option 1 ID : 264330634954

Option 2 ID : 264330634951

Option 3 ID : 264330634953

Option 4 ID : 264330634952

Status : Not Answered

Chosen Option : --

Q.3 In 1873, who published the first photograph of nerve tissue stained with the black reaction technique, describing a whole nerve cell?

- Ans** ☒ 1. Gunter Blobel
☒ 2. Camillo Golgi
☒ 3. William Harvey
☒ 4. Paul Ehrlich

Question ID : 264330161088

Option 1 ID : 264330631686

Option 2 ID : 264330631685

Option 3 ID : 264330631683

Option 4 ID : 264330631684

Status : Not Answered

Chosen Option : --

Q.4 In October 2022, Virat Kohli became the first Indian to complete how many runs in T20 cricket history?

- Ans** ☒ 1. 11000
☒ 2. 9000
☒ 3. 5000
☒ 4. 15000

Question ID : 264330158362

Option 1 ID : 264330620809

Option 2 ID : 264330620808

Option 3 ID : 264330620807

Option 4 ID : 264330620810

Status : Not Answered

Chosen Option : --

Q.5 According to Sikh literature, the birth anniversary of Guru Nanak Dev is celebrated on the full moon day of the Indian lunar month _____.

- Ans ☒ 1. Magh
☒ 2. Paush
☒ 3. Ashada
☒ 4. Kartik

Question ID : 264330160833
Option 1 ID : 264330630666
Option 2 ID : 264330630664
Option 3 ID : 264330630663
Option 4 ID : 264330630665
Status : Not Answered
Chosen Option : --

Q.6 Yakshagana is a folk dance that belongs to the state of _____.

- Ans ☒ 1. Kerala
☒ 2. Karnataka
☒ 3. Haryana
☒ 4. Rajasthan

Question ID : 264330159057
Option 1 ID : 264330623587
Option 2 ID : 264330623588
Option 3 ID : 264330623589
Option 4 ID : 264330623590
Status : Answered
Chosen Option : 2

Q.7 The brick temple of Bhitargaon is situated in which state?

- Ans ☒ 1. Odisha
☒ 2. Jharkhand
☒ 3. Uttar Pradesh
☒ 4. Madhya Pradesh

Question ID : 264330160781
Option 1 ID : 264330630456
Option 2 ID : 264330630455
Option 3 ID : 264330630458
Option 4 ID : 264330630457
Status : Not Answered
Chosen Option : --

Q.8 Which of the following movements was founded in Bengal?

- Ans ☒ 1. Ramakrishna Mission
☒ 2. Arya Samaj
☒ 3. Satyashodhak Samaj
☒ 4. Prarthana Samaj

Question ID : 264330160891
Option 1 ID : 264330630896
Option 2 ID : 264330630895
Option 3 ID : 264330630898
Option 4 ID : 264330630897
Status : Answered
Chosen Option : 1

Q.9 On 15 August 1947, the first prime minister of India, Jawaharlal Nehru, raised the Indian National Flag above the _____ of Red Fort in Delhi.

- Ans**
- ☒ 1. Delhi Gate
 - ☒ 2. Kashmiri Gate
 - ☒ 3. Ajmeri Gate
 - ☒ 4. Lahori Gate

Question ID : 264330161347

Option 1 ID : 264330632717

Option 2 ID : 264330632715

Option 3 ID : 264330632718

Option 4 ID : 264330632716

Status : Answered

Chosen Option : 1

Q.10 'Mandarin' is the official language of which neighbouring country of India?

- Ans**
- ☒ 1. Afghanistan
 - ☒ 2. Bhutan
 - ☒ 3. Sri Lanka
 - ☒ 4. China

Question ID : 264330161563

Option 1 ID : 264330633579

Option 2 ID : 264330633581

Option 3 ID : 264330633580

Option 4 ID : 264330633582

Status : Answered

Chosen Option : 4

Q.11 Which of the following is used to measure the total output of goods and services in an economy including depreciation during a specific period within country?

- Ans**
- ☒ 1. Net Domestic Product (NDP)
 - ☒ 2. Gross National Product (GNP)
 - ☒ 3. Net National Product (NNP)
 - ☒ 4. Gross Domestic Product (GDP)

Question ID : 264330157311

Option 1 ID : 264330616610

Option 2 ID : 264330616608

Option 3 ID : 264330616609

Option 4 ID : 264330616607

Status : Answered

Chosen Option : 1

Q.12 Which of the following is NOT related to the sport of swimming?

- Ans**
- ☒ 1. Breaststroke
 - ☒ 2. Back stroke
 - ☒ 3. Freestyle
 - ☒ 4. Penalty Corner

Question ID : 264330158244

Option 1 ID : 264330620337

Option 2 ID : 264330620336

Option 3 ID : 264330620335

Option 4 ID : 264330620338

Status : Answered

Chosen Option : 4

Q.13 The East-West corridor, which is a part of the Golden Quadrilateral super highways, links which two cities of India from the following?

- Ans**
- ☒ 1. Ahmadnagar and Imphal
 - ☒ 2. Silchar and Porbander
 - ☒ 3. Jaipur and Gangtok
 - ☒ 4. Gandhi Nagar and Silchar

Question ID : 264330161490

Option 1 ID : 264330633290

Option 2 ID : 264330633289

Option 3 ID : 264330633288

Option 4 ID : 264330633287

Status : Answered

Chosen Option : 2

Q.14 What is the name of the seventh most abundant metal in the earth's crust, which is derived from the medieval Latin word 'Kalium'?

- Ans**
- ☒ 1. Aluminium
 - ☒ 2. Magnesium
 - ☒ 3. Calcium
 - ☒ 4. Potassium

Question ID : 264330161060

Option 1 ID : 264330631574

Option 2 ID : 264330631571

Option 3 ID : 264330631573

Option 4 ID : 264330631572

Status : Answered

Chosen Option : 4

Q.15 What is the aim of Article 44 of the Indian Constitution?

- Ans**
- ☒ 1. To protect every monument or place of artistic or historic interest
 - ☒ 2. To separate judiciary from the executive in the public services of the State
 - ☒ 3. To protect and improve the environment and safeguard the forests and wildlife of the country
 - ☒ 4. To secure for the citizen, a uniform civil code through the territory of India

Question ID : 264330162253

Option 1 ID : 264330636341

Option 2 ID : 264330636342

Option 3 ID : 264330636340

Option 4 ID : 264330636339

Status : Answered

Chosen Option : 4

Q.16 Which of the following novels of Kamleshwar was awarded the Sahitya Akademi Award in 2003?

- Ans
- ☒ 1. Jalti Hui Nadi
 - ☒ 2. Kaali Aandhi
 - ☒ 3. Kitne Pakistan
 - ☒ 4. Ek Sadak Sattavan Galiyan

Question ID : 264330161762

Option 1 ID : 264330634377

Option 2 ID : 264330634378

Option 3 ID : 264330634376

Option 4 ID : 264330634375

Status : Not Answered

Chosen Option : --

Q.17 Which of the following institutes was founded by MG Ranade and GV Joshi?

- Ans
- ☒ 1. Abhinav Bharat
 - ☒ 2. The Indian National Congress
 - ☒ 3. The Bombay Presidency Association
 - ☒ 4. Poona Sarvajanik Sabha

Question ID : 264330160883

Option 1 ID : 264330630866

Option 2 ID : 264330630865

Option 3 ID : 264330630863

Option 4 ID : 264330630864

Status : Answered

Chosen Option : 1

Q.18 Roshan Kumari, Shovana Narayan, Maya Rao and Kumudini Lakhia are eminent _____ artists.

- Ans
- ☒ 1. Odissi
 - ☒ 2. Kuchipudi
 - ☒ 3. Kathak
 - ☒ 4. Manipuri

Question ID : 264330160812

Option 1 ID : 264330630580

Option 2 ID : 264330630581

Option 3 ID : 264330630579

Option 4 ID : 264330630582

Status : Answered

Chosen Option : 3

Q.19 Rani Machaiah is a _____ folk dancer who was awarded Padma Shri in 2023.

- Ans
- ☒ 1. Ummathat
 - ☒ 2. Lambadi
 - ☒ 3. Gussadi
 - ☒ 4. Dhimsa

Question ID : 264330155487

Option 1 ID : 264330609352

Option 2 ID : 264330609354

Option 3 ID : 264330609351

Option 4 ID : 264330609353

Status : Not Answered

Chosen Option : --

Q.20 What is the difference between a debit card and a credit card?

- Ans** ☒ 1. Debit cards are used for online transactions, while credit cards are used for in-person purchases.
- ☒ 2. Credit cards require a PIN, while debit cards require a signature.
- ☒ 3. Debit cards withdraw money directly from a bank account, while credit cards allow borrowing up to a certain limit.
- ☒ 4. Debit cards have higher interest rates than credit cards.

Question ID : 264330157309

Option 1 ID : 264330616599

Option 2 ID : 264330616602

Option 3 ID : 264330616600

Option 4 ID : 264330616601

Status : Answered

Chosen Option : 3

Q.21 The Constitution (Scheduled Tribes) Order (Second Amendment) Bill, 2022 has included Narikoravan and Kurivikkaran communities in the list of Scheduled Tribes of which state?

- Ans** ☒ 1. Bihar
- ☒ 2. Tamil Nadu
- ☒ 3. Chhattisgarh
- ☒ 4. Odisha

Question ID : 264330158333

Option 1 ID : 264330620691

Option 2 ID : 264330620694

Option 3 ID : 264330620693

Option 4 ID : 264330620692

Status : Answered

Chosen Option : 2

Q.22 Which group of musicians were awarded by 'Bharat Ratna' from the following? (As of May 2023.)

- Ans** ☒ 1. Anu Malik and Udit Narayan
- ☒ 2. Pandit Ravi Shankar and Pandit Bhimsen Joshi
- ☒ 3. Asha Bhosle and Kishore Kumar
- ☒ 4. AR Rahman and Hariprasad Chaurasia

Question ID : 264330155511

Option 1 ID : 264330609449

Option 2 ID : 264330609447

Option 3 ID : 264330609450

Option 4 ID : 264330609448

Status : Answered

Chosen Option : 2

Q.23 Which river is also known as Tsangpo?

- Ans**
- ☒ 1. Ganga river
 - ☒ 2. Gandak river
 - ☒ 3. Kaveri river
 - ☒ 4. Brahmaputra river

Question ID : 264330160151

Option 1 ID : 264330627943

Option 2 ID : 264330627946

Option 3 ID : 264330627945

Option 4 ID : 264330627944

Status : Answered

Chosen Option : 4

Q.24 What is the destination of the water drained off by the Nile river?

- Ans**
- ☒ 1. Lake Victoria
 - ☒ 2. Indian Ocean
 - ☒ 3. Mediterranean Sea
 - ☒ 4. Lake Tanganyika

Question ID : 264330161329

Option 1 ID : 264330632646

Option 2 ID : 264330632643

Option 3 ID : 264330632644

Option 4 ID : 264330632645

Status : Answered

Chosen Option : 3

Q.25 Article 149 of the Constitution deals with _____.

- Ans**
- ☒ 1. the qualifications required for the appointment of the Comptroller and Auditor-General of India
 - ☒ 2. the duties and powers of the Comptroller and Auditor-General of India
 - ☒ 3. the term of office of the Comptroller and Auditor-General of India
 - ☒ 4. the appointment of the Comptroller and Auditor-General of India

Question ID : 264330161287

Option 1 ID : 264330632477

Option 2 ID : 264330632475

Option 3 ID : 264330632478

Option 4 ID : 264330632476

Status : Answered

Chosen Option : 4

Q.1 Select the most appropriate **ANTONYM** of the given word.
Feud

- Ans**
- ☒ 1. Gross
 - ☒ 2. Peril
 - ☒ 3. Harmony
 - ☒ 4. Vigour

Question ID : 264330152677

Option 1 ID : 264330598312

Option 2 ID : 264330598314

Option 3 ID : 264330598313

Option 4 ID : 264330598311

Status : **Answered**

Chosen Option : 4

Q.2 Parts of the following sentence have been given as options. Select the option that contains an error.

All these things happen/ because she do not / pay heed to my words.

- Ans**
- ☒ 1. pay heed to my words
 - ☒ 2. All these things happen
 - ☒ 3. No error
 - ☒ 4. because she do not

Question ID : 264330155379

Option 1 ID : 264330608933

Option 2 ID : 264330608931

Option 3 ID : 264330608934

Option 4 ID : 264330608932

Status : **Not Answered**

Chosen Option : --

Q.3 Select the most appropriate option that can substitute the underlined segment in the given sentence.

Professor said that I will be late for the lecture.

- Ans**
- ☒ 1. he shall be late for the lecture
 - ☒ 2. he is late for the lecture
 - ☒ 3. he would be late for the lecture
 - ☒ 4. he may be late for the lecture

Question ID : 264330152712

Option 1 ID : 264330598448

Option 2 ID : 264330598449

Option 3 ID : 264330598447

Option 4 ID : 264330598450

Status : **Answered**

Chosen Option : 3

Q.4 Select the INCORRECTLY spelt word.

- Ans**
- ☒ 1. Separate
 - ☒ 2. Accommodate
 - ☒ 3. Definitely
 - ☒ 4. Embarass

Question ID : 264330152644

Option 1 ID : 264330598182

Option 2 ID : 264330598179

Option 3 ID : 264330598180

Option 4 ID : 264330598181

Status : Answered

Chosen Option : 1

Q.5 Select the most appropriate meaning of the given idiom.
Sell like hot cakes

- Ans**
- ☒ 1. Quick sell out
 - ☒ 2. Selling cakes
 - ☒ 3. Being ignored
 - ☒ 4. Eating hot cake

Question ID : 264330152725

Option 1 ID : 264330598500

Option 2 ID : 264330598501

Option 3 ID : 264330598499

Option 4 ID : 264330598502

Status : Answered

Chosen Option : 1

Q.6 Select the most appropriate option that can substitute the underlined segment in the given sentence.

Andrew will playing basketball at the college tournament.

- Ans**
- ☒ 1. are play the
 - ☒ 2. are play
 - ☒ 3. is playing
 - ☒ 4. is played

Question ID : 264330153473

Option 1 ID : 264330601408

Option 2 ID : 264330601407

Option 3 ID : 264330601409

Option 4 ID : 264330601410

Status : Answered

Chosen Option : 3

Q.7 Select the most appropriate word to fill in the blank.
Hardik Pandya hit four _____ fours and scored 72 runs in the match.

- Ans ☒ 1. continuous
☒ 2. consecutive
☒ 3. ongoing
☒ 4. constant

Question ID : 264330153507
Option 1 ID : 264330601540
Option 2 ID : 264330601539
Option 3 ID : 264330601542
Option 4 ID : 264330601541
Status : Answered
Chosen Option : 2

Q.8 Select the sentence that has NO spelling errors.

- Ans ☒ 1. The doctor presribed some medicine to alleviate my parsistent cough, which has been boathering me for days.
☒ 2. The doctor precribed some medicine to aleviate my persistent cough, which has been bothering me for days.
☒ 3. The doctor prescribed some medicine to aleviate my parsistent cough, which has been boathering me for days.
☒ 4. The doctor prescribed some medicine to alleviate my persistent cough, which has been bothering me for days.

Question ID : 264330152649
Option 1 ID : 264330598201
Option 2 ID : 264330598200
Option 3 ID : 264330598202
Option 4 ID : 264330598199
Status : Answered
Chosen Option : 4

Q.9 Select the most appropriate synonym of the bracketed word in the following sentence to fill in the blank.
The athlete's perseverance and mental toughness _____ (facilitate) her to overcome adversity and achieve her goals.

- Ans ☒ 1. restricted
☒ 2. enabled
☒ 3. limited
☒ 4. hindered

Question ID : 264330152653
Option 1 ID : 264330598216
Option 2 ID : 264330598218
Option 3 ID : 264330598215
Option 4 ID : 264330598217
Status : Answered
Chosen Option : 2

Q.10 The following sentence has been split into four segments. Identify the segment that contains a grammatical error.

Throughout my career as a journalist, / I covered many important stories and / interviewed numerous individuals, which allow me / to share important information and insights with my readers.

- Ans
- ☒ 1. to share important information and insights with my readers
 - ☒ 2. I covered many important stories and
 - ☒ 3. Throughout my career as a journalist,
 - ☒ 4. interviewed numerous individuals, which allow me

Question ID : 264330144182

Option 1 ID : 264330564994

Option 2 ID : 264330564992

Option 3 ID : 264330564991

Option 4 ID : 264330564993

Status : Answered

Chosen Option : 4

Q.11 The following sentence has been split into four segments. Identify the segment that contains a grammatical error.

Harish says / that his sister / loves to play / harmonium.

- Ans
- ☒ 1. harmonium
 - ☒ 2. loves to play
 - ☒ 3. Harish says
 - ☒ 4. that his sister

Question ID : 264330153165

Option 1 ID : 264330600222

Option 2 ID : 264330600221

Option 3 ID : 264330600219

Option 4 ID : 264330600220

Status : Answered

Chosen Option : 1

Q.12 Select the most appropriate option that can substitute the underlined segment in the following sentence.

Selling, purchasing, and using an illegally copied product is a criminal offence.

- Ans
- ☒ 1. an obsolete
 - ☒ 2. a pirated
 - ☒ 3. an outlawed
 - ☒ 4. a crooked

Question ID : 264330152633

Option 1 ID : 264330598135

Option 2 ID : 264330598136

Option 3 ID : 264330598137

Option 4 ID : 264330598138

Status : Answered

Chosen Option : 2

Q.13 Select the most appropriate option to fill in the blank.
The hiring manager has already offered you the job; now, _____ to accept or decline the offer.

- Ans ☒ 1. a penny for your thoughts
☒ 2. the ball is in your court
☒ 3. pull your leg
☒ 4. get your act together

Question ID : 264330151891
Option 1 ID : 264330595184
Option 2 ID : 264330595183
Option 3 ID : 264330595185
Option 4 ID : 264330595186
Status : Answered
Chosen Option : 2

Q.14 Select the most appropriate option to fill in the blank.
Oberon doesn't like the way Demetrius _____ to Helena. (Credit: A Midsummer Night's Dream)

- Ans ☒ 1. talked
☒ 2. talks
☒ 3. talking
☒ 4. to talk

Question ID : 264330153511
Option 1 ID : 264330601555
Option 2 ID : 264330601556
Option 3 ID : 264330601557
Option 4 ID : 264330601558
Status : Answered
Chosen Option : 2

Q.15 Select the most appropriate meaning of the given idiom.
Let sleeping dogs lie

- Ans ☒ 1. To let somebody sleep
☒ 2. To fall sick intentionally
☒ 3. Leave an existing situation as it is
☒ 4. To care for the pet

Question ID : 264330156172
Option 1 ID : 264330612088
Option 2 ID : 264330612089
Option 3 ID : 264330612090
Option 4 ID : 264330612087
Status : Answered
Chosen Option : 3

Q.16 Select the option that can be used as a one-word substitute for the given group of words.

A cage made for birds.

OR

A place for keeping the birds in a confined space.

Ans ☒ 1. Aquarium

☒ 2. Apiary

☒ 3. Aviary

☒ 4. Arena

Question ID : 264330153553

Option 1 ID : 264330601713

Option 2 ID : 264330601711

Option 3 ID : 264330601714

Option 4 ID : 264330601712

Status : Answered

Chosen Option : 3

Q.17 Select the most appropriate synonym of the given word.
Repulsive

Ans ☒ 1. Attractive

☒ 2. Reliable

☒ 3. Disgusting

☒ 4. Uniform

Question ID : 264330151922

Option 1 ID : 264330595303

Option 2 ID : 264330595305

Option 3 ID : 264330595304

Option 4 ID : 264330595306

Status : Answered

Chosen Option : 3

Q.18 Select the option that rectifies the spelling of the underlined word in the given sentence.

The sergent brought in a lot of changes as soon as he was given charge.

Ans ☒ 1. seargeant

☒ 2. sergeannt

☒ 3. sergant

☒ 4. sergeant

Question ID : 264330153156

Option 1 ID : 264330600185

Option 2 ID : 264330600184

Option 3 ID : 264330600183

Option 4 ID : 264330600186

Status : Answered

Chosen Option : 3

Q.19 The given sentence contains an error. Select the option that correctly rectifies the error.

The boy told his mother that he saw the most tall giraffe at the zoo.

- Ans ☒ 1. The boy told his mother that he saw the tallest giraffe at the zoo.
- ☐ 2. The boy told his mother that he saw the most taller giraffe at the zoo.
- ☐ 3. The boy told his mother that he saw the most tallest giraffe at the zoo.
- ☐ 4. The boy told his mother that he saw the more taller giraffe at the zoo.

Question ID : 264330152606

Option 1 ID : 264330598030

Option 2 ID : 264330598028

Option 3 ID : 264330598029

Option 4 ID : 264330598027

Status : Answered

Chosen Option : 1

Q.20 Select the most appropriate meaning of the given idiom.

Call the shots

- Ans ☐ 1. To be a follower that makes less important decision
- ☒ 2. To be in a position to make decisions that influences a situation
- ☐ 3. To be in a powerless position that follows orders
- ☐ 4. To be in a neutral position

Question ID : 264330153073

Option 1 ID : 264330599857

Option 2 ID : 264330599856

Option 3 ID : 264330599858

Option 4 ID : 264330599855

Status : Answered

Chosen Option : 2

Comprehension:

In the following passage, some words have been deleted. Fill in the blanks with the help of the alternatives given. Select the most appropriate option for each blank.

That evening we sat in the courtyard of the hotel once more, (1) _____ the sun sink below the western isles. I told Alexi what had happened that day. I (2) _____ I could glimpse the grey stone wall of Lismore House (3) _____ its island hilltop, the red light of the setting sun glinting from the windows, and from there the wasted frame of Jonathan Blake gazing out across the sea, on nothing, his boy waiting for him to die. But it was my (4) _____, simply the image on my mind, like the image burned on to your eyes when you have (5) _____ too long at the sun, the passing footprint of a creature long gone.

SubQuestion No : 21

Q.21 Select the most appropriate option to fill in blank no. 1.

- Ans ☒ 1. watching
- ☐ 2. wallowing
- ☐ 3. risking
- ☐ 4. practising

Question ID : 264330153445

Option 1 ID : 264330601299

Option 2 ID : 264330601302

Option 3 ID : 264330601301

Option 4 ID : 264330601300

Status : Answered

Chosen Option : 1

Comprehension:

In the following passage, some words have been deleted. Fill in the blanks with the help of the alternatives given. Select the most appropriate option for each blank.

That evening we sat in the courtyard of the hotel once more, (1) _____ the sun sink below the western isles. I told Alexi what had happened that day. I (2) _____ I could glimpse the grey stone wall of Lismore House (3) _____ its island hilltop, the red light of the setting sun glinting from the windows, and from there the wasted frame of Jonathan Blake gazing out across the sea, on nothing, his boy waiting for him to die. But it was my (4) _____, simply the image on my mind, like the image burned on to your eyes when you have (5) _____ too long at the sun, the passing footprint of a creature long gone.

SubQuestion No : 22

Q.22 Select the most appropriate option to fill in blank no. 2.

- Ans ☒ 1. fancied
☐ 2. groped
☐ 3. imbibed
☐ 4. translated

Question ID : 264330153446

Option 1 ID : 264330601305

Option 2 ID : 264330601306

Option 3 ID : 264330601303

Option 4 ID : 264330601304

Status : Answered

Chosen Option : 1

Comprehension:

In the following passage, some words have been deleted. Fill in the blanks with the help of the alternatives given. Select the most appropriate option for each blank.

That evening we sat in the courtyard of the hotel once more, (1) _____ the sun sink below the western isles. I told Alexi what had happened that day. I (2) _____ I could glimpse the grey stone wall of Lismore House (3) _____ its island hilltop, the red light of the setting sun glinting from the windows, and from there the wasted frame of Jonathan Blake gazing out across the sea, on nothing, his boy waiting for him to die. But it was my (4) _____, simply the image on my mind, like the image burned on to your eyes when you have (5) _____ too long at the sun, the passing footprint of a creature long gone.

SubQuestion No : 23

Q.23 Select the most appropriate option to fill in blank no. 3.

- Ans ☐ 1. off
☒ 2. on
☐ 3. aside
☐ 4. for

Question ID : 264330153447

Option 1 ID : 264330601307

Option 2 ID : 264330601308

Option 3 ID : 264330601309

Option 4 ID : 264330601310

Status : Answered

Chosen Option : 2

Comprehension:

In the following passage, some words have been deleted. Fill in the blanks with the help of the alternatives given. Select the most appropriate option for each blank.

That evening we sat in the courtyard of the hotel once more, (1) _____ the sun sink below the western isles. I told Alexi what had happened that day. I (2) _____ I could glimpse the grey stone wall of Lismore House (3) _____ its island hilltop, the red light of the setting sun glinting from the windows, and from there the wasted frame of Jonathan Blake gazing out across the sea, on nothing, his boy waiting for him to die. But it was my (4) _____, simply the image on my mind, like the image burned on to your eyes when you have (5) _____ too long at the sun, the passing footprint of a creature long gone.

SubQuestion No : 24

Q.24 Select the most appropriate option to fill in blank no. 4.

- Ans ☒ 1. dribble
☒ 2. straw
☒ 3. fantasy
☒ 4. habitat

Question ID : 264330153448

Option 1 ID : 264330601312

Option 2 ID : 264330601311

Option 3 ID : 264330601313

Option 4 ID : 264330601314

Status : Answered

Chosen Option : 3

Comprehension:

In the following passage, some words have been deleted. Fill in the blanks with the help of the alternatives given. Select the most appropriate option for each blank.

That evening we sat in the courtyard of the hotel once more, (1) _____ the sun sink below the western isles. I told Alexi what had happened that day. I (2) _____ I could glimpse the grey stone wall of Lismore House (3) _____ its island hilltop, the red light of the setting sun glinting from the windows, and from there the wasted frame of Jonathan Blake gazing out across the sea, on nothing, his boy waiting for him to die. But it was my (4) _____, simply the image on my mind, like the image burned on to your eyes when you have (5) _____ too long at the sun, the passing footprint of a creature long gone.

SubQuestion No : 25

Q.25 Select the most appropriate option to fill in blank no. 5.

- Ans ☒ 1. resumed
☒ 2. rusted
☒ 3. blocked
☒ 4. stared

Question ID : 264330153449

Option 1 ID : 264330601317

Option 2 ID : 264330601315

Option 3 ID : 264330601316

Option 4 ID : 264330601318

Status : Answered

Chosen Option : 4