

Multi Tasking Non Technical Staff and Havaladar CBIC and CBN Examination 2023

Roll Number	
Candidate Name	
Venue Name	R K Digital Computer Centre 1
Exam Date	04/09/2023
Exam Time	12:30 PM - 2:30 PM
Subject	MTS Non Tech Havaladar CBIC and CBN Examination 2023

Section : Numerical and Mathematical Ability

Q.1 A sum invested at the rate of 6% simple interest per annum grows to ₹1,13,880 in 5 years. What is the simple interest, If the same amount is invested for 8 years at the rate of 9% per annum?

Ans ✓ 1. ₹63,072

✗ 2. ₹60,565

✗ 3. ₹65,392

✗ 4. ₹58,050

Question ID : 264330158753

Option 1 ID : 264330622371

Option 2 ID : 264330622374

Option 3 ID : 264330622373

Option 4 ID : 264330622372

Status : Answered

Chosen Option : 1

Q.2 Find the compound interest (Compounded annually) on ₹2,000 for $2\frac{1}{2}$ years at 10% per annum.

Ans ✗ 1. ₹ 561

✗ 2. ₹ 500

✗ 3. ₹ 521

✓ 4. ₹ 541

Question ID : 264330156078

Option 1 ID : 264330611711

Option 2 ID : 264330611713

Option 3 ID : 264330611714

Option 4 ID : 264330611712

Status : Answered

Chosen Option : 3

Q.3 Study the given table and answer the question that follows.
The table shows the number of voters in four different villages P, Q, R, S.

Villages	Total number of registered voters	Percentage of people who voted (Out of the total number of registered voters)
P	1100	68
Q	1450	62
R	1200	73
S	1124	87

The number of people who did not vote in village P is what percentage more than that who did not vote in village R?

Ans

☐ 1. $6\frac{52}{81}\%$

☒ 2. $8\frac{52}{81}\%$

☐ 3. $7\frac{52}{81}\%$

☐ 4. $9\frac{52}{81}\%$

Question ID : 264330157907

Option 1 ID : 264330618987

Option 2 ID : 264330618989

Option 3 ID : 264330618988

Option 4 ID : 264330618990

Status : Answered

Chosen Option : 3

Q.4 Find the total surface area of a cuboid whose dimensions are 18 m, 6 m and 3 m.

Ans

☐ 1. 90 m^2

☐ 2. 180 m^2

☐ 3. 324 m^2

☒ 4. 360 m^2

Question ID : 264330153898

Option 1 ID : 264330603056

Option 2 ID : 264330603055

Option 3 ID : 264330603058

Option 4 ID : 264330603057

Status : Answered

Chosen Option : 4

Q.5 Yug covers a certain distance with a speed of 56 km/h in $\frac{3}{2}$ hours. If he wants to cover the same distance in 7 hours, what would be his speed (in km/h)?

- Ans**
- ☐ 1. 16
 - ☐ 2. 20
 - ☐ 3. 14
 - ☒ 4. 12

Question ID : 264330155752
Option 1 ID : 264330610413
Option 2 ID : 264330610414
Option 3 ID : 264330610412
Option 4 ID : 264330610411
Status : Answered
Chosen Option : 4

Q.6 Vikram saves 13% of his monthly salary. If his monthly expenditure is ₹5,220, then his monthly savings is:

- Ans**
- ☐ 1. ₹680
 - ☐ 2. ₹580
 - ☐ 3. ₹349
 - ☒ 4. ₹780

Question ID : 264330156430
Option 1 ID : 264330613112
Option 2 ID : 264330613114
Option 3 ID : 264330613111
Option 4 ID : 264330613113
Status : Answered
Chosen Option : 4

Q.7 20 men can complete a piece of work in 40 days, and 40 women can do the same work in 60 days. If 10 men and 20 women work together, then in how many days will the work be completed?

- Ans**
- ☐ 1. 60
 - ☐ 2. 50
 - ☒ 3. 48
 - ☐ 4. 40

Question ID : 264330156012
Option 1 ID : 264330611447
Option 2 ID : 264330611450
Option 3 ID : 264330611449
Option 4 ID : 264330611448
Status : Answered
Chosen Option : 3

Q.8 A grocery seller mixes two varieties of tea costing ₹300 per kg and ₹160 per kg in such a ratio that by selling this mixture at the rate of ₹187 per kg the shopkeeper earns 10% profit. In what respective ratio does the grocery seller mix the two varieties of tea?

- Ans**
- ☒ 1. 2 : 13
 - ☒ 2. 13 : 3
 - ☒ 3. 13 : 2
 - ☒ 4. 1 : 13

Question ID : 264330154118

Option 1 ID : 264330603936

Option 2 ID : 264330603937

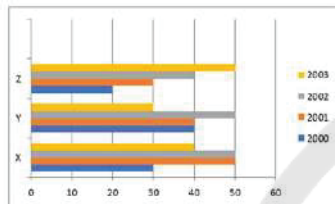
Option 3 ID : 264330603935

Option 4 ID : 264330603938

Status : Answered

Chosen Option : 1

Q.9 The following bar graph indicates the production of cement by 3 companies X, Y and Z during the years 2000 - 2003. The quantity is in lakh bags. Study the bar graph carefully and answer the question.



What is the ratio of the average production of company X during the period 2000 – 2003 to the production of company Y during the same period (in lakh bags).

- Ans**
- ☒ 1. 17 : 16
 - ☒ 2. 8 : 7
 - ☒ 3. 12 : 17
 - ☒ 4. 10 : 7

Question ID : 264330153858

Option 1 ID : 264330602897

Option 2 ID : 264330602895

Option 3 ID : 264330602898

Option 4 ID : 264330602896

Status : Answered

Chosen Option : 3

Q.10 The least common multiple (LCM) of p and q is r . The LCM of p^2q and pq^2 is _____.

- Ans**
- ☒ 1. pqr^3
 - ☒ 2. pqr
 - ☒ 3. pq
 - ☒ 4. pqr^2

Question ID : 264330156247

Option 1 ID : 264330612390

Option 2 ID : 264330612388

Option 3 ID : 264330612387

Option 4 ID : 264330612389

Status : Answered

Chosen Option : 2

Q.11 Two trains started from a station, at the same time in the same direction, at speeds of 90 km/h and 80 km/h. What will be the distance between the two trains after 5 hours?

- Ans**
- ☒ 1. 55 km
 - ☒ 2. 50 km
 - ☒ 3. 45 km
 - ☒ 4. 40 km

Question ID : 264330155971

Option 1 ID : 264330611285

Option 2 ID : 264330611283

Option 3 ID : 264330611286

Option 4 ID : 264330611284

Status : Answered

Chosen Option : 2

Q.12 A solid piece of metal, cuboidal in shape, with dimensions 12 cm, 9 cm and 2 cm is recast into a cube. What is the lateral surface area (in cm^2) of the cube?

- Ans**
- ☒ 1. 144
 - ☒ 2. 216
 - ☒ 3. 204
 - ☒ 4. 162

Question ID : 264330153793

Option 1 ID : 264330602636

Option 2 ID : 264330602635

Option 3 ID : 264330602638

Option 4 ID : 264330602637

Status : Answered

Chosen Option : 1

Q.13 A person buys a table fan for ₹2,800 and sells it at a loss of 12%. What is the selling price of the table fan?

- Ans**
- ☒ 1. ₹2,466
 - ☒ 2. ₹2,468
 - ☒ 3. ₹2,462
 - ☒ 4. ₹2,464

Question ID : 264330156220

Option 1 ID : 264330612281

Option 2 ID : 264330612282

Option 3 ID : 264330612279

Option 4 ID : 264330612280

Status : Answered

Chosen Option : 4

Q.14 If $A : B = 7 : 9$ and $B : C = 5 : 6$, Find the ratio of C and A respectively.

- Ans**
- ☒ 1. 15 : 14
 - ☒ 2. 14 : 15
 - ☒ 3. 54 : 35
 - ☒ 4. 35 : 54

Question ID : 264330153767

Option 1 ID : 264330602534

Option 2 ID : 264330602533

Option 3 ID : 264330602532

Option 4 ID : 264330602531

Status : Answered

Chosen Option : 4

Q.15 The average weight of 17 men is 63 kg and the average weight of 36 women is 54 kg. What is the average weight (in kg) of all the men and women together? (Rounded off to the nearest integer)

- Ans**
- ☒ 1. 59
 - ☒ 2. 62
 - ☒ 3. 57
 - ☒ 4. 52

Question ID : 264330155727

Option 1 ID : 264330610312

Option 2 ID : 264330610311

Option 3 ID : 264330610313

Option 4 ID : 264330610314

Status : Answered

Chosen Option : 1

Q.16 A vessel contains liquid A and liquid B in the ratio 4 : 9. If 8 litres of liquid A is added to the vessel, the new ratio becomes 8 : 9. Find the quantity of liquid A (in litres) in the original mixture.

- Ans**
- ☒ 1. 12
 - ☒ 2. 9
 - ☒ 3. 8
 - ☒ 4. 6

Question ID : 264330155729

Option 1 ID : 264330610319

Option 2 ID : 264330610320

Option 3 ID : 264330610321

Option 4 ID : 264330610322

Status : Answered

Chosen Option : 3

Q.17 Which of the following expressions has value equal to 0?

Ans

✗ 1. $(2 \times 3 + 5 - (1 - 2(3 - 2 \times 2)))$

✗ 2. $(2 \times 3 - 5 - (1 + 2(3 - 2 \times 2)))$

✓ 3. $(2 \times 3 - 5 + (1 + 2(3 - 2 \times 2)))$

✗ 4. $(2 \times 3 - 5 - (1 - 2(3 - 2 \times 2)))$

Question ID : 264330153796

Option 1 ID : 264330602650

Option 2 ID : 264330602648

Option 3 ID : 264330602649

Option 4 ID : 264330602647

Status : Answered

Chosen Option : 3

Q.18 Two numbers are in the ratio of 6 : 7. If the difference between these numbers is 16, then find the numbers.

Ans

✓ 1. 96, 112

✗ 2. 80, 96

✗ 3. 120, 136

✗ 4. 104, 120

Question ID : 264330153876

Option 1 ID : 264330602967

Option 2 ID : 264330602969

Option 3 ID : 264330602968

Option 4 ID : 264330602970

Status : Answered

Chosen Option : 1

Q.19 A, B and C can complete a work in 10, 15 and 20 days, respectively. They work on alternate days such that 1st day A, 2nd day B and 3rd day C. Again 4th day A, 5th day B and so on. If they work in the same way, in how many days will the work be completed?

Ans

✗ 1. $13\frac{1}{4}$

✗ 2. 15

✗ 3. 14

✓ 4. $13\frac{1}{2}$

Question ID : 264330154060

Option 1 ID : 264330603704

Option 2 ID : 264330603705

Option 3 ID : 264330603703

Option 4 ID : 264330603706

Status : Answered

Chosen Option : 4

Q.20 A grocer purchased 50 kg of sugar at ₹40 per kg and mixed with 70 kg of sugar at ₹30 per kg. At what rate should he sell the mixture (per kg) to gain 20%?

- Ans**
- ☒ 1. ₹60
 - ☒ 2. ₹20
 - ☒ 3. ₹35
 - ☒ 4. ₹41

Question ID : 264330155997

Option 1 ID : 264330611387

Option 2 ID : 264330611389

Option 3 ID : 264330611388

Option 4 ID : 264330611390

Status : Answered

Chosen Option : 4

Section : Reasoning Ability and Problem Solving

Q.1 2 is related to 40 following a certain logic. Following the same logic, 5 is related to 250. To which of the following is 7 related to, following the same logic?

- Ans**
- ☒ 1. 470
 - ☒ 2. 490
 - ☒ 3. 450
 - ☒ 4. 400

Question ID : 264330151579

Option 1 ID : 264330593945

Option 2 ID : 264330593946

Option 3 ID : 264330593944

Option 4 ID : 264330593943

Status : Answered

Chosen Option : 2

Q.2 Select the combination of letters that when sequentially placed in the blanks of the given series, will complete the series.

R _ _ RT _ R _ R _ TR

- Ans**
- ☒ 1. RTRRT
 - ☒ 2. TTTRR
 - ☒ 3. TRRTR
 - ☒ 4. RTTTR

Question ID : 264330151641

Option 1 ID : 264330594194

Option 2 ID : 264330594191

Option 3 ID : 264330594193

Option 4 ID : 264330594192

Status : Answered

Chosen Option : 3

Q.3 J, K, P, Q, R and M are sitting around a circular table facing the centre.
J is sitting to the immediate left of M. R is sitting 2nd to the left of J. K is sitting 3rd to the right of J. P sits to the immediate right of R.
Who sits 2nd to the left of K?

- Ans**
- ☒ 1. R
 - ☒ 2. Q
 - ☒ 3. M
 - ☒ 4. P

Question ID : 264330155651

Option 1 ID : 264330610007

Option 2 ID : 264330610010

Option 3 ID : 264330610009

Option 4 ID : 264330610008

Status : Answered

Chosen Option : 3

Q.4 What should come in place of '?' in the given series?

3 20 54 ? 258 530 1074

- Ans**
- ☒ 1. 122
 - ☒ 2. 128
 - ☒ 3. 118
 - ☒ 4. 124

Question ID : 264330151499

Option 1 ID : 264330593624

Option 2 ID : 264330593626

Option 3 ID : 264330593623

Option 4 ID : 264330593625

Status : Answered

Chosen Option : 1

Q.5 Read the given statements and conclusions carefully. You have to take the given statements to be true even if they seem to be at variance from commonly known facts. You have to decide which conclusion/s logically follow/s from the given statements.

Statements: All crows are sparrows. Some sparrows are parrots. All parrots are yellow.

Conclusion I: Some crows are parrots.

Conclusion II: Some yellow are parrots.

- Ans**
- ☒ 1. Only conclusion (II) is follow.
 - ☒ 2. Both conclusions (I) and (II) are follow.
 - ☒ 3. Only conclusion (I) is follow.
 - ☒ 4. Neither conclusion (I) nor (II) is follow.

Question ID : 264330155929

Option 1 ID : 264330611120

Option 2 ID : 264330611122

Option 3 ID : 264330611119

Option 4 ID : 264330611121

Status : Answered

Chosen Option : 1

Q.6 The position of how many letters will remain unchanged if each of the letter in the word 'CATEGORY' is arranged in alphabetical order?

- Ans**
- ☒ 1. Three
 - ☒ 2. Two
 - ☒ 3. None
 - ☒ 4. One

Question ID : 264330154327

Option 1 ID : 264330604774

Option 2 ID : 264330604771

Option 3 ID : 264330604773

Option 4 ID : 264330604772

Status : Answered

Chosen Option : 4

Q.7 What should come in place of ? in the given series?

978 967 956 945 934 ?

- Ans**
- ☒ 1. 922
 - ☒ 2. 923
 - ☒ 3. 921
 - ☒ 4. 924

Question ID : 264330151553

Option 1 ID : 264330593840

Option 2 ID : 264330593841

Option 3 ID : 264330593839

Option 4 ID : 264330593842

Status : Answered

Chosen Option : 2

Q.8 What should come in place of ? in the given series based on the English alphabetical order?

ETM, AWO, WZQ, SCS, ?

- Ans**
- ☒ 1. MEU
 - ☒ 2. NFV
 - ☒ 3. OFU
 - ☒ 4. MEV

Question ID : 264330155807

Option 1 ID : 264330610632

Option 2 ID : 264330610631

Option 3 ID : 264330610634

Option 4 ID : 264330610633

Status : Answered

Chosen Option : 3

Q.9 In a certain code language, 'YJM' is coded as '26-11-14' and 'SOP' is coded as '20-16-17'. What is the code for 'BTX' in the given code language?

- Ans** ☒ 1. 3-21-25
☐ 2. 5-22-24
☐ 3. 5-23-25
☐ 4. 4-22-24

Question ID : 264330155822

Option 1 ID : 264330610691

Option 2 ID : 264330610694

Option 3 ID : 264330610693

Option 4 ID : 264330610692

Status : Answered

Chosen Option : 1

Q.10 If G means '-', D means '×', A means '+', B means '+', then what will come in place of the question mark (?) in the following equation?

19 D 6 B 34 A 2 G 27 = ?

- Ans** ☐ 1. 126
☒ 2. 104
☐ 3. 65
☐ 4. 83

Question ID : 264330154688

Option 1 ID : 264330606218

Option 2 ID : 264330606217

Option 3 ID : 264330606216

Option 4 ID : 264330606215

Status : Answered

Chosen Option : 2

Q.11 In a certain code language, 'LIAR' is coded as '5148' and 'REAL' is coded as '1582'. What is the code for 'E' in the given code language?

- Ans** ☐ 1. 5
☐ 2. 8
☒ 3. 2
☐ 4. 1

Question ID : 264330151702

Option 1 ID : 264330594437

Option 2 ID : 264330594436

Option 3 ID : 264330594438

Option 4 ID : 264330594435

Status : Answered

Chosen Option : 3

Q.12 Select the combination of letters that when sequentially placed in the blanks of the given series will make it logically complete.

KC_OK_PO_YSOKWV_ K_YO

- Ans**
- ☒ 1. MDHTV
 - ☒ 2. LJMST
 - ☒ 3. KJNVL
 - ☒ 4. MAKOU

Question ID : 264330156319

Option 1 ID : 264330612676

Option 2 ID : 264330612677

Option 3 ID : 264330612675

Option 4 ID : 264330612678

Status : Answered

Chosen Option : 2

Q.13 In the following number-pairs, the second number is obtained by applying certain mathematical operations to the first number. Select the set in which the numbers are related in the same way as are the numbers of the following sets.

(NOTE: Operations should be performed on the whole numbers, without breaking down the numbers into its constituent digits. E.g. 13 – Operations on 13 such as adding / subtracting / multiplying etc. to 13 can be performed.

Breaking down 13 into 1 and 3 and then performing mathematical operations on 1 and 3 is not allowed)

65, 74

87, 96

- Ans**
- ☒ 1. 75, 123
 - ☒ 2. 63, 157
 - ☒ 3. 81, 156
 - ☒ 4. 92, 101

Question ID : 264330151622

Option 1 ID : 264330594117

Option 2 ID : 264330594118

Option 3 ID : 264330594116

Option 4 ID : 264330594115

Status : Answered

Chosen Option : 4

Q.14 What should come in place of '?' in the given series?

13 52 169 520 1573 ?

- Ans**
- ☒ 1. 4781
 - ☒ 2. 4732
 - ☒ 3. 4895
 - ☒ 4. 4863

Question ID : 264330151477

Option 1 ID : 264330593536

Option 2 ID : 264330593535

Option 3 ID : 264330593538

Option 4 ID : 264330593537

Status : Answered

Chosen Option : 2

Q.15 Which figure should replace the question mark (?) if the following figure series were to be continued?

P	E	8	↑	8	3	3	8	↑	E	↑	⊔	
	⊔			P			⊔		3			?
↑	A	3	⊔	E	A	E	A	⊔	⊔	8	A	

Ans

✗ 1.

⊔	↑	E
	⊔	
8	A	3

✓ 2.

⊔	↑	E
	L	
8	A	⊔

✗ 3.

⊔	E	↑
	⊔	
8	A	3

✗ 4.

⊔	E	↑
	L	
8	A	⊔

Question ID : 264330154734

Option 1 ID : 264330606400

Option 2 ID : 264330606402

Option 3 ID : 264330606401

Option 4 ID : 264330606399

Status : Answered

Chosen Option : 2

Q.16 उस शब्द-युग्म का चयन कीजिए जो नीचे दिए गए शब्दों के युग्म में व्यक्त किए गए समान संबंध का सबसे अच्छा निरूपण करता है।

(शब्दों को अर्थपूर्ण हिंदी शब्दों के रूप में माना जाना चाहिए और उन्हें शब्द में अक्षरों की संख्या/व्यंजन/स्वरों की संख्या के आधार पर एक दूसरे से संबंधित नहीं किया जाना चाहिए।)

सराहना : प्रशंसा करना

Ans

- ✓ 1. दावत देना : खातिर करना
- ✗ 2. रिझाना : ठुकरा देना
- ✗ 3. सुंदर बनाना : तरोताज़ा करना
- ✗ 4. सिखाना : सीखना

Question ID : 264330154640

Option 1 ID : 264330606023

Option 2 ID : 264330606026

Option 3 ID : 264330606025

Option 4 ID : 264330606024

Status : Answered

Chosen Option : 1

Q.17 Read the given statement(s) and conclusions carefully. Assuming that the information given in the statements is true, even if it appears to be at variance with commonly known facts, decide which of the given conclusions logically follow(s) from the statement(s).

Statements: All the actors are girls. All the girls are beautiful.

Conclusions:

- (I) All the actors are beautiful.
- (II) Some girls are actors.

Ans

- ✓ 1. Both conclusions (I) and (II) are follows.
- ✗ 2. Only conclusion (II) is follows.
- ✗ 3. Only conclusion (I) is follows.
- ✗ 4. Neither conclusion (I) nor (II) is follows.

Question ID : 264330154431

Option 1 ID : 264330605190

Option 2 ID : 264330605188

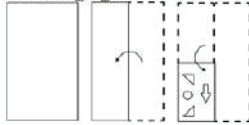
Option 3 ID : 264330605187

Option 4 ID : 264330605189

Status : Answered

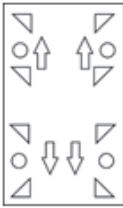
Chosen Option : 1

Q.18 The sequence of folding a piece of paper and the manner in which the folded paper is cut is shown in the following figures. How would this paper look when unfolded?



Ans

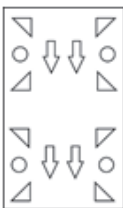
☒ 1.



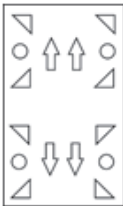
☒ 2.



☒ 3.



☒ 4.



Question ID : 264330155613

Option 1 ID : 264330609857

Option 2 ID : 264330609858

Option 3 ID : 264330609855

Option 4 ID : 264330609856

Status : Answered

Chosen Option : 2

Q.19 What will come in place of '?' in the following equation, if '+' and '×' are interchanged and '-' and '+' are interchanged?

$$18 - 9 \div 4 \times 3 + 5 = ?$$

Ans

☒ 1. 17

☒ 2. 13

☒ 3. 18

☒ 4. 19

Question ID : 264330154670

Option 1 ID : 264330606145

Option 2 ID : 264330606143

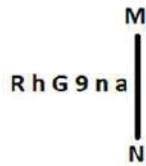
Option 3 ID : 264330606144

Option 4 ID : 264330606146

Status : Answered

Chosen Option : 2

Q.20 Select the correct mirror image of the given figure when the mirror is placed at MN as shown below.



Ans

- ☐ 1. a u e e h r y
- ☐ 2. s u e G h r y
- ☐ 3. a u e e h r R
- ☒ 4. s u e e h r y

Question ID : 264330151512

Option 1 ID : 264330593676

Option 2 ID : 264330593675

Option 3 ID : 264330593677

Option 4 ID : 264330593678

Status : Answered

Chosen Option : 3

Section : General Awareness

Q.1 The Gua and Noamundi mines are located in with state of India?

Ans

- ☐ 1. Assam
- ☐ 2. Haryana
- ☐ 3. Rajasthan
- ☒ 4. Jharkhand

Question ID : 264330161527

Option 1 ID : 264330633435

Option 2 ID : 264330633438

Option 3 ID : 264330633437

Option 4 ID : 264330633436

Status : Answered

Chosen Option : 4

Q.2 What is a fiscal year?

Ans

- ☒ 1. A year that represents the financial reporting period for the government
- ☐ 2. A year with a surplus in government revenue
- ☐ 3. A year with a deficit in government revenue
- ☐ 4. A year in which tax rates are increased

Question ID : 264330157272

Option 1 ID : 264330616454

Option 2 ID : 264330616451

Option 3 ID : 264330616452

Option 4 ID : 264330616453

Status : Answered

Chosen Option : 1

Q.3 The Constitution (Scheduled Castes and Scheduled Tribes) Order (Second Amendment) Bill, 2022, was passed in December 2022 and is related to which state?

- Ans ☒ 1. Bihar
☒ 2. Uttarakhand
☒ 3. Uttar Pradesh
☒ 4. Karnataka

Question ID : 264330158334
Option 1 ID : 264330620698
Option 2 ID : 264330620696
Option 3 ID : 264330620695
Option 4 ID : 264330620697
Status : Not Answered
Chosen Option : --

Q.4 Identify the Kuchipudi dancer from following, who was awarded with 'Padma Shri' in the year 2022.

- Ans ☒ 1. Vidyanand Sarek
☒ 2. Padmaja Reddy
☒ 3. Dr. Veeraswamy Seshiah
☒ 4. KV Rabiya

Question ID : 264330155528
Option 1 ID : 264330609516
Option 2 ID : 264330609517
Option 3 ID : 264330609515
Option 4 ID : 264330609518
Status : Answered
Chosen Option : 2

Q.5 Buddha Purnima is marked on a full moon day in the Hindu month of _____.

- Ans ☒ 1. Vaisakh
☒ 2. Jyaistha
☒ 3. Bhadra
☒ 4. Ashadha

Question ID : 264330160830
Option 1 ID : 264330630651
Option 2 ID : 264330630652
Option 3 ID : 264330630654
Option 4 ID : 264330630653
Status : Not Answered
Chosen Option : --

Q.6 Which of the following is the official language of Afghanistan?

- Ans ☒ 1. Sinhala
☒ 2. Burmese
☒ 3. Dari
☒ 4. Dzongkha

Question ID : 264330160175
Option 1 ID : 264330628040
Option 2 ID : 264330628042
Option 3 ID : 264330628039
Option 4 ID : 264330628041
Status : Answered
Chosen Option : 3

Q.7 Who started the temple entry movement in 1927?

- Ans** ☒ 1. Mahadev Govind Ranade
☒ 2. Bhimrao Ambedkar
☒ 3. Mahatma Gandhi
☒ 4. Annie Besant

Question ID : 264330162350

Option 1 ID : 264330636729

Option 2 ID : 264330636728

Option 3 ID : 264330636727

Option 4 ID : 264330636730

Status : Answered

Chosen Option : 2

Q.8 In which state is Gobind Sagar (Bhakra Nangal Project) located?

- Ans** ☒ 1. Himachal Pradesh
☒ 2. Gujarat
☒ 3. Rajasthan
☒ 4. Punjab

Question ID : 264330160140

Option 1 ID : 264330627900

Option 2 ID : 264330627902

Option 3 ID : 264330627901

Option 4 ID : 264330627899

Status : Answered

Chosen Option : 1

Q.9 Pandit Ravi Shankar is known worldwide for playing which of the following musical instruments?

- Ans** ☒ 1. Mohan Veena
☒ 2. Sarod
☒ 3. Been
☒ 4. Sitar

Question ID : 264330161771

Option 1 ID : 264330634414

Option 2 ID : 264330634413

Option 3 ID : 264330634411

Option 4 ID : 264330634412

Status : Answered

Chosen Option : 4

Q.10 The Arabian Sea is an extension of which of the following oceans?

- Ans** ☒ 1. Pacific Ocean
☒ 2. Southern Ocean
☒ 3. Arctic Ocean
☒ 4. Indian ocean

Question ID : 264330157836

Option 1 ID : 264330618703

Option 2 ID : 264330618706

Option 3 ID : 264330618705

Option 4 ID : 264330618704

Status : Answered

Chosen Option : 4

Q.11 Which of the following is a dimension of microfinance institutions (MFIs) in India?

- Ans** ☒ 1. Outreach to rural areas
☐ 2. Loan interest rates
☐ 3. Investment in the stock market
☐ 4. Availability of credit cards

Question ID : 264330157292

Option 1 ID : 264330616534

Option 2 ID : 264330616531

Option 3 ID : 264330616533

Option 4 ID : 264330616532

Status : Answered

Chosen Option : 2

Q.12 Shambhu Maharaj was a renowned guru of which of the following Gharanas of Kathak?

- Ans** ☒ 1. Lucknow
☐ 2. Jaipur
☐ 3. Raigarh
☐ 4. Banaras

Question ID : 264330160810

Option 1 ID : 264330630572

Option 2 ID : 264330630571

Option 3 ID : 264330630574

Option 4 ID : 264330630573

Status : Answered

Chosen Option : 1

Q.13 Which is the oldest Stupa of the Buddhist Period?

- Ans** ☐ 1. Dhamek Stupa
☐ 2. Mahabodhi Stupa
☐ 3. Kesariya Stupa
☒ 4. Sanchi Stupa

Question ID : 264330160761

Option 1 ID : 264330630378

Option 2 ID : 264330630375

Option 3 ID : 264330630376

Option 4 ID : 264330630377

Status : Not Answered

Chosen Option : --

Q.14 Who conducts elections for both the houses of Parliament in India?

- Ans** ☐ 1. Ministry of Parliamentary Affairs
☒ 2. Election Commission
☐ 3. President
☐ 4. Prime Minister

Question ID : 264330160860

Option 1 ID : 264330630773

Option 2 ID : 264330630771

Option 3 ID : 264330630774

Option 4 ID : 264330630772

Status : Answered

Chosen Option : 2

Q.15 The third battle of Panipat was fought in which of the following years?

Ans ☒ 1. 1761

☒ 2. 1707

☒ 3. 1786

☒ 4. 1751

Question ID : 264330161734

Option 1 ID : 264330634264

Option 2 ID : 264330634263

Option 3 ID : 264330634266

Option 4 ID : 264330634265

Status : Answered

Chosen Option : 1

Q.16 'Untouchable' is a novel written by:

Ans ☒ 1. Mulk Raj Anand

☒ 2. RC Majumdar

☒ 3. Premchand

☒ 4. Bankim Chandra Chattopadhyay

Question ID : 264330155498

Option 1 ID : 264330609395

Option 2 ID : 264330609396

Option 3 ID : 264330609398

Option 4 ID : 264330609397

Status : Answered

Chosen Option : 2

Q.17 Which dance form is associated with Natwari Dance?

Ans ☒ 1. Kathak

☒ 2. Kuchipudi

☒ 3. Odissi

☒ 4. Kathakali

Question ID : 264330159053

Option 1 ID : 264330623572

Option 2 ID : 264330623574

Option 3 ID : 264330623571

Option 4 ID : 264330623573

Status : Not Answered

Chosen Option : --

Q.18 Birsa Munda hockey stadium is one of the India's largest hockey stadium. In which state is this stadium situated?

Ans ☒ 1. Madhya Pradesh

☒ 2. Bihar

☒ 3. Odisha

☒ 4. Chhattisgarh

Question ID : 264330158355

Option 1 ID : 264330620781

Option 2 ID : 264330620779

Option 3 ID : 264330620782

Option 4 ID : 264330620780

Status : Answered

Chosen Option : 3

Q.19 The directive principles are largely classified into three broad categories. Which of the following is NOT the part of this classification?

- Ans
- ☒ 1. Liberal
 - ☒ 2. Socialistic
 - ☒ 3. Gandhian
 - ☒ 4. Authoritative

Question ID : 264330160859

Option 1 ID : 264330630769

Option 2 ID : 264330630767

Option 3 ID : 264330630768

Option 4 ID : 264330630770

Status : Answered

Chosen Option : 4

Q.20 Which of the following countries did India defeat to clinch its maiden Women's Junior Hockey Asia Cup title?

- Ans
- ☒ 1. Japan
 - ☒ 2. Chinese Taipei
 - ☒ 3. Malaysia
 - ☒ 4. South Korea

Question ID : 264330161129

Option 1 ID : 264330631848

Option 2 ID : 264330631850

Option 3 ID : 264330631849

Option 4 ID : 264330631847

Status : Answered

Chosen Option : 2

Q.21 Who among the following is the author of the book 'Sita: An Illustrated Retelling of the Ramayana'?

- Ans
- ☒ 1. Ravinder Singh
 - ☒ 2. Devdutt Pattanaik
 - ☒ 3. Amish Tripathi
 - ☒ 4. Durjoy Datta

Question ID : 264330155457

Option 1 ID : 264330609234

Option 2 ID : 264330609233

Option 3 ID : 264330609231

Option 4 ID : 264330609232

Status : Not Answered

Chosen Option : --

Q.22 Which soft metal in group 1 of the periodic table tarnishes within a few seconds of exposure to air?

- Ans ☒ 1. Barium
☒ 2. Sodium
☒ 3. Strontium
☒ 4. Francium

Question ID : 264330161054

Option 1 ID : 264330631548

Option 2 ID : 264330631549

Option 3 ID : 264330631547

Option 4 ID : 264330631550

Status : Answered

Chosen Option : 1

Q.23 The 'Ka Shad Mastieh' or victory dance of the _____ tribe of Meghalaya is an ancient war dance performed during the prominent festival of the tribe.

- Ans ☒ 1. Bhoi
☒ 2. War
☒ 3. Khasi
☒ 4. Jaintia

Question ID : 264330161345

Option 1 ID : 264330632709

Option 2 ID : 264330632710

Option 3 ID : 264330632708

Option 4 ID : 264330632707

Status : Answered

Chosen Option : 3

Q.24 What is the weight of the ball in handball for men?

- Ans ☒ 1. 425 to 475 gm
☒ 2. 325 to 375 gm
☒ 3. 525 to 575 gm
☒ 4. 225 to 275 gm

Question ID : 264330158248

Option 1 ID : 264330620353

Option 2 ID : 264330620351

Option 3 ID : 264330620354

Option 4 ID : 264330620352

Status : Not Answered

Chosen Option : --

Q.25 Which vitamin is needed for a healthy immune system, low-light vision, and healthy skin?

- Ans**
- ☒ 1. Vitamin K
 - ☒ 2. Vitamin B2
 - ☒ 3. Vitamin B9
 - ☒ 4. Vitamin A

Question ID : 264330160991

Option 1 ID : 264330631296

Option 2 ID : 264330631298

Option 3 ID : 264330631297

Option 4 ID : 264330631295

Status : Answered

Chosen Option : 4

Section : English Language and Comprehension

Q.1 Select the option that can be used as a one-word substitute for the given group of words.

Study of sound and sound waves

- Ans**
- ☒ 1. Botany
 - ☒ 2. Physics
 - ☒ 3. Demography
 - ☒ 4. Acoustics

Question ID : 264330152772

Option 1 ID : 264330598679

Option 2 ID : 264330598681

Option 3 ID : 264330598680

Option 4 ID : 264330598682

Status : Answered

Chosen Option : 4

Q.2 Select the most appropriate option to fill in the blank.

The students of class 7 gave their teacher a gift, which was _____ to her.

- Ans**
- ☒ 1. revealing
 - ☒ 2. shocking
 - ☒ 3. confusing
 - ☒ 4. surprising

Question ID : 264330152580

Option 1 ID : 264330597923

Option 2 ID : 264330597925

Option 3 ID : 264330597926

Option 4 ID : 264330597924

Status : Answered

Chosen Option : 4

Q.3 Select the most appropriate synonym of the given word.
Obsession

- Ans** ☒ 1. Discrimination
☒ 2. Fascination
☒ 3. Unconcern
☒ 4. Sympathy

Question ID : 264330153559

Option 1 ID : 264330601736

Option 2 ID : 264330601737

Option 3 ID : 264330601735

Option 4 ID : 264330601738

Status : Answered

Chosen Option : 2

Q.4 The following sentence has been split into four segments. Identify the segment that contains a grammatical error and select the option which rectifies that error.

A lot of adulterants / are chemicals that can lead / to an range of health problems / in both children and adults.

- Ans** ☒ 1. to a range of health problems
☒ 2. are chemical that can lead
☒ 3. A lot of adulterant
☒ 4. in both children and adult.

Question ID : 264330141340

Option 1 ID : 264330553696

Option 2 ID : 264330553695

Option 3 ID : 264330553697

Option 4 ID : 264330553698

Status : Answered

Chosen Option : 1

Q.5 Select the most appropriate option that can substitute the underlined segment in the given sentence.

They would find someone drive the wagon back across the desert.

- Ans** ☒ 1. in drive in the
☒ 2. to drive
☒ 3. to drive the
☒ 4. in driving

Question ID : 264330153482

Option 1 ID : 264330601446

Option 2 ID : 264330601445

Option 3 ID : 264330601443

Option 4 ID : 264330601444

Status : Answered

Chosen Option : 3

Q.6 The following sentence has been split into four segments. Identify the segment that contains a grammatical error.

The ball / I kicked / went highly / in the sky.

- Ans ☒ 1. The ball
☒ 2. went highly
☒ 3. in the sky
☒ 4. I kicked

Question ID : 264330153184

Option 1 ID : 264330600295

Option 2 ID : 264330600297

Option 3 ID : 264330600298

Option 4 ID : 264330600296

Status : Answered

Chosen Option : 2

Q.7 Select the most appropriate idiom to fill in the blank.

Rajat is known for his notorious nature. He will be friendly to your face but likes

_____.

- Ans ☒ 1. to blow his trumpet
☒ 2. to stab you in the back
☒ 3. to paint the whole town red
☒ 4. to get all bent out of the shape

Question ID : 264330153562

Option 1 ID : 264330601750

Option 2 ID : 264330601748

Option 3 ID : 264330601749

Option 4 ID : 264330601747

Status : Answered

Chosen Option : 2

Q.8 Select the most appropriate meaning of the given idiom.

Barking up the wrong tree

- Ans ☒ 1. Provoke trouble
☒ 2. To make a bad situation worse
☒ 3. Getting a good start is important
☒ 4. To be mistaken, to be looking for solutions in the wrong place

Question ID : 264330153280

Option 1 ID : 264330600677

Option 2 ID : 264330600676

Option 3 ID : 264330600678

Option 4 ID : 264330600675

Status : Answered

Chosen Option : 4

Q.9 Select the option that can be used as a one-word substitute for the given group of words.

A creature which depends on others

- Ans
- ☒ 1. Microbes
 - ☒ 2. Virus
 - ☒ 3. Parasite
 - ☒ 4. Bacteria

Question ID : 264330152586

Option 1 ID : 264330597949

Option 2 ID : 264330597947

Option 3 ID : 264330597950

Option 4 ID : 264330597948

Status : Answered

Chosen Option : 3

Q.10 Select the most appropriate idiom to fill in the blank.

The play I saw last night was a _____.

- Ans
- ☒ 1. hit the road
 - ☒ 2. hit the hay
 - ☒ 3. smash hit
 - ☒ 4. hit the roof

Question ID : 264330153099

Option 1 ID : 264330599962

Option 2 ID : 264330599959

Option 3 ID : 264330599960

Option 4 ID : 264330599961

Status : Answered

Chosen Option : 3

Q.11 Select the most appropriate option to fill in the blank.

He is _____ of many chain snatching cases in Dariyaganj.

- Ans
- ☒ 1. ackused
 - ☒ 2. acxused
 - ☒ 3. akused
 - ☒ 4. accused

Question ID : 264330153306

Option 1 ID : 264330600781

Option 2 ID : 264330600780

Option 3 ID : 264330600779

Option 4 ID : 264330600782

Status : Answered

Chosen Option : 4

Q.12 The following sentence has been split into four segments. Identify the segment that contains a grammatical error.
Despite the setbacks and obstacles we faced, / our team rallied together and achieved our goals, / which teach us the importance of / teamwork, resilience, and determination.

- Ans**
- ☒ 1. Despite the setbacks and obstacles we faced,
 - ☒ 2. teamwork, resilience, and determination
 - ☒ 3. which teach us the importance of
 - ☒ 4. our team rallied together and achieved our goals,

Question ID : 264330144181

Option 1 ID : 264330564987

Option 2 ID : 264330564990

Option 3 ID : 264330564989

Option 4 ID : 264330564988

Status : Answered

Chosen Option : 3

Q.13 Select the option that correctly rectifies the spelling error that is underlined.
The questionnaire used by the researcher was of top quality.

- Ans**
- ☒ 1. quesstionnaire
 - ☒ 2. questionnaire
 - ☒ 3. questionnairre
 - ☒ 4. questionnairee

Question ID : 264330153422

Option 1 ID : 264330601219

Option 2 ID : 264330601220

Option 3 ID : 264330601221

Option 4 ID : 264330601222

Status : Answered

Chosen Option : 2

Q.14 The given sentence contains an error. Select the option that correctly rectifies the error.
That career competition was the difficultest exam he had ever given.

- Ans**
- ☒ 1. That career competition was the difficultest exam than any he had ever given.
 - ☒ 2. That career competition was the most difficult exam than any he had ever given.
 - ☒ 3. That career competition was the most difficultest exam he had ever given.
 - ☒ 4. That career competition was the most difficult exam he had ever given.

Question ID : 264330152607

Option 1 ID : 264330598034

Option 2 ID : 264330598032

Option 3 ID : 264330598031

Option 4 ID : 264330598033

Status : Answered

Chosen Option : 4

Q.15 Select the most appropriate idiom for the following sentence.
Shweta organises the sale of handmade pottery at a cheap rate.

- Ans ☒ 1. Hush money
☒ 2. Go for a song
☒ 3. Having one's cake and eating it too
☒ 4. Making a fuss out of something

Question ID : 264330141303

Option 1 ID : 264330553547

Option 2 ID : 264330553548

Option 3 ID : 264330553549

Option 4 ID : 264330553550

Status : Answered

Chosen Option : 2

Q.16 Select the most appropriate ANTONYM of the given word.
Guilty

- Ans ☒ 1. Responsible
☒ 2. Innocent
☒ 3. Criminal
☒ 4. Patient

Question ID : 264330153364

Option 1 ID : 264330601009

Option 2 ID : 264330601008

Option 3 ID : 264330601010

Option 4 ID : 264330601007

Status : Answered

Chosen Option : 2

Q.17 Identify the INCORRECTLY spelt word in the following sentence and select its correct spelling from the given options.
The colours of the rainbow seemed to shine through the triangular prism as the sun hit the object.

- Ans ☒ 1. rainbouw
☒ 2. son
☒ 3. triangular
☒ 4. object

Question ID : 264330153110

Option 1 ID : 264330600003

Option 2 ID : 264330600005

Option 3 ID : 264330600004

Option 4 ID : 264330600006

Status : Answered

Chosen Option : 3

Q.18 Select the most appropriate option that can substitute the underlined segment in the given sentence.

The intrepid group of adventurers climbed the mountain despite of bad weather and road closures.

- Ans ☒ 1. despite
☐ 2. in spite
☐ 3. in view of
☐ 4. due to

Question ID : 264330151854

Option 1 ID : 264330595035

Option 2 ID : 264330595036

Option 3 ID : 264330595037

Option 4 ID : 264330595038

Status : Answered

Chosen Option : 1

Q.19 Select the most appropriate option that can substitute the underlined segment in the given sentence.

The airplane flowed over the mountains, offering the passengers a breath-taking view of the majestic peaks below.

- Ans ☐ 1. flew beyond
☒ 2. flew over
☐ 3. flowed above
☐ 4. flowed beyond

Question ID : 264330151858

Option 1 ID : 264330595054

Option 2 ID : 264330595053

Option 3 ID : 264330595052

Option 4 ID : 264330595051

Status : Answered

Chosen Option : 2

Q.20 Select the most appropriate ANTONYM of the given word.
Ecstasy

- Ans ☐ 1. Euphoria
☐ 2. Coarse
☐ 3. Natural
☒ 4. Despair

Question ID : 264330152676

Option 1 ID : 264330598307

Option 2 ID : 264330598309

Option 3 ID : 264330598308

Option 4 ID : 264330598310

Status : Answered

Chosen Option : 4

Comprehension:

In the following passage, some words have been deleted. Read the passage carefully and select the most appropriate option to fill in each blank.

As a boy, I was always exploring lonely places—neglected gardens and orchards, unoccupied houses, patches of scrub or wasteland, the fields outside the town, the fringes of the forest. On one of my rambles (1)_____the bungalow, I pushed my way through a thicket of lantana bushes and stumbled over a thick stone slab, twisting my ankle slightly as I fell. For some time, I sat on the grass massaging my foot. When the pain eased, I looked more (2)_____at the stone slab and was surprised to find that it was a gravestone. It was almost entirely covered by ivy; obviously no one had been near it for years. I tugged at the ivy and some of it came away in my hands. There was some (3)_____lettering on the grave, half-obscured by grass and moss. I could make out a name—Rose—but little more. I sat there for some time, (4)_____over my discovery. I was wondering why 'Rose' should have been buried at so lonely a spot when there was a (5)_____not far away.

SubQuestion No : 21

Q.21 Select the most appropriate option to fill in blank number 1.

- Ans ☒ 1. before
☒ 2. behind
☒ 3. by dint of
☒ 4. below

Question ID : 264330153544

Option 1 ID : 264330601676

Option 2 ID : 264330601678

Option 3 ID : 264330601677

Option 4 ID : 264330601675

Status : Answered

Chosen Option : 2

Comprehension:

In the following passage, some words have been deleted. Read the passage carefully and select the most appropriate option to fill in each blank.

As a boy, I was always exploring lonely places—neglected gardens and orchards, unoccupied houses, patches of scrub or wasteland, the fields outside the town, the fringes of the forest. On one of my rambles (1)_____the bungalow, I pushed my way through a thicket of lantana bushes and stumbled over a thick stone slab, twisting my ankle slightly as I fell. For some time, I sat on the grass massaging my foot. When the pain eased, I looked more (2)_____at the stone slab and was surprised to find that it was a gravestone. It was almost entirely covered by ivy; obviously no one had been near it for years. I tugged at the ivy and some of it came away in my hands. There was some (3)_____lettering on the grave, half-obscured by grass and moss. I could make out a name—Rose—but little more. I sat there for some time, (4)_____over my discovery. I was wondering why 'Rose' should have been buried at so lonely a spot when there was a (5)_____not far away.

SubQuestion No : 22

Q.22 Select the most appropriate option to fill in blank number 2.

- Ans ☒ 1. closely
☒ 2. emptyily
☒ 3. frankly
☒ 4. lawfully

Question ID : 264330153545

Option 1 ID : 264330601681

Option 2 ID : 264330601679

Option 3 ID : 264330601680

Option 4 ID : 264330601682

Status : Answered

Chosen Option : 1

Comprehension:

In the following passage, some words have been deleted. Read the passage carefully and select the most appropriate option to fill in each blank.

As a boy, I was always exploring lonely places—neglected gardens and orchards, unoccupied houses, patches of scrub or wasteland, the fields outside the town, the fringes of the forest. On one of my rambles (1)_____the bungalow, I pushed my way through a thicket of lantana bushes and stumbled over a thick stone slab, twisting my ankle slightly as I fell. For some time, I sat on the grass massaging my foot. When the pain eased, I looked more (2)_____ at the stone slab and was surprised to find that it was a gravestone. It was almost entirely covered by ivy; obviously no one had been near it for years. I tugged at the ivy and some of it came away in my hands. There was some (3)_____ lettering on the grave, half-observed by grass and moss. I could make out a name—Rose—but little more. I sat there for some time, (4)_____ over my discovery. I was wondering why 'Rose' should have been buried at so lonely a spot when there was a (5)_____ not far away.

SubQuestion No : 23

Q.23 Select the most appropriate option to fill in blank number 3.

- Ans ☒ 1. idiotic
☒ 2. sturdy
☒ 3. blurred
☒ 4. nomadic

Question ID : 264330153546

Option 1 ID : 264330601686

Option 2 ID : 264330601683

Option 3 ID : 264330601684

Option 4 ID : 264330601685

Status : Answered

Chosen Option : 3

Comprehension:

In the following passage, some words have been deleted. Read the passage carefully and select the most appropriate option to fill in each blank.

As a boy, I was always exploring lonely places—neglected gardens and orchards, unoccupied houses, patches of scrub or wasteland, the fields outside the town, the fringes of the forest. On one of my rambles (1)_____the bungalow, I pushed my way through a thicket of lantana bushes and stumbled over a thick stone slab, twisting my ankle slightly as I fell. For some time, I sat on the grass massaging my foot. When the pain eased, I looked more (2)_____ at the stone slab and was surprised to find that it was a gravestone. It was almost entirely covered by ivy; obviously no one had been near it for years. I tugged at the ivy and some of it came away in my hands. There was some (3)_____ lettering on the grave, half-observed by grass and moss. I could make out a name—Rose—but little more. I sat there for some time, (4)_____ over my discovery. I was wondering why 'Rose' should have been buried at so lonely a spot when there was a (5)_____ not far away.

SubQuestion No : 24

Q.24 Select the most appropriate option to fill in blank number 4.

- Ans ☒ 1. sleeping
☒ 2. pondering
☒ 3. being
☒ 4. pulling

Question ID : 264330153547

Option 1 ID : 264330601690

Option 2 ID : 264330601687

Option 3 ID : 264330601688

Option 4 ID : 264330601689

Status : Answered

Chosen Option : 2

Comprehension:

In the following passage, some words have been deleted. Read the passage carefully and select the most appropriate option to fill in each blank.

As a boy, I was always exploring lonely places—neglected gardens and orchards, unoccupied houses, patches of scrub or wasteland, the fields outside the town, the fringes of the forest. On one of my rambles (1)_____the bungalow, I pushed my way through a thicket of lantana bushes and stumbled over a thick stone slab, twisting my ankle slightly as I fell. For some time, I sat on the grass massaging my foot. When the pain eased, I looked more (2)_____ at the stone slab and was surprised to find that it was a gravestone. It was almost entirely covered by ivy; obviously no one had been near it for years. I tugged at the ivy and some of it came away in my hands. There was some (3)_____ lettering on the grave, half-obscured by grass and moss. I could make out a name—Rose—but little more. I sat there for some time, (4)_____ over my discovery. I was wondering why 'Rose' should have been buried at so lonely a spot when there was a (5)_____ not far away.

SubQuestion No : 25

Q.25 Select the most appropriate option to fill in blank number 5.

- Ans ☒ 1. dormitory
☒ 2. kennel
☒ 3. sanctuary
☒ 4. cemetery

Question ID : **264330153548**

Option 1 ID : **264330601694**

Option 2 ID : **264330601691**

Option 3 ID : **264330601692**

Option 4 ID : **264330601693**

Status : **Answered**

Chosen Option : **4**